

Please write clearly in block capitals.

Centre number

Candidate number

Surname _____

Forename(s) _____

Candidate signature _____

Functional Skills Certificate

FUNCTIONAL MATHEMATICS


Level 2

Wednesday 17 May 2017 Morning Time allowed: 1 hour 30 minutes

Materials

For this paper you must have:

- a calculator
- mathematical instruments
- a copy of the Data Book (Examination) (enclosed).



Instructions

- Use black ink or black ball-point pen. Draw diagrams in pencil.
- Answer **all** questions.
- You must answer the questions in the spaces provided. Do not write outside the box around each page or on blank pages.
- Do all rough work in this book. Cross through any work you do not want to be marked.
- State the units of your answer where appropriate.

Information

- The marks for questions are shown in brackets.
- The maximum mark for this paper is 60.
- You may ask for more answer paper, graph paper and tracing paper. These must be tagged securely to this answer book.
- Evidence of checking is specifically assessed in Questions 1(c) and 4(d). These questions are indicated with a †.

Advice

- In all calculations, show clearly how you work out your answer.

For Examiner's Use	
Question	Mark
1	
2	
3	
4	
TOTAL	



There are no questions printed on this page

**DO NOT WRITE ON THIS PAGE
ANSWER IN THE SPACES PROVIDED**



Answer **all** questions in the spaces provided.

1 Hot Air Balloon

There is a **data sheet** for Hot Air Balloon.



Jo

Jo is a private balloon pilot.

She wants to qualify to carry passengers.

1 (a) Jo has already completed seven flights.

These flights lasted a total of 26 hours.

She completes three more flights.

	Day	Start time	Finish time
Flight 1	Monday	8.00 am	11.30 am
Flight 2	Friday	10.45 am	1.00 pm
Flight 3	Saturday	2.40 pm	6.00 pm

Jo says,

“I have now completed the hours I need to qualify.”

Is Jo correct?

You **must** show your working.

[4 marks]



1 (b) On one of the flights, the balloon reaches a height of 1546.5 metres.

Circle the height that the balloon reaches in **feet**.

[1 mark]

463.95

515.5

5103.45

5155

†1 (c) Jo rents a balloon with an envelope volume of 3198 m³
A balloon can lift 1 kilogram for every 3.9 m³ of envelope volume.

Work out the maximum number of kilograms this balloon can lift.

[2 marks]

Check your answer by rounding

3198 to the nearest 100

and

3.9 to the nearest whole number.

[1 mark]



1 (d) Jo rents the balloon for a year.
She makes these notes about the flights and costs for the year.

There will be
7 flights each month in April, May, September and October
9 flights each month in June, July and August.
The balloon can hold the pilot and 4 passengers.
I will charge each passenger £135 for a ticket.
My costs will be
£5700 for rent and insurance for the year
£42 for fuel for **each** flight.

Jo says,

“If I sell 80% of the tickets I will make a profit of **more than** £16 000”

Is she correct?

You **must** show your working.

[7 marks]



2

Muesli

I eat muesli for breakfast.

Rory

Rory finds the number of calories in different brands of muesli.

Muesli	Calories per serving
Brand W	222
Brand X	170
Brand Y	219
Brand Z	188

He also finds this information.

	Calories
One serving of yoghurt	50
Glass of apple juice	86
Glass of cranberry juice	48
Cup of coffee	25
Cup of tea	10



For a healthy diet, Rory is allowed 2700 calories a day.
He wants his breakfast to have between 15% and 20% of 2700 calories.

- 2 (a)** Show that Rory's breakfast should have between 405 and 540 calories.

[2 marks]

- 2 (b)** For breakfast, Rory has
- two servings of muesli
 - two servings of yoghurt
 - a glass of apple juice or cranberry juice
 - a cup of tea or coffee.

Plan a breakfast that Rory can have.
Include the total calories.

[3 marks]



Turn over ►

2 (c)

Lara makes her own muesli.

To make 500 g of muesli she needs

325 g oats

20 g dried apricots

35 g nuts

40 g dried cranberries

40 g raisins

40 g sunflower seeds

Lara makes these notes.

1 kg of oats costs 80p

100 g of nuts cost £1.40

For 500 g of muesli, the other ingredients cost a total of 96p

A box of similar muesli from a shop costs £2.94 for 500 g

She says,

“For 500 g, my muesli is cheaper than the shop muesli by **more than** £1.20”

Is she correct?

You **must** show your working.**[6 marks]**



2 (d) Sam also makes his own muesli from oats, fruit and seeds.

By weight, he wants

- $\frac{3}{5}$ of the muesli to be oats
- fruit to be four times as much as seeds.

He has 900 g of oats.

He uses all of the oats to make some muesli.

How many grams of fruit does he need?

[4 marks]

15

Turn over for the next question



Turn over ►

3 Canteen Survey

Betty is the manager of the college canteen.



Betty

I want to improve the service we offer.
To help me I will carry out a survey.

100 students completed Betty's survey form.

Here is one of the completed forms.

Canteen Survey

A Circle the number of days that you used the canteen last week.

0

1

2

3

4

5

B Tick a box to show which of these sandwiches you like best.

Cheese and Pickle	<input type="checkbox"/>
Egg and Cress	<input checked="" type="checkbox"/>
Bacon, Lettuce and Tomato	<input type="checkbox"/>
Chicken Salad	<input type="checkbox"/>
Tuna and Sweetcorn	<input type="checkbox"/>

C The canteen is thinking of selling sushi.

Tick a box to show what type of sushi you would like best.

Salmon	<input type="checkbox"/>
Prawn	<input type="checkbox"/>
Tuna	<input checked="" type="checkbox"/>
Vegetable	<input type="checkbox"/>
None	<input type="checkbox"/>



- 3 (a)** The mean number of days the 100 students used the canteen that week was 1.7
Betty put some more seats in the canteen.
She then asked the same 100 students question **A** again.
Here is some information about their answers.

Number of days	Number of students
0	16
1	14
2	11
3	44
4	13
5	2
	Total = 100

Betty says,

“The mean number of days the students used the canteen has increased.”

Is she correct?

You **must** show your working.

[4 marks]



The table shows information about the answers to question **B**.
It also shows the price of each type of sandwich.

Sandwich	Number of students	Price
Cheese and Pickle	8	£1.40
Egg and Cress	10	£1.60
Bacon, Lettuce and Tomato	32	£3.00
Chicken Salad	38	£2.00
Tuna and Sweetcorn	12	£3.00
Total = 100		

Betty usually makes 15 of each type of sandwich each day.

3 (b) Betty decides to double the **total** number of sandwiches she makes.

Show that she will now make 150 sandwiches each day.

[1 mark]



- 3 (c)** Betty uses the information in the table about the answers to question **B**.
She works out how many of each type of sandwich to make.
She then works out how much money she could take from selling the 150 sandwiches.

She says,

“If I sell all the sandwiches I will take **more than** £350 each day.”

Is she correct?

You **must** show your working.

[6 marks]



3 (d) Here is some information about the answers to question C.

Type of sushi	Tally
Salmon	
Prawn	
Tuna	
Vegetable	
None	


Betty wants to show this information in a diagram.

Draw an appropriate diagram that Betty could use.

Use the space below **or** the grid opposite.

[4 marks]





15

Turn over for the next question

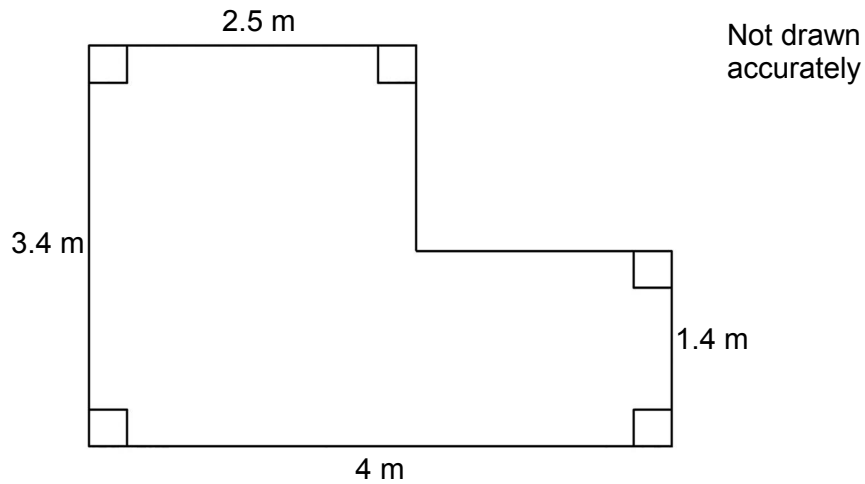


Turn over ►

4 Room Makeover

There is a **data sheet** for Room Makeover.

Here is a sketch of Tom's bedroom floor.



4 (a) Show that the floor area of this bedroom is 10.6 m^2

[2 marks]

4 (b) The bedroom has height 2.4 m
Tom wants a new **double** radiator.

Work out the smallest length of radiator he should buy.

You **must** show your working.

[3 marks]



4 (c) Tom wants to replace the carpet in his bedroom with laminate flooring.
He finds this information.

Foam underlay for laminate flooring
Sold in rolls
£17.95 a roll (covers 15 m²)

Oak laminate flooring
Sold in packs
£23.80 per pack (covers 1.72 m²)

Edging
Sold in strips
£1.65 per 2-metre strip

Tom says,

“It will cost under £200 to buy enough underlay, laminate flooring and edging.”

Is Tom correct?

You **must** show your working.

[7 marks]



- †4 (d) Tom hires Ali to lay the floor.
Ali charges £18 per hour.
He works for $7\frac{3}{4}$ hours.

How much does he charge Tom for $7\frac{3}{4}$ hours work?

[2 marks]

Check your answer.
Show how you have done your check.

[1 mark]

15

END OF QUESTIONS



There are no questions printed on this page

**DO NOT WRITE ON THIS PAGE
ANSWER IN THE SPACES PROVIDED**



There are no questions printed on this page

**DO NOT WRITE ON THIS PAGE
ANSWER IN THE SPACES PROVIDED**

Copyright Information

For confidentiality purposes, from the November 2015 examination series, acknowledgements of third party copyright material will be published in a separate booklet rather than including them on the examination paper or support materials. This booklet is published after each examination series and is available for free download from www.aqa.org.uk after the live examination series.

Permission to reproduce all copyright material has been applied for. In some cases, efforts to contact copyright-holders may have been unsuccessful and AQA will be happy to rectify any omissions of acknowledgements. If you have any queries please contact the Copyright Team, AQA, Stag Hill House, Guildford, GU2 7XJ.

Copyright © 2017 AQA and its licensors. All rights reserved.

