



Surname _____

Other Names _____

Centre Number _____

Candidate Number _____

Candidate Signature _____

A-level

PHYSICS

Paper 3

Section B Engineering physics

7408/3BC

Monday 3 June 2019 Afternoon

Time allowed: The total time for both sections of this paper is 2 hours. You are advised to spend approximately 50 minutes on this section.

At the top of the page, write your surname and other names, your centre number, your candidate number and add your signature.

[Turn over]



For this paper you must have:

- a pencil and a ruler
- a scientific calculator
- a Data and Formulae Booklet.

INSTRUCTIONS

- Use black ink or black ball-point pen.
- Answer ALL questions.
- You must answer the questions in the spaces provided. Do not write on blank pages.
- If you need extra space for your answer(s), use the lined pages at the end of this book. Write the question number against your answer(s).
- Do all rough work in this book. Cross through any work you do not want to be marked.
- Show all your working.



INFORMATION

- The marks for questions are shown in brackets.
- The maximum mark for this paper is 35.
- You are expected to use a scientific calculator where appropriate.
- A Data and Formulae Booklet is provided as a loose insert.

DO NOT TURN OVER UNTIL TOLD TO DO SO

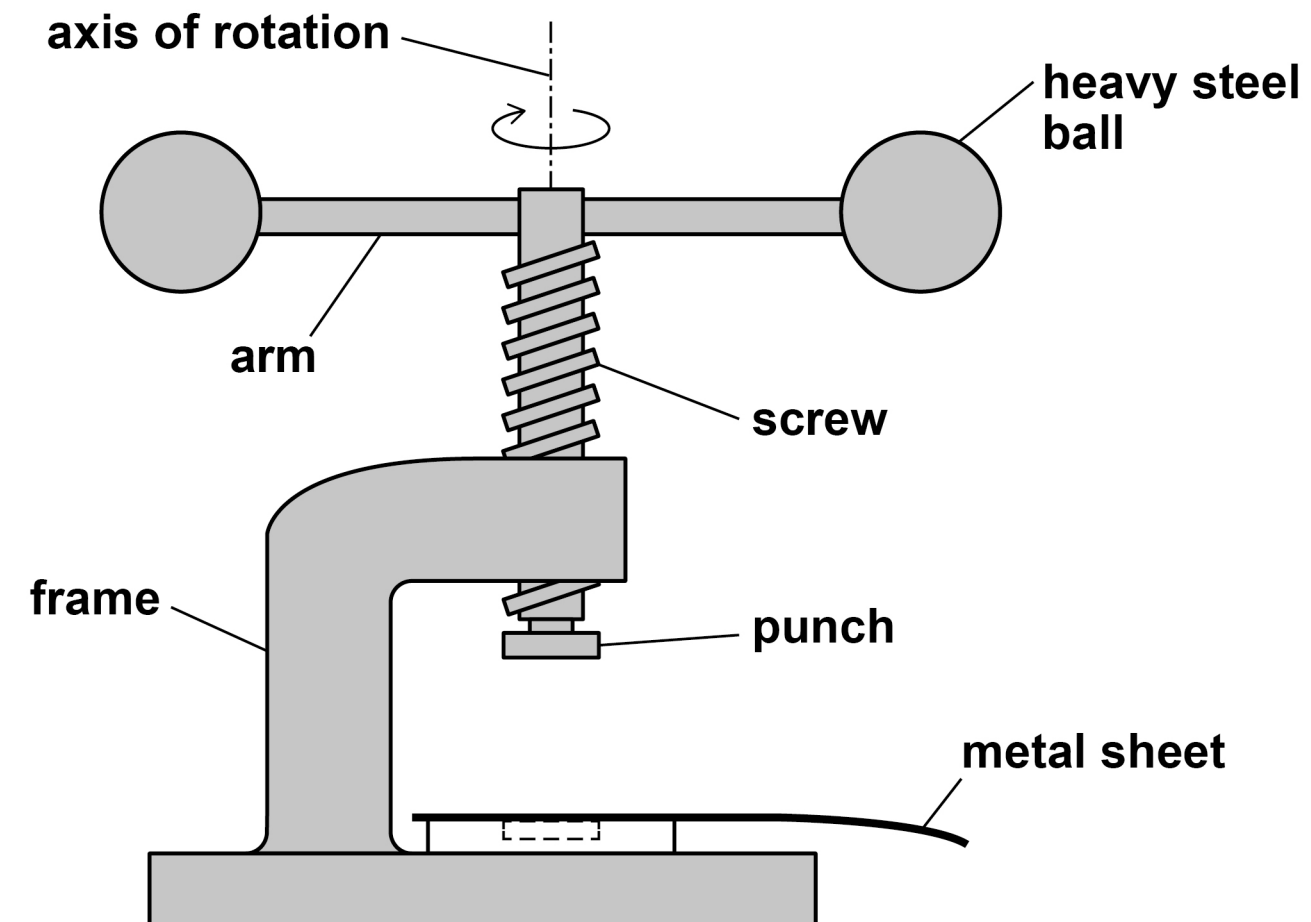


SECTION B

Answer ALL questions in this section.

- 01** The fly-press shown in FIGURE 1 is used by a jeweller to punch shapes out of a thin metal sheet.

FIGURE 1



The frame holds a screw and punch. Two arms are attached to the screw, each loaded with a heavy steel ball. The screw is driven downwards when the arms are rotated.



Kinetic energy is stored in the rotating parts: the balls, arms, screw and punch. This energy is used to punch the shape out of the metal sheet.

- 01.1** When the punch reaches the metal sheet, the rotational speed of the arms is 2.9 rev s^{-1} . At this speed the rotational kinetic energy of the rotating parts is 10.3 J.

Calculate the moment of inertia of the rotating parts about the axis of rotation. [2 marks]

moment of inertia = _____ kg m^2

[Turn over]



01.2 The total mass of the screw, punch and arms is the same as the total mass of the two balls.

Explain why the moment of inertia of the screw, punch and arms about the axis of rotation is MUCH smaller than the moment of inertia of the steel balls about the same axis. [2 marks]



- 01.3** During the punching of the metal sheet, the rotating parts of the fly-press are brought uniformly to rest from an initial rotational speed of 2.9 rev s^{-1} in a time of 89 ms.

Determine

- the angular deceleration
- the angle turned through by the rotating parts.

[3 marks]

angular deceleration = _____ rad s^{-2}

angle = _____ rad

[Turn over]



01.4 For thicker or stiffer metal sheets the rotational kinetic energy at 2.9 rev s^{-1} is not enough to punch out the shape.

The distance from the axis of rotation to the centre of each ball is y .

The radius of each ball is R .

The stored energy can be increased by

either

- increasing y by 15% without changing R

or

- increasing R by 15% without changing y .

Deduce which of these would produce the greater increase in stored energy. [3 marks]



BLANK PAGE



01.5 Which of the following is the SI unit for angular impulse?

Tick (✓) ONE box. [1 mark]

☐

N m s⁻¹

☐

N s

☐

N m s

☐

kg m² s⁻²

[Turn over]

11



0 2

A turning moment diagram is a graph showing the variation of torque produced by an engine or motor with the angle of rotation of the output shaft.

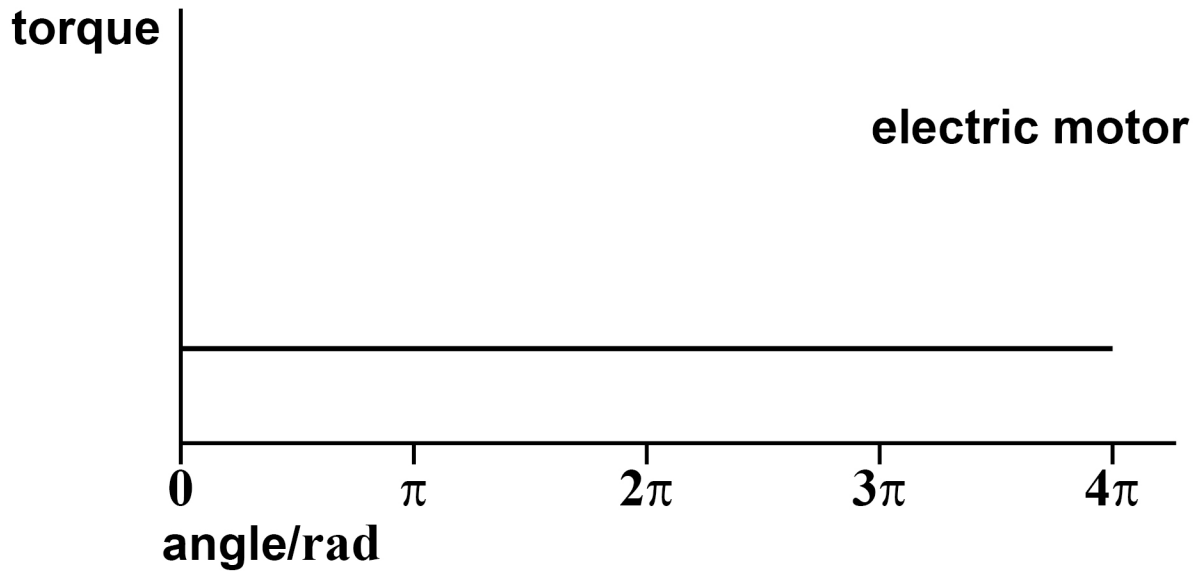
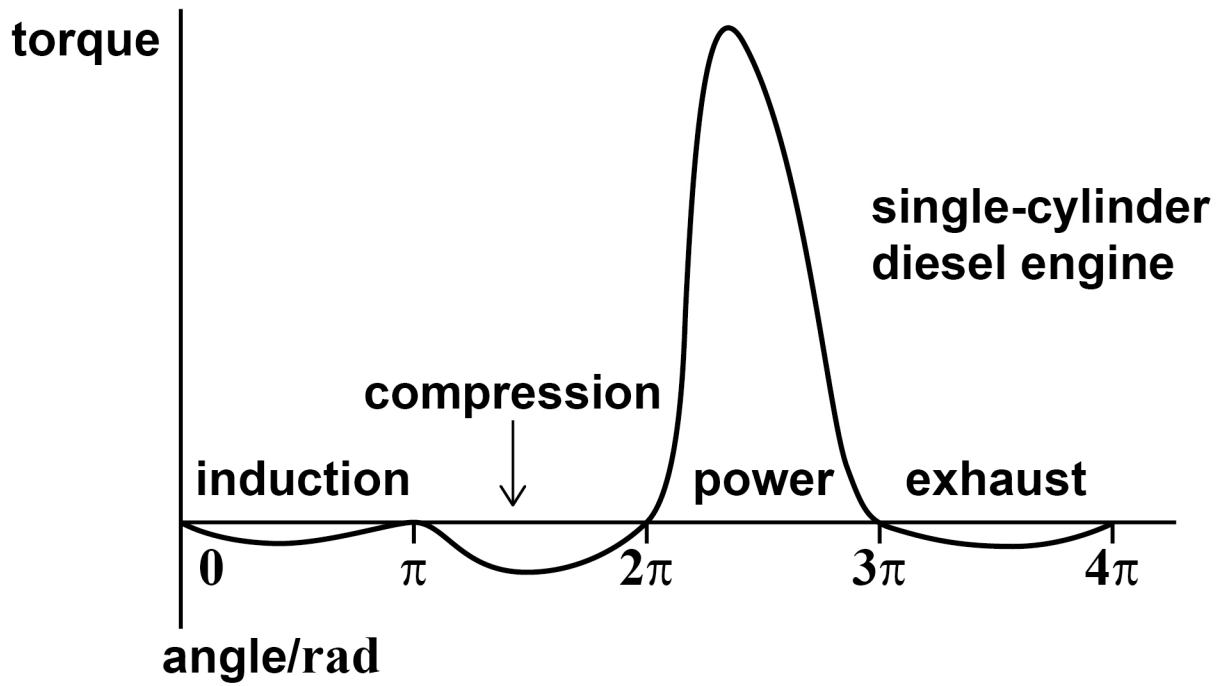
FIGURE 2, on the opposite page, shows the turning moment diagrams for a single-cylinder diesel engine and an electric motor that have the same output power.

0 2**. 1**

State what is represented by the area between the curve and the angle axis for a turning moment diagram. [1 mark]



FIGURE 2



[Turn over]



- 02.2** The diesel engine or the electric motor may be used to drive a machine that has a low moment of inertia and that requires an almost constant torque.

Discuss why, to drive this machine, the diesel engine would need to be fitted with a flywheel.

In your answer you should explain

- why the electric motor does NOT require a flywheel**
- why the torque of the diesel engine varies over one cycle, including why there are points where the torque is zero**
- how the moment of inertia of the flywheel influences the motion of the output shaft of the diesel engine.**

[6 marks]



[illegible]

0	3
---	---

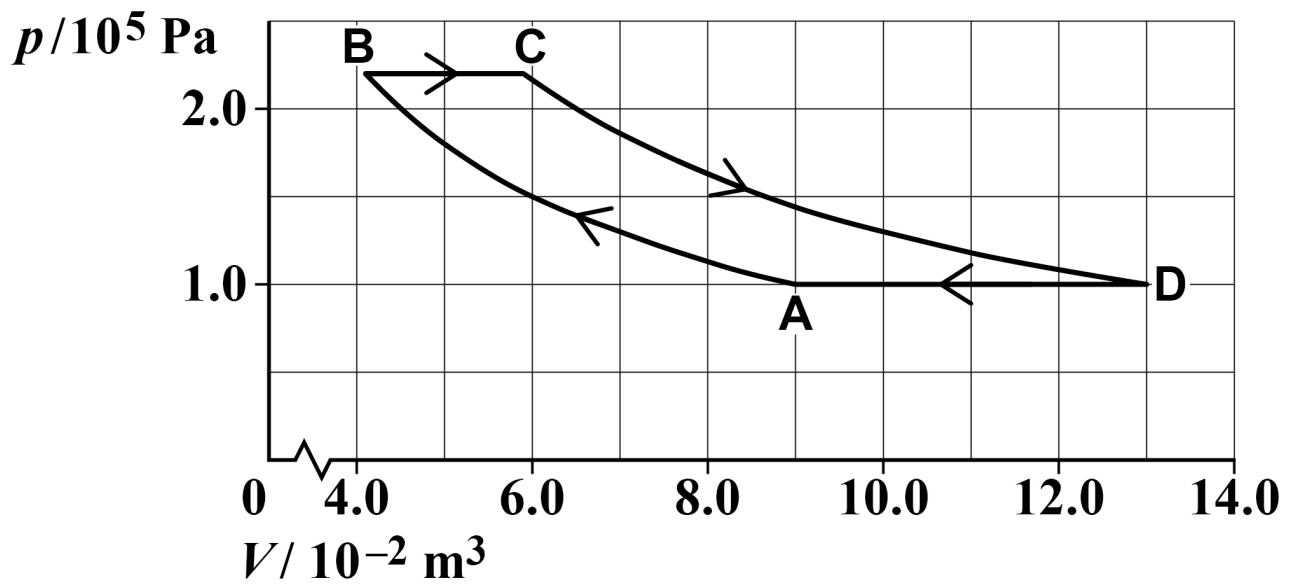
In an ideal heat-engine cycle a fixed mass of air is taken through the following four processes.

- A → B** isothermal compression from an initial pressure of 1.0×10^5 Pa and a volume of $9.0 \times 10^{-2} \text{ m}^3$ to a pressure of 2.2×10^5 Pa. The work done on the air is 7100 J.
- B → C** increase in volume at constant pressure to a volume of $5.9 \times 10^{-2} \text{ m}^3$.
- C → D** isothermal expansion to a pressure of 1.0×10^5 Pa and a volume of $13 \times 10^{-2} \text{ m}^3$. The work done by the air is 10 300 J.
- D → A** reduction in volume at constant pressure to the original volume.

FIGURE 3 shows the cycle.



FIGURE 3



03.1 Show, by calculation, that the volume at B is $4.1 \times 10^{-2} \text{ m}^3$. [1 mark]

[Turn over]



- 03.2** The temperature of the air between A and B is 295 K.

Show that the temperature of the air at C is about 420 K. [2 marks]

- 03.3** An ideal engine based on this cycle uses a device called an economiser. The economiser stores ALL the energy transferred in the cooling process $D \rightarrow A$ and gives up ALL this energy to the air in process $B \rightarrow C$. This means that an external source supplies energy to the air by heating only in process $C \rightarrow D$.

Complete TABLE 1 to show the values of work done W and energy transfer Q in each of the four processes.

Use the space below TABLE 1 for any calculations.

Use a consistent sign convention. [2 marks]



TABLE 1

Process	Work done W / J	Energy transfer Q / J
$A \rightarrow B$	-7100	-7100
$B \rightarrow C$	4000	
$C \rightarrow D$	10 300	10 300
$D \rightarrow A$		-14 000

[Turn over]



- 03.4** Explain why W is equal to Q in process $A \rightarrow B$ and in process $C \rightarrow D$. [2 marks]

- 03.5** It is claimed that the efficiency of this engine cycle is the same as the maximum theoretical efficiency of a heat engine operating between the same temperatures.

Deduce whether this claim is true. [3 marks]



[Turn over]



BLANK PAGE



03.6 Discuss ONE problem that would be faced by an engineer designing a real engine based on this cycle. [2 marks]

[Turn over]

12



0 4

Tumble-dryers blow hot air over wet clothes that are moving in a rotating drum.

Conventional tumble-dryers heat the air in the drum electrically; other dryers use a heat pump to heat the air.

0 4 . 1

A typical conventional tumble-dryer uses about 0.6 kW h per kg of clothes.

A heat pump tumble-dryer uses about 0.25 kW h per kg.

Explain why the heat pump tumble-dryer uses less electrical energy than the conventional tumble-dryer to dry the same load. [2 marks]



[Turn over]



04.2 The cold space of the heat pump is the room in which the tumble-dryer is placed.
The hot space is the air in the tumble-dryer and is at a temperature of 160°C .

A heat pump tumble-dryer can be placed in a kitchen at a temperature of 20°C , or in a garage at around 5°C .

Deduce which place would result in lower running costs for the tumble-dryer.
Support your answer with calculations.
[3 marks]



END OF QUESTIONS

5



**Additional page, if required.
Write the question numbers in the left-hand margin.**

[illegible]

**Additional page, if required.
Write the question numbers in the left-hand margin.**

[illegible]

**Additional page, if required.
Write the question numbers in the left-hand margin.**

[illegible]

**Additional page, if required.
Write the question numbers in the left-hand margin.**

[illegible]

BLANK PAGE

For Examiner's Use	
Question	Mark
1	
2	
3	
4	
TOTAL	

Copyright information

For confidentiality purposes, acknowledgements of third-party copyright material are published in a separate booklet rather than including them on the examination paper or support materials. This booklet is published after each examination series and is available for free download from www.aqa.org.uk after the live examination series.

Permission to reproduce all copyright material has been applied for. In some cases, efforts to contact copyright-holders may have been unsuccessful and AQA will be happy to rectify any omissions of acknowledgements. If you have any queries please contact the Copyright Team, AQA, Stag Hill House, Guildford, GU2 7XJ.

Copyright © 2019 AQA and its licensors. All rights reserved.

IB/M/IK/Jun19/7408/3BC/E1