



Surname \_\_\_\_\_

Other Names \_\_\_\_\_

Centre Number \_\_\_\_\_

Candidate Number \_\_\_\_\_

Candidate Signature \_\_\_\_\_

I declare this is my own work.

## A-level

# FURTHER MATHEMATICS

Paper 3 Mechanics

## 7367/3M

Thursday 11 June 2020      Afternoon

Time allowed: 2 hours

At the top of the page, write your surname and other names, your centre number, your candidate number and add your signature.

[Turn over]



- You must have the AQA formulae and statistical tables booklet for A-level Mathematics and A-level Further Mathematics.
- You should have a scientific calculator that meets the requirements of the specification. (You may use a graphical calculator.)
- You must ensure you have the other optional Question Paper/Answer Book for which you are entered (EITHER Discrete OR Statistics). You will have 2 hours to complete BOTH papers.

## INSTRUCTIONS

- Use black ink or black ball-point pen. Pencil should only be used for drawing.
- Answer ALL questions.
- You must answer each question in the space provided for that question.
- Do NOT write on blank pages.
- Show all necessary working; otherwise marks for method may be lost.
- Do all rough work in this book. Cross through any work you do not want to be marked.



## **INFORMATION**

- **The marks for questions are shown in brackets.**
- **The maximum mark for this paper is 50.**

## **ADVICE**

- **Unless stated otherwise, you may quote formulae, without proof, from the booklet.**
- **You do not necessarily need to use all the space provided.**


**DO NOT TURN OVER UNTIL TOLD TO DO SO**



Answer ALL questions in the spaces provided.

- 1 A rigid rod,  $AB$ , has mass 2 kg and length 4 metres.

Two particles of masses 5 kg and 3 kg are fixed to  $A$  and  $B$  respectively to create a composite body, as shown in the diagram.



Find the distance of the centre of mass of the composite body from  $B$ .

Circle your answer. [1 mark]

- 1.5 metres      1.6 metres      2.4 metres      2.5 metres

- 2 The tension,  $T$  newtons, in a spring is given by  $T = 20e$ , where  $e$  metres is the extension of the spring.

Calculate the work done when the extension is increased from 0.2 metres to 0.4 metres.

Circle your answer. [1 mark]

- 0.4 J      0.9 J      1.2 J      1.6 J



- 3 The speed,  $v$ , of a particle moving in a horizontal circle is given by the formula  $v = r\omega$  where:

$v$  = speed

$r$  = radius

$\omega$  = angular speed.

Show that the dimensions of angular speed are  $T^{-1}$  [2 marks]

---

---

---

---

---

---

---

---

---

---

[Turn over]



4 A car has mass 1000 kg and travels on a straight horizontal road.

The maximum speed of the car on this road is  $48 \text{ m s}^{-1}$

In a simple model, it is assumed that the car experiences a resistance force that is proportional to its speed.

When the car travels at  $20 \text{ m s}^{-1}$ , the magnitude of the resistance force is 600 newtons.

4 (a) Show that the maximum power of the car is 69 120 W [2 marks]

---

---

---

---

---

---

---

---

---

---

---

---

---

---

---

---

---

---

---

---

---

---

---

---

---

---

---

4 (b) Find the maximum acceleration of the car when it is travelling at  $25\text{ m s}^{-1}$  [3 marks]

---

---

---

---

---

---

---

---

---

---

---

---

---

---

---

---

---

---

---

---

[Turn over]



- 4 (c) Find the maximum acceleration of the car when it is travelling at  $3 \text{ m s}^{-1}$  [1 mark]

---

---

---

---

---

---

---

---

---

---





4 (d) **Comment on the validity of the model in the context of your answers to parts (b) and (c). [2 marks]**

---

---

---

---

---

---

---

---

---

---

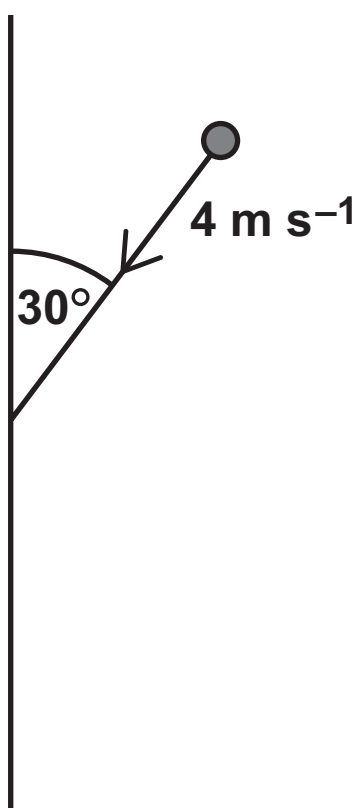
**[Turn over]**



5 A ball, of mass 0.3 kg, is moving on a smooth horizontal surface.

The ball collides with a smooth fixed vertical wall and rebounds.

Before the ball hits the wall, the ball is moving at  $4 \text{ m s}^{-1}$  at an angle of  $30^\circ$  to the wall as shown in the diagram.



The magnitude of the force,  $F$  newtons, exerted on the ball by the wall at time  $t$  seconds is modelled by

$$F = kt^2(0.1 - t)^2 \quad \text{for} \quad 0 \leq t \leq 0.1$$

where  $k$  is a constant.

The ball is in contact with the wall for 0.1 seconds.



- 5 (a)** Show that the impulse exerted on the ball by the wall while they are in contact has magnitude  $\frac{k}{3000000}$

**Fully justify your answer. [4 marks]**

---

---

---

---

---

---

---

---

---

---

---

---

---

---

---

---

---

---

---

---

---

---

---

**[Turn over]**



---

---

---

---

---

---

---

---

---

---

---

---

---

---

---

---

---

---

---

---

---

---

---

---

---

---



---

---

---

---

---

[Turn over]



5 (b) Explain why  $1\,800\,000 < k \leq 3\,600\,000$

Fully justify your answer. [5 marks]

---

---

---

---

---

---

---

---

---

---

---

---

---

---

---

---

---

---

---

---

---

---

---

---





---

---

---

---

---





5 (c) Given that  $k = 2\,400\,000$

Find the speed of the ball after the collision with the wall. [4 marks]

---

---

---

---

---

---

---

---

---

---

---

---

---

---

---

---

---

---

---

---

---

---

---

---

[Turn over]



Ruled lines for writing, consisting of 20 horizontal black lines spanning the width of the page.



---

---

---

---

---

**[Turn over]**

**6** A particle moves with constant speed on a circular path of radius 2 metres.

The centre of the circle has position vector  $2\mathbf{j}$  metres.

At time  $t = 0$ , the particle is at the origin.

The particle returns to the origin every 4 seconds.

The unit vectors  $\mathbf{i}$  and  $\mathbf{j}$  are perpendicular.



- 6 (a) Calculate the angular speed of the particle.  
[2 marks]

---

---

---

---

---

---

---

---

---

---

---

---

---

---

---

---

---

---

---

---

---

---

---

---

[Turn over]



- 6 (b) Write down an expression for the position vector of the particle at time  $t$  seconds.  
[2 marks]

---

---

---

---

---

---

---

---

---

---

---

---

---

---

---

---

---

---

---

---

---

---

---



- 6 (c) Find an expression for the acceleration of the particle at time  $t$  seconds. [3 marks]

---

---

---

---

---

---

---

---

---

---

---

---

---

---

---

---

---

---

---

---

---

---

---

[Turn over]



**6 (d) State the magnitude of the acceleration of the particle. [1 mark]**

---

---

---

---

---

**6 (e) State the time when the acceleration is first directed towards the origin. [1 mark]**

---

---

---

---

---





**BLANK PAGE**

**[Turn over]**



**7 IN THIS QUESTION USE  $g = 9.8 \text{ m s}^{-2}$**

**A box, of mass 8 kg, is on a rough horizontal surface.**

**A string attached to the box is used to pull it along the surface.**

**The string is inclined at an angle of  $40^\circ$  above the horizontal.**

**The tension in the string is 50 newtons.**

**As the box moves a distance of  $x$  metres, its speed increases from  $2 \text{ m s}^{-1}$  to  $5 \text{ m s}^{-1}$**

**The coefficient of friction between the box and the surface is 0.4**

**7 (a) By using an energy method, find  $x$ . [6 marks]**

---

---

---

---

---

---

---

---

---

---





---

---

---

---

---

---

---

---

---

---

---

---

---

---

---

---

---

---

---

---

---

---

---

---

---

---

---

---

---



- 7 (b) Describe how the model could be refined to obtain a more realistic value of  $x$  and use an energy argument to explain whether this would increase or decrease the value of  $x$ . [2 marks]

---

---

---

---

---

---

---

---

---

---



**BLANK PAGE**

**[Turn over]**



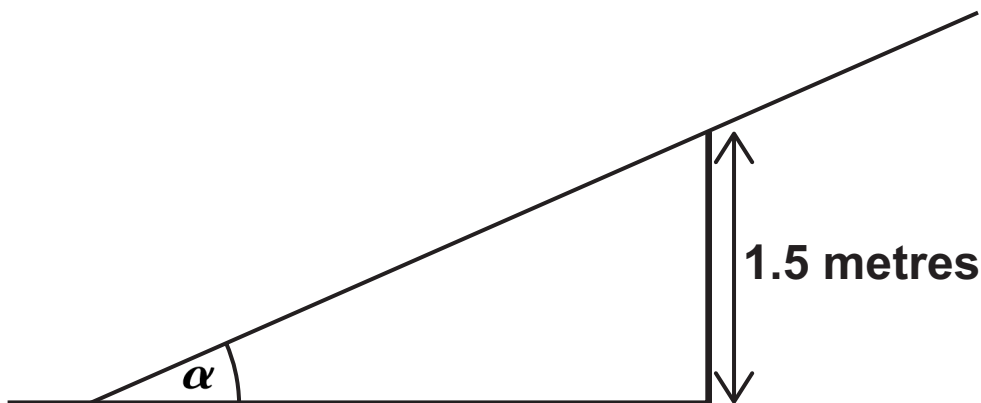
8 A ladder has length 4 metres and mass 20 kg

The ladder rests in equilibrium with one end on a horizontal surface and the ladder resting on the top of a vertical wall.

In this position the ladder is on the point of slipping.

The top of the wall is 1.5 metres above the horizontal surface.

The angle between the ladder and the horizontal surface is  $\alpha$ , as shown in the diagram.



The coefficient of friction between the ladder and the wall is 0.5

The coefficient of friction between the ladder and the ground is also 0.5

Show that

$$\cos \alpha \sin^2 \alpha = \frac{3}{10}$$

stating clearly any assumptions you make.  
[8 marks]











**BLANK PAGE**

For Examiner's Use	
Question	Mark
1	
2	
3	
4	
5	
6	
7	
8	
<b>TOTAL</b>	

**Copyright information**

For confidentiality purposes, all acknowledgements of third-party copyright material are published in a separate booklet. This booklet is published after each live examination series and is available for free download from [www.aqa.org.uk](http://www.aqa.org.uk).

Permission to reproduce all copyright material has been applied for. In some cases, efforts to contact copyright-holders may have been unsuccessful and AQA will be happy to rectify any omissions of acknowledgements. If you have any queries please contact the Copyright Team.

Copyright © 2020 AQA and its licensors. All rights reserved.

**GB/VW/Jun20/7367/3M/E3**