



**GCSE
GEOGRAPHY**

**Paper 2 Challenges in the
Human Environment**

8035/2

Insert

[Turn over]

FIGURE 2 – For use with Question 1

FIGURE 2 shows a small, single storey concrete building which is a shared toilet. The building is beside a pathway where people are walking. The ground around the toilet and pathway is covered in rubbish.

FIGURE 4 – For use with Question 1



[Turn over]

FIGURE 5a

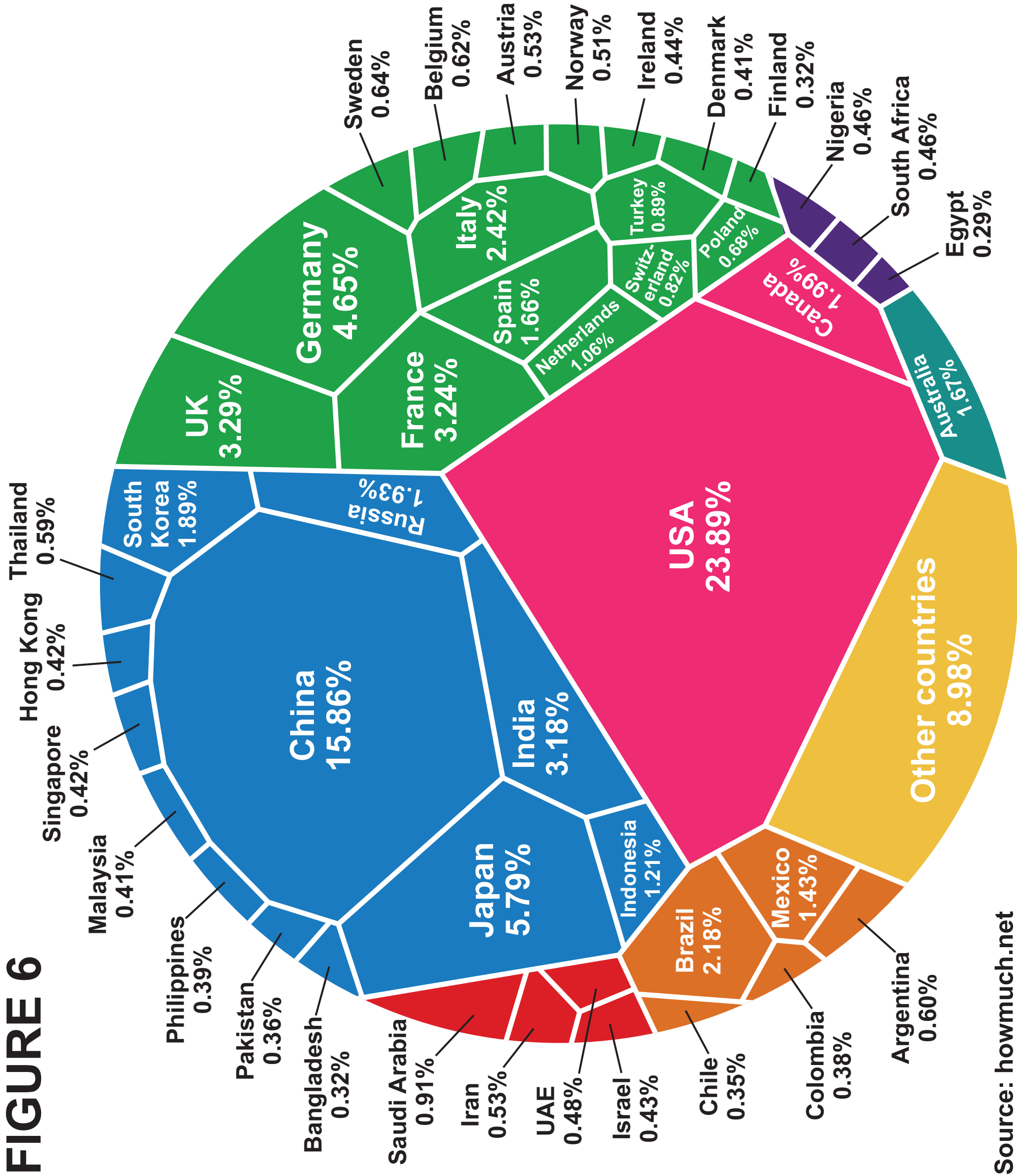
FIGURE 5a shows an empty street with single storey retail and industrial outlets, all of which are closed.

FIGURE 5b

FIGURE 5b shows the same street as FIGURE 5a. The roadway has been replaced with pavement and many people are walking around. The previously closed retail and industrial outlets are open.

[Turn over]

FIGURE 6



Source: howmuch.net

KEY

Region of the world

- Africa**
- Australia**
- Latin America and Caribbean**
- Middle East**
- Europe**
- Asia**
- North America**
- Other countries**

[Turn over]

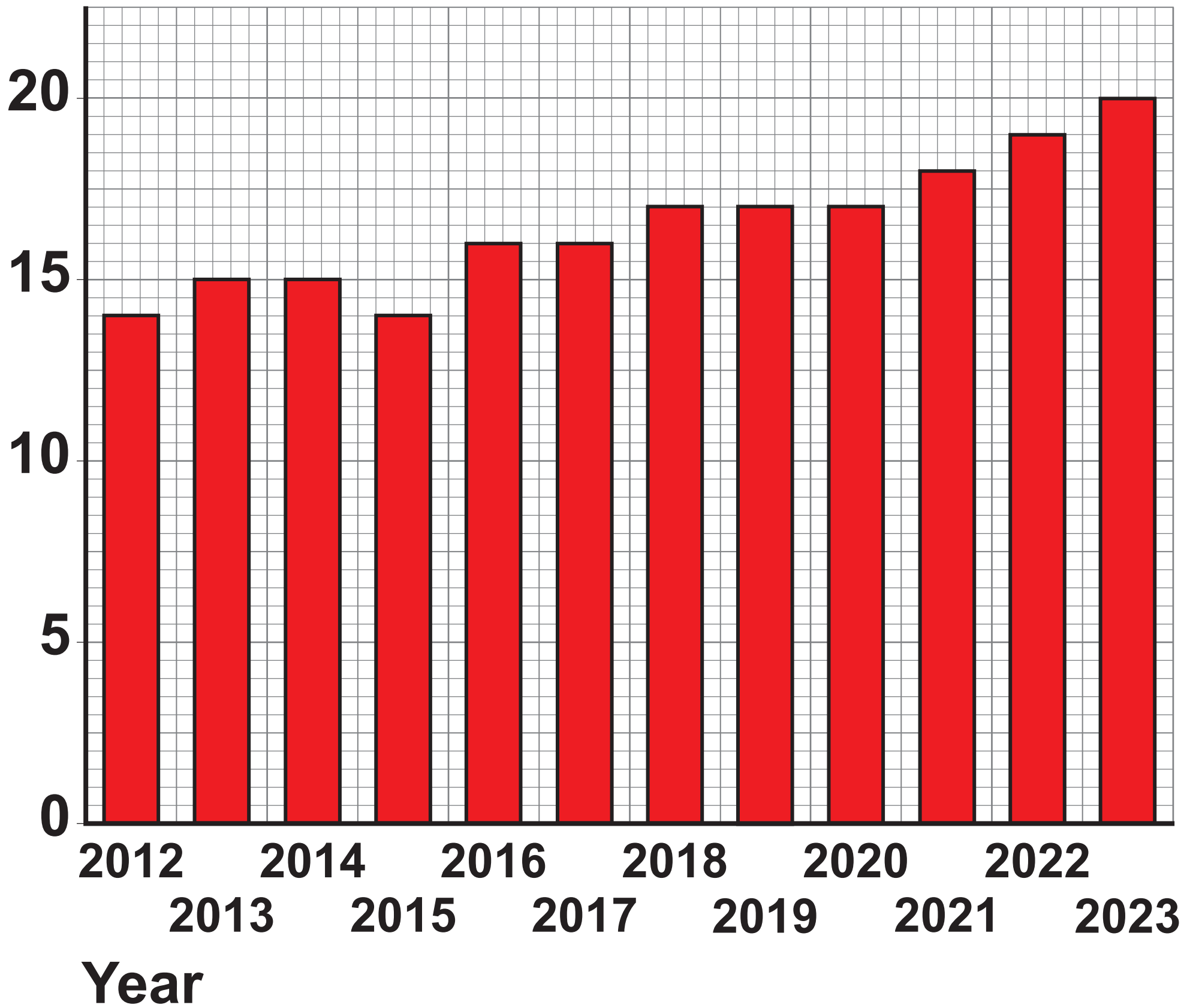
FIGURE 7a**Tourist arrivals
(millions)**

FIGURE 7b

UN habitat spokesperson

“Safari tourism helps promote conservation.”

Local farmer

“Elephants damage my crops but I am not allowed to shoot them because they are protected in tourist safari parks.”

Government minister

“Tourism helps develop infrastructure in the country.”

Local resident

“I can only get work as a driver or waiter at a safari camp.”

World Bank official

“Tourism brings much needed foreign currency.”

[Turn over]

FIGURE 8



KEY

**Life expectancy
(UK average)**

-  **Below average**
-  **Average**
-  **Above average**

0  **100 km**

[Turn over]

FIGURE 9

Charts showing Income spent on food in 2016 in various countries cannot be reproduced here due to third-party copyright restrictions.

BLANK PAGE

[Turn over]

FIGURE 10a

**£ per
megawatt
hour
(mwh)**

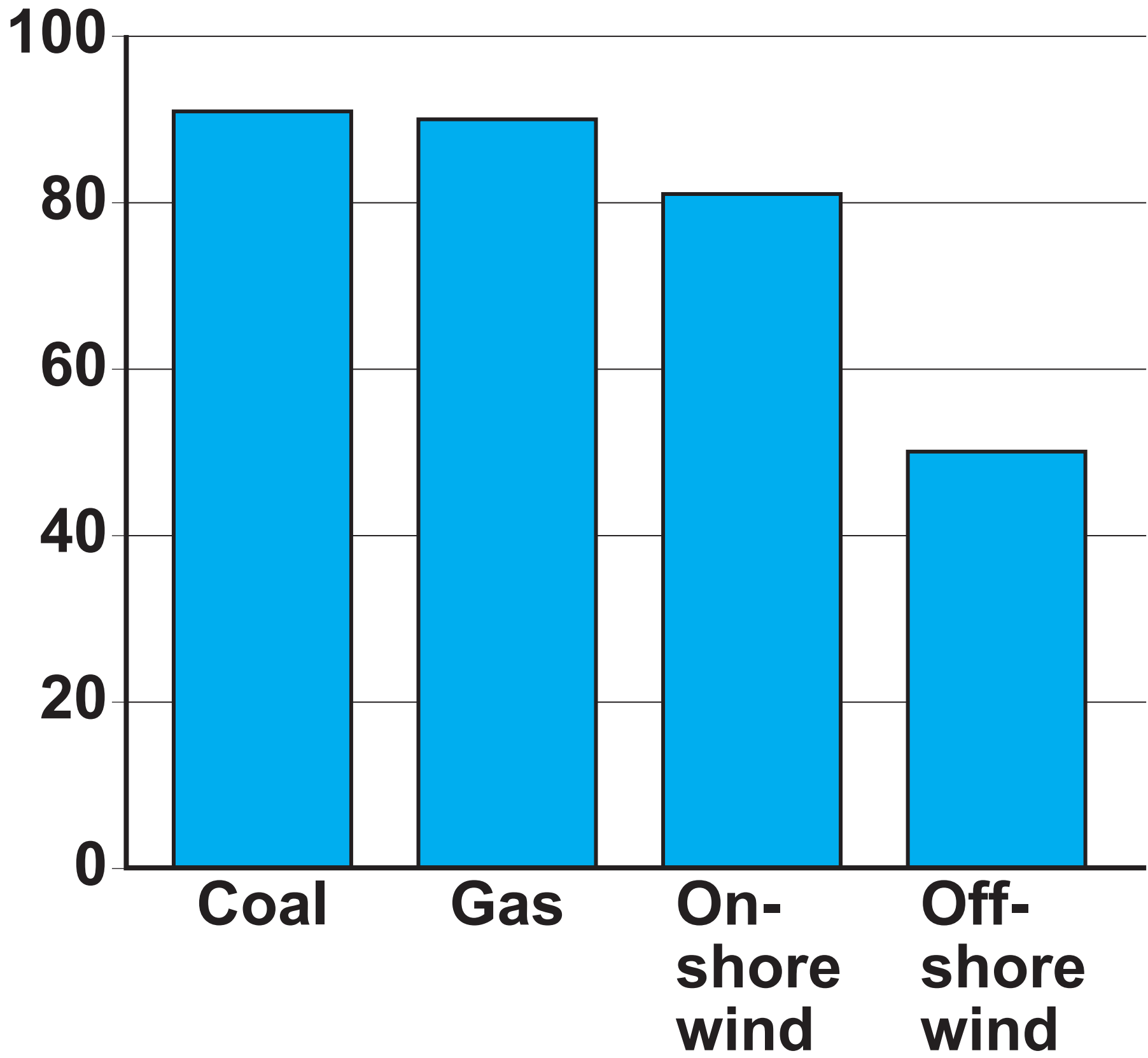


FIGURE 10b

An image shows an area of open land with a wind turbine. A sign to the front of the image reads 'Say No to 300 ft wind turbine in Seaton'. In the background of the image is an area of open water containing many wind turbines.

[Turn over]

FIGURE 12a

FIGURE 12a shows an area of garden on top of a building. In the background of the image, the high rise buildings of New York can be seen.

FIGURE 12b

The logo is blue and the words ‘CERTIFIED SUSTAINABLE SEAFOOD MSC’ www.msc.org can be read. The right of the logo is the shape of a fish, styled with a ‘tick’ forming part of the fish.

[Turn over]

FIGURE 14a

**Diagram Grey Water System
cannot be reproduced here due to third-party
copyright restrictions.**

FIGURE 14b



FIGURE 14b shows a rain barrel connected to the gutters of a building. A watering can is placed to the side of the barrel, next to the barrel's tap.

[Turn over]

FIGURE 16a

Savings shown are per year

**Insulate loft –
save £180**

**Double glaze
windows –
save £180**

**Insulate walls –
save £140
(or £490 in an
older house)**

**Install new
boiler –
save £310**

**Switch off TVs,
laptops –
save £50 – £80**

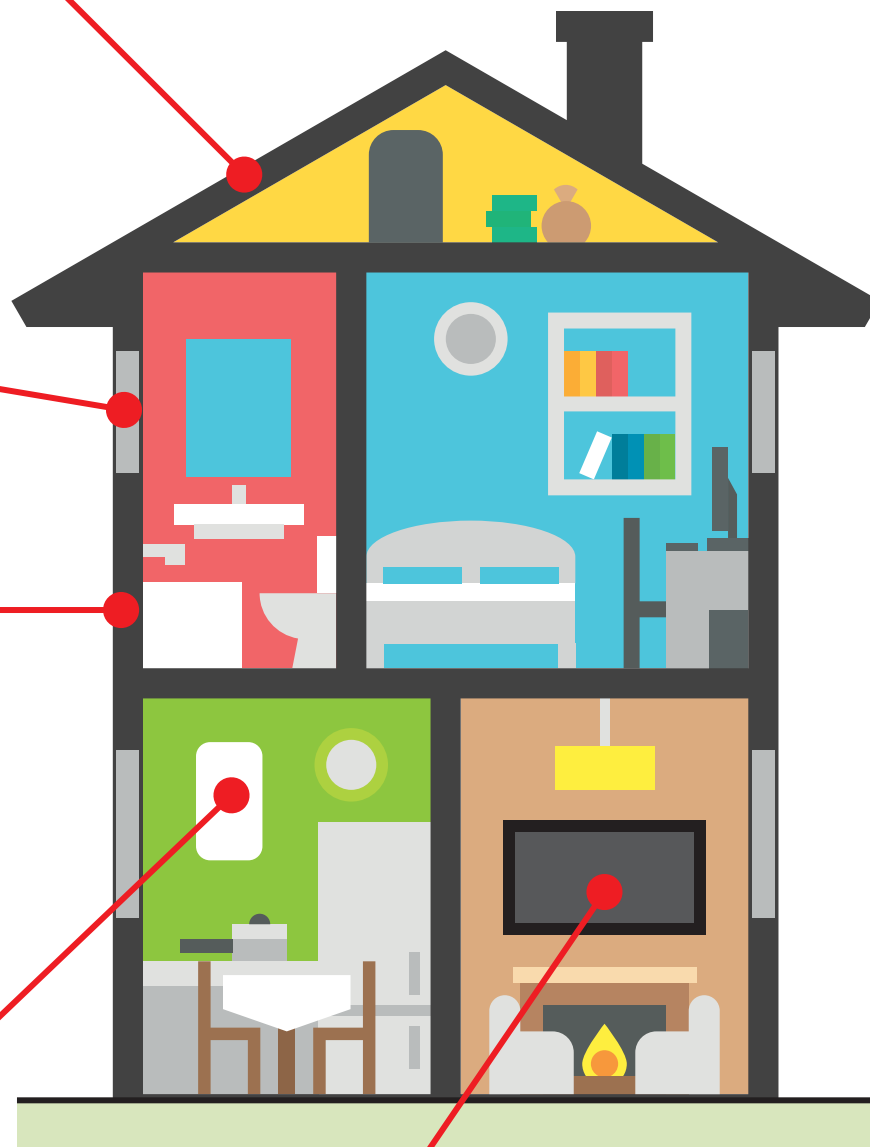


FIGURE 16b

FIGURE 16b shows two car parking spaces to the side of a building. The spaces are green with white labelling and a graphic of a car with an electric plug. The labelling reads 'EV ONLY'

END OF FIGURES

BLANK PAGE

Copyright information

For confidentiality purposes, all acknowledgements of third-party copyright material are published in a separate booklet. This booklet is published after each live examination series and is available for free download from www.aqa.org.uk.

Permission to reproduce all copyright material has been applied for. In some cases, efforts to contact copyright-holders may have been unsuccessful and AQA will be happy to rectify any omissions of acknowledgements. If you have any queries please contact the Copyright Team.

Copyright © 2020 AQA and its licensors. All rights reserved.

G/KL/Jun20/8035/2/Insert/E2

