



Surname _____

Other Names _____

Centre Number _____

For Examiner's Use

Candidate Number _____

Candidate Signature _____

I declare this is my own work.

GCSE STATISTICS

F

8382/1F

Foundation Tier Paper 1

Thursday 11 June 2020 Afternoon

Time allowed: 1 hour 45 minutes

MATERIALS

For this paper you must have:

- a calculator
- mathematical instruments.



At the top of the page, write your surname and other names, your centre number, your candidate number and add your signature.

[Turn over]



BLANK PAGE



INSTRUCTIONS

- Use black ink or black ball-point pen. Draw diagrams in pencil.
- Answer ALL questions.
- You must answer the questions in the spaces provided. Do not write on blank pages.
- Do all rough work in this book. Cross through any work you do not want to be marked.

INFORMATION

- The marks for questions are shown in brackets.
- The maximum mark for this paper is 80.
- You may ask for more answer paper and graph paper. These must be tagged securely to this answer booklet.

DO NOT TURN OVER UNTIL TOLD TO DO SO



Answer ALL questions in the spaces provided.

- 1 What type of data is the number of adverts you see when watching a film?

Circle your answer. [1 mark]

continuous

grouped

categorical

discrete

| |
|---|
| |
| 1 |

- 2 Which of these values could NOT be a measure of correlation?

Circle your answer. [1 mark]

-0.9

0

+0.5

+1.2

| |
|---|
| |
| 1 |

- 3 Which of these is a SMALL PART of the population, used to avoid having to ask everyone?

Circle your answer. [1 mark]

census

questionnaire

sample

representative

| |
|---|
| |
| 1 |



4

Here are the scores obtained when a biased spinner is spun 100 times.

| | | | | | | | | |
|-----------|----|---|---|---|----|----|----|----|
| SCORE | 4 | 5 | 6 | 7 | 8 | 9 | 10 | 11 |
| FREQUENCY | 17 | 3 | 0 | 2 | 16 | 24 | 18 | 20 |

Circle the best estimate of the probability of scoring 9 [1 mark]

$$\frac{1}{24}$$

$$0.24$$

$$\frac{9}{24}$$

$$\frac{1}{8}$$

| |
|---|
| |
| 1 |

[Turn over]



5

Sam asks some friends how many internet-enabled devices are in their homes.

The results are

4 5 3 6 4 5 5 7 6 8 3 5

THREE YEARS EARLIER he had asked the same friends the same question.

The results were

| Number of devices three years earlier | Frequency |
|---------------------------------------|-----------|
| 1 | 1 |
| 2 | 4 |
| 3 | 6 |
| 4 | 0 |
| 5 | 1 |



By calculating a measure of average and a measure of spread, make TWO comparisons between the current data and the data for three years ago.

[5 marks]

Comparison 1

Comparison 2

| |
|---|
| 5 |
|---|

[Turn over]



6 When some people eat a bacon sandwich, they have

- brown sauce on it
- red sauce on it
- no sauce on it.

Bob and Lisa decide to test the hypothesis

“The majority of people who have a bacon sandwich have red sauce on it.”

6 (a) Bob’s work canteen sells bacon sandwiches.

One morning, 300 people use the canteen for breakfast.

Bob decides to sample 30 of the 300 people to see which sauce, if any, they have on their bacon sandwich, if they buy one.



6 (a) (ii)

Give TWO reasons why the sample Bob is obtaining is unlikely to be very useful in testing out the hypothesis. [2 marks]

Reason 1 _____

Reason 2 _____



BLANK PAGE

[Turn over]



- 6 (b) Lisa uses random sampling from those who eat bacon sandwiches at her local café to obtain the following data.

| Type of sauce | Brown | Red | No sauce |
|---------------|-------|-----|----------|
| Frequency | 24 | 21 | 5 |

- 6 (b) (i) There is only one type of average available for the data.


Name the average and write down its answer. [2 marks]

NAME OF AVERAGE _____

ANSWER _____



- 6 (b) (ii) On the blank grid below, draw a suitable fully labelled graph for these data.
[4 marks]



[Turn over]



6(c)

Using these data, write an appropriate conclusion for the hypothesis in PART (a). [1 mark]

| |
|----|
| |
| 11 |



BLANK PAGE

[Turn over]



- 7 The table shows the average cost of buying a house, a car and a basket of groceries for three different years in YORKSHIRE.

The average annual salary in Yorkshire for each year is also shown.

| Average costs for Yorkshire (£) | | | | |
|---------------------------------|---------|--------|-----------|---------------------------|
| Year | House | Car | Groceries | Average annual salary (£) |
| 1966 | 3 609 | 960 | 1.02 | 829 |
| 1991 | 53 445 | 9 600 | 8.47 | 12 088 |
| 2016 | 144 361 | 21 164 | 13.60 | 27 456 |

Source adapted from www.hillarys.co.uk

- 7 (a) What was the average annual salary in 1991? [1 mark]

Answer £ _____

- 7 (b) In 2016 groceries were just over 13 times more expensive than in 1966.

- 7 (b) (i) Show that in 2016 houses were, on average, 40 times more expensive than in 1966. [1 mark]



7 (b) (ii)

Compare how the cost of houses, cars and groceries in Yorkshire have gone up in comparison to each other between 1966 and 2016.

You MUST show your working. [3 marks]

[Turn over]



7 (c) Dilip sold a house in LONDON for £10 000 in 1966.

He says,

“In 2016 this house would have been worth £400 000”

7 (c) (i) Show how Dilip worked out this value. [1 mark]

7 (c) (ii) Give a reason why Dilip may be wrong. [1 mark]



7 (d)

Using 1966 as base, calculate the index number for the average cost of a car in 1991 in YORKSHIRE. [2 marks]

Answer _____

| |
|---|
| |
| 9 |

[Turn over]


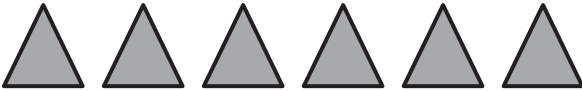





8

The strength of volcanic eruptions is measured using the Volcanic Explosivity Index (VEI) using a scale of 0–8

From 1900–2019 there have been 79 eruptions of 4 or above on the VEI.

The pictogram represents some of this information.

| | |
|-------------|--|
| 1900 – 1919 |  |
| 1920 – 1939 |  |
| 1940 – 1959 |  |
| 1960 – 1979 |  |
| 1980 – 1999 |  |
| 2000 – 2019 | |

KEY:  represents _____ eruptions



Between 1920 and 1939, there were 12 eruptions of strength 4 or above.

Complete the pictogram, including the key. [4 marks]

| |
|---|
| |
| 4 |

[Turn over]



9 Poppy wants to buy a season ticket at her local football club.

This will give her entry to ALL 20 home games over the season.

The table shows the cost of season tickets for the areas she is interested in.

| Area | Cost if bought in July | Cost if bought in August |
|-------------|------------------------|--------------------------|
| South Stand | £200 | £220 |
| West Stand | £175 | £195 |
| East Stand | £240 | £250 |



9 (a) **What is the cost of a West Stand season ticket bought on 15 August? [1 mark]**

Answer £ _____

9 (b) **There is a 10% chance that Poppy will miss a home game.**

9 (b) (i) **How many of the 20 home games will Poppy expect to miss next season? [2 marks]**

Answer _____

[Turn over]



9 (b) (ii) Poppy wants to sit in the EAST STAND.

The price of a ticket for Poppy for each home game would be £16

However, on 30 July she decides to buy a season ticket.

How much will she expect to save by buying the season ticket? [3 marks]

Answer £ _____



9 (c)

Poppy thinks the tickets at her club are more expensive than at other clubs in the same league.

She decides to investigate this.

Write down a possible hypothesis she could use. [1 mark]

9 (d)

Identify the population for her investigation. [1 mark]

[Turn over]



9 (e) Poppy decides to carry out a census.

**What does that mean in this context?
[1 mark]**

9 (f) Here are some options for how Poppy might obtain appropriate data.

- A – write a questionnaire and send it to all the other clubs**
- B – phone each of the other clubs and interview someone from the club**
- C – log on to the website of each club to try to find out the data**
- D – ask a season ticket holder from each club what they paid**

9 (f) (i) Circle the letter of the best option for obtaining appropriate data. [1 mark]

- A B C D**



9 (f) (ii)

For TWO of the options you did not choose, give a reason, different each time, why you did not choose that option. [2 marks]

Option _____

Reason _____

Option _____

Reason _____

9 (f) (iii)

For the option you DID choose, state ONE issue that might arise during the process of collecting the data. [1 mark]

[Turn over]



9 (f) (iv)

**Describe ONE strategy to overcome the issue you said might arise in PART (iii).
[1 mark]**

| |
|----|
| |
| 14 |



BLANK PAGE

[Turn over]



10

Here are some variables.

Some are relevant to people and their main job and some are not.

A – How much you are paid in a year

B – Your favourite TV series

C – How many days of holiday you are allowed each year

D – How tall you are

E – Distance from your home to work

F – How much you like your work colleagues

G – How happy you are at work

Adam is investigating whether people who are paid more are happier at work.

10 (a)

Write down a possible research question for Adam's investigation. [1 mark]



10 (b) Write down the letter of the explanatory variable. [1 mark]

Answer _____

10 (c) Write down the letter of the response variable. [1 mark]

Answer _____

10 (d) Write down the letters of TWO possible extraneous variables. [2 marks]

Answer _____

and _____

| |
|---|
| |
| 5 |


[Turn over]




11

The diagram shows two box plots, A and B, which are plotted on the same scale.

(A)



(B)



11 (a)

Circle whether each of these statements is true, false or you cannot tell. [3 marks]

The minimum value of A is smaller than the minimum value of B.

True

False

Cannot tell

The median of A is smaller than the median of B.

True

False

Cannot tell

The interquartile range of A is smaller than the interquartile range of B.

True

False

Cannot tell



The mean of A is smaller than the mean of B.

True

False

Cannot tell

11 (b)

A data value from box plot A is chosen at random.

Circle the probability that this value is between the minimum and maximum of the data represented by box plot B.

[1 mark]

0

$\frac{1}{2}$

0.9

1

| |
|---|
| |
| 4 |

[Turn over]




12

A YouGov survey was carried out with nearly 2000 British working adults who have an 8-hour working day.

They were asked which period of 8 hours they would prefer to work.

YouGov produced this summary graph showing the **PERCENTAGE** of each response, rounded to the nearest whole number.



Source: yougov.com



12 (a)

Show that about two-thirds of adults questioned wanted to work EARLIER than the traditional 9 am to 5 pm working hours. [2 marks]

12 (b)

Amber says,

“NONE of the adults questioned wanted to start work at 11.30 am.”

Is Amber correct?

Tick (✓) a box.

Yes No Cannot tell

Give a reason for your answer. [1 mark]

[Turn over]



12(c)

Give ONE reason why these results will NOT apply to all British working adults.
[1 mark]

| |
|---|
| |
| 4 |



BLANK PAGE

[Turn over]



- 13** **200 students, 200 parents with young children and 200 retired people were asked what was the first thing they did on their mobile phones that day.**

The results are shown in the table.

| | Social media | Gaming | News | Other |
|-----------------|---------------------|---------------|-------------|--------------|
| Students | 124 | 52 | 13 | 11 |
| Parents | 120 | 8 | 37 | 35 |
| Retired | 88 | 11 | 67 | 34 |

- 13 (a)** **One of the people is chosen at random.**

- 13 (a) (i)** **Work out the probability that this person goes on social media first that day.**
[2 marks]

Answer _____



13 (a) (ii)

Work out the probability that this person does NOT go on gaming first that day. [2 marks]

Answer _____

13 (b)

One of the people who went on gaming first that day is chosen at random.

What is the probability that this person is retired? [2 marks]

Answer _____

[Turn over]



13(c)

Work out the probability that TWO of the 200 retired people, chosen at random, both went on news first that day.

Give your answer to three decimal places.
[3 marks]

Answer _____

13(d)

Joe looks at the data in the table and makes the two statements below.

Is each statement correct?

Give a reason for each decision.
[2 marks]

STATEMENT 1 Most of these 600 people went on social media first THAT day.

Tick (✓) a box.

Yes No Cannot tell



Reason

STATEMENT 2 Most of these 200 retired people go on social media first **EVERY** day.

Tick (✓) a box.

Yes No Cannot tell

Reason

[Turn over]

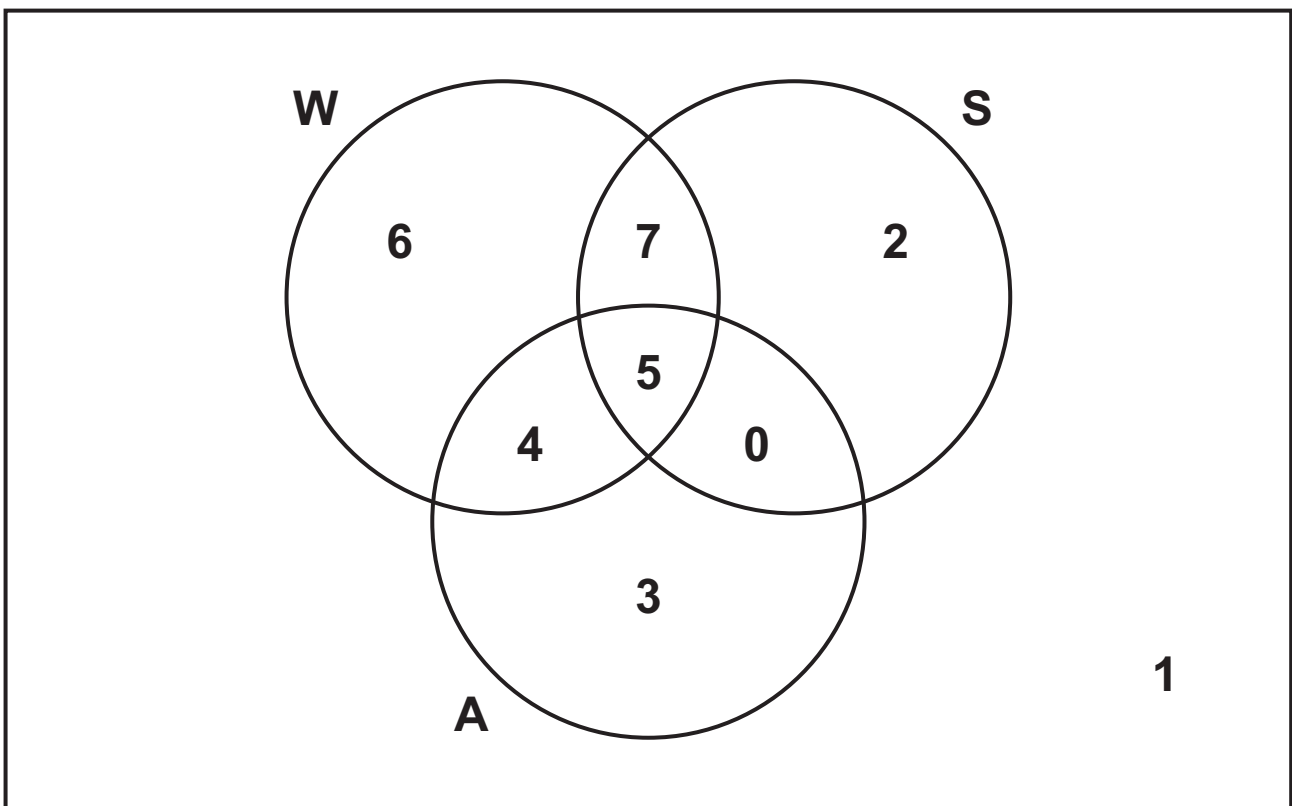


14

The Venn diagram shows information about local businesses in Kiveton.

It shows which, if any, of the following features each business has.

- website (W)
- social media presence (S)
- adverts in the local free newspaper (A)



14 (a)

How many businesses are represented in the Venn diagram? [1 mark]

Answer _____



14 (b) How many businesses have EXACTLY TWO of the three features?
[1 mark]

Answer _____

14 (c) One business is chosen at random.
What is the probability it has a website?
[2 marks]

Answer _____

14 (d) A business with a social media presence is chosen at random.
Work out the probability that this business does NOT advertise in the local free newspaper. [2 marks]

Answer _____

| |
|---|
| |
| 6 |

[Turn over]



15

A deadly disease currently has no treatment.

A researcher develops a drug which she believes will treat the disease.

She suggests a statistical experiment to test her drug.

Infect six people chosen at random with the disease.

Give the drug to all six people.

Record whether each person recovers or not.

15(a)

Write down TWO problems with the researcher's experiment. [2 marks]

Problem 1 _____



Problem 2 _____

15(b)

The researcher carries out a more suitable experiment.

She writes an article for a magazine to highlight her results.

She gives the name of each patient in the experiment and records how they responded to the drug.

The magazine editor asks the researcher to rewrite her article.

Explain why. [1 mark]

| |
|---|
| |
| 3 |

END OF QUESTIONS



BLANK PAGE

| For Examiner's Use | |
|--------------------|------|
| Question | Mark |
| 1 | |
| 2 | |
| 3 | |
| 4 | |
| 5 | |
| 6 | |
| 7 | |
| 8 | |
| 9 | |
| 10 | |
| 11 | |
| 12 | |
| 13 | |
| 14 | |
| 15 | |
| TOTAL | |

Copyright information

For confidentiality purposes, all acknowledgements of third-party copyright material are published in a separate booklet. This booklet is published after each live examination series and is available for free download from www.aqa.org.uk.

Permission to reproduce all copyright material has been applied for. In some cases, efforts to contact copyright-holders may have been unsuccessful and AQA will be happy to rectify any omissions of acknowledgements. If you have any queries please contact the Copyright Team.

Copyright © 2020 AQA and its licensors. All rights reserved.

G/KL/Jun20/8382/1F/E2

