



**Surname** \_\_\_\_\_

**Other Names** \_\_\_\_\_

**Centre Number** \_\_\_\_\_

**Candidate Number** \_\_\_\_\_

**Candidate Signature** \_\_\_\_\_

**I declare this is my own work.**

**A-level**

**FURTHER MATHEMATICS**

**Paper 3 Discrete**

**7367/3D**

**Time allowed: 2 hours**

**At the top of the page, write your surname and other names, your centre number, your candidate number and add your signature.**

**[Turn over]**



- You must have the AQA Formulae and statistical tables booklet for A-level Mathematics and A-level Further Mathematics.
- You should have a scientific calculator that meets the requirements of the specification.
- You must ensure you have the other optional Question Paper/Answer Book for which you are entered (EITHER Mechanics OR Statistics). You will have 2 hours to complete BOTH papers.

## INSTRUCTIONS

- Use black ink or black ball-point pen. Pencil should only be used for drawing.
- Answer ALL questions.
- You must answer each question in the space provided for that question. If you require extra space for your answer(s), use the lined pages at the end of this book. Write the question number against your answer(s).



- **Do NOT write on blank pages.**
- **Show all necessary working; otherwise marks for method may be lost.**
- **Do all rough work in this book. Cross through any work that you do not want to be marked.**

## **INFORMATION**

- **The marks for questions are shown in brackets.**
- **The maximum mark for this paper is 50.**

## **ADVICE**

- **Unless stated otherwise, you may quote formulae, without proof, from the booklet.**
- **You do not necessarily need to use all the space provided.**

**DO NOT TURN OVER UNTIL TOLD TO DO SO**



**Answer ALL questions in the spaces provided.**

- 1**      The graph  $G$  has a subgraph isomorphic to  $K_5$ , the complete graph with 5 vertices.

**Which of the following statements about  $G$  must be true?**

**Tick (✓) ONE box. [1 mark]**

☐

**$G$  is not connected**

☐

**$G$  is not Hamiltonian**

☐

**$G$  is not planar**

☐

**$G$  is not simple**

- 2**      **Graph  $A$  is a connected planar graph with 12 vertices, 18 edges and  $n$  faces.**

**Find the value of  $n$**

**Circle your answer.    [1 mark]**

**4**

**8**

**28**

**32**

**[Turn over]**



**3 A company undertakes a project which consists of 12 activities,  $A, B, C, \dots, L$**

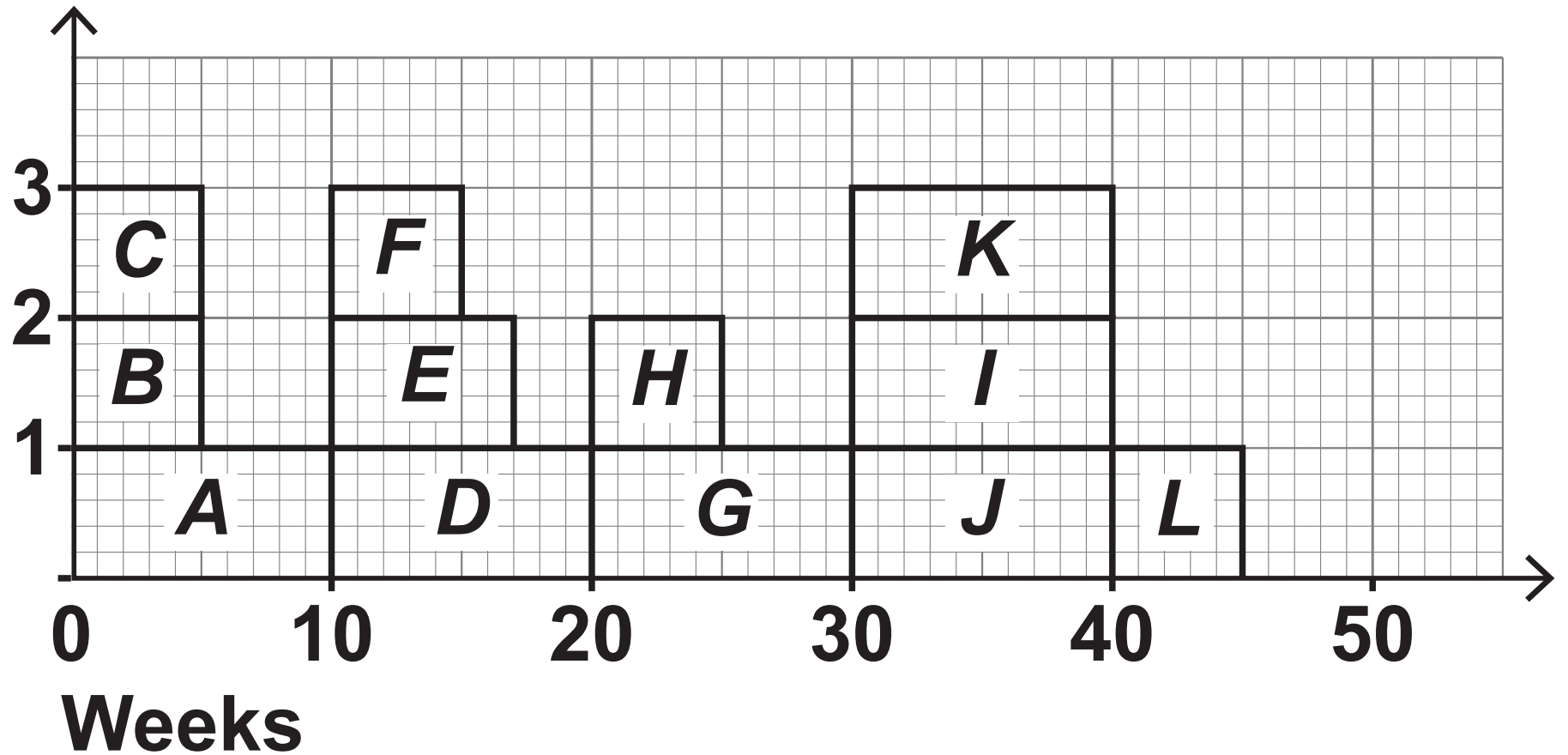
**Each activity requires one worker.**

**The resource histogram opposite shows the duration of each activity.**

**Each activity begins at its earliest start time.**

**The path  $ADGJL$  is critical.**

**Number of  
workers**




**The company only has two workers available to work on the project.**

**Which of the following, on pages 8 and 9, could be a correctly levelled histogram?**


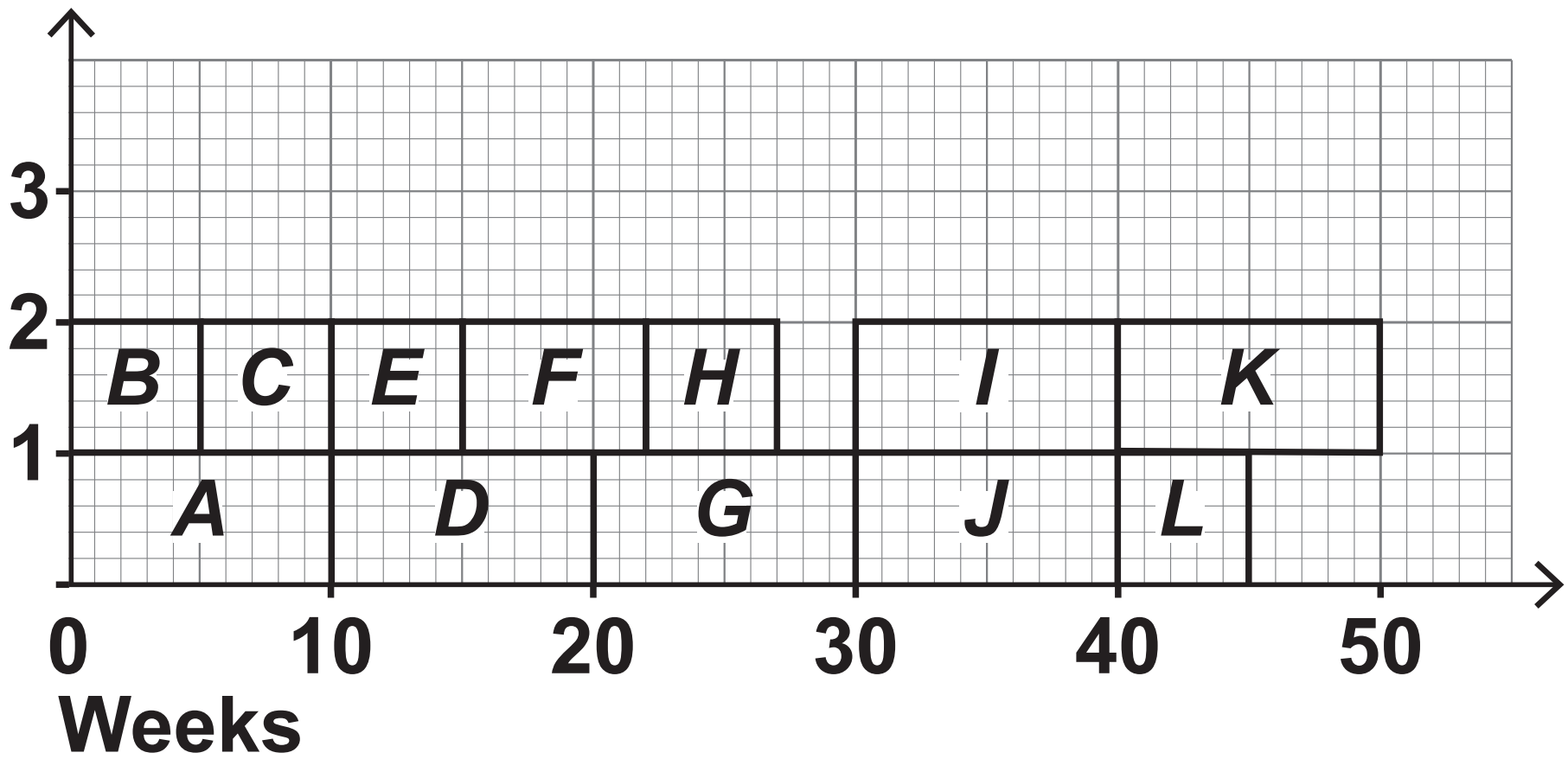
**Tick (✓) ONE box. [1 mark]**

**[Turn over]**

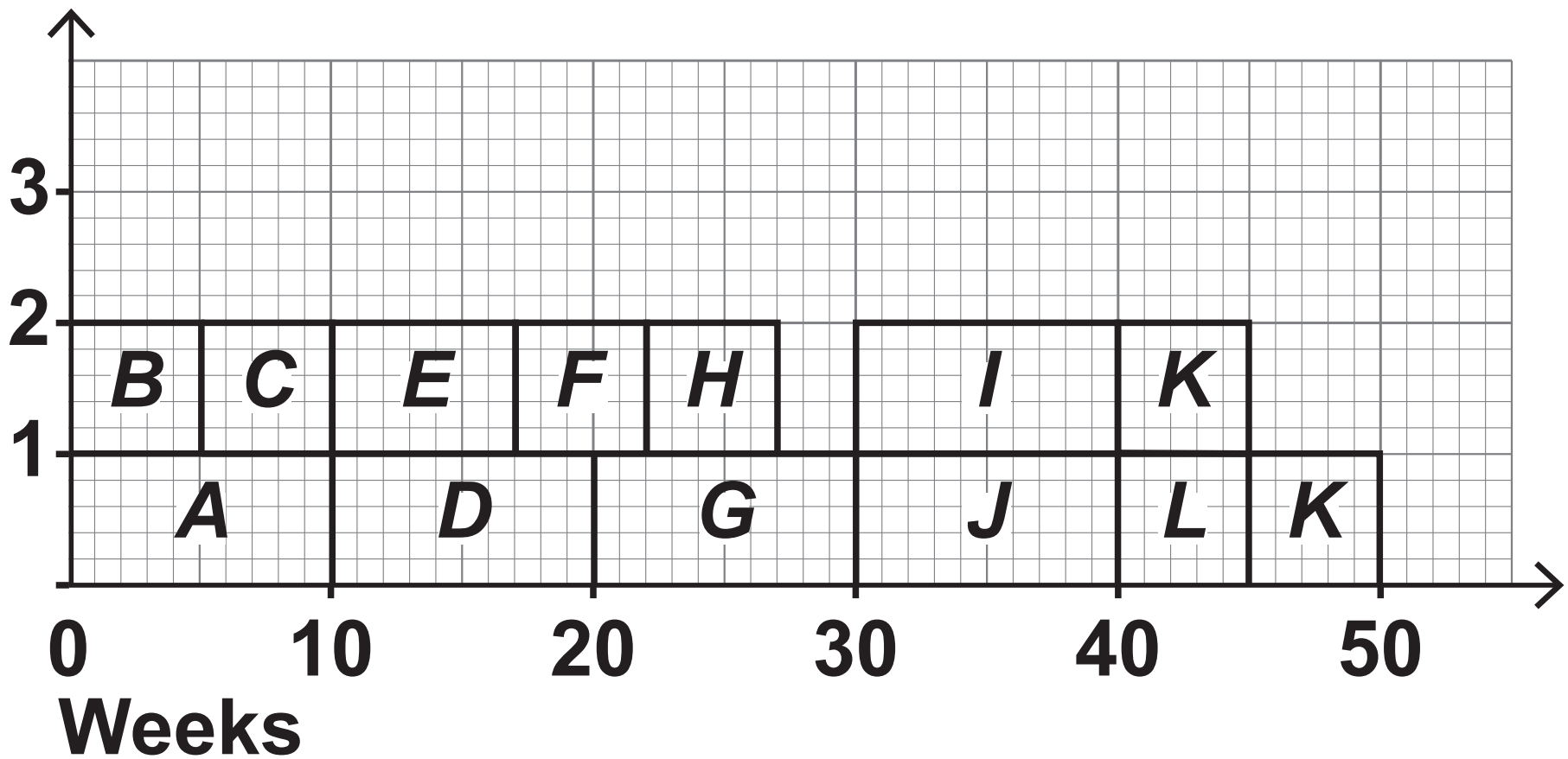





Number of  
workers




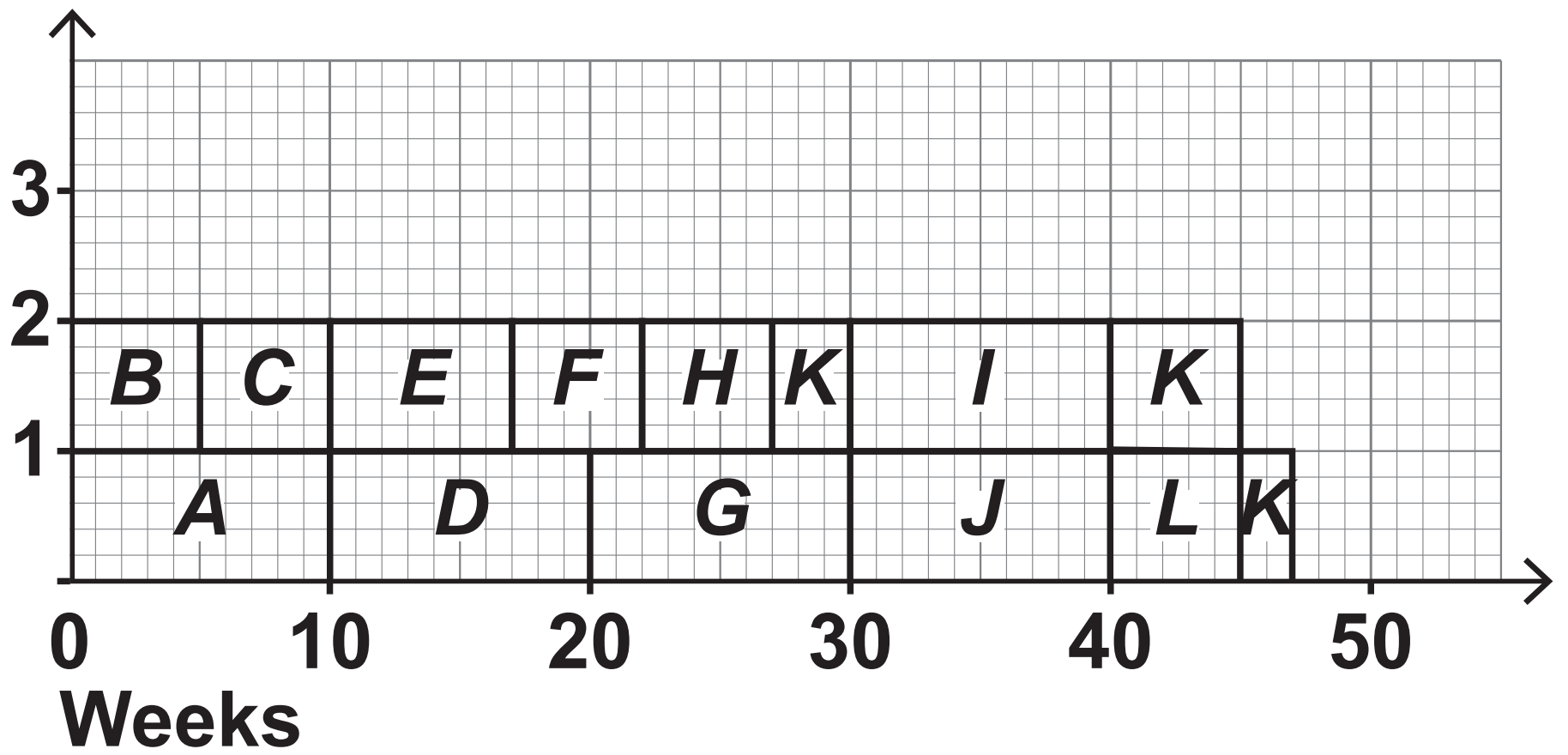
Number of  
workers



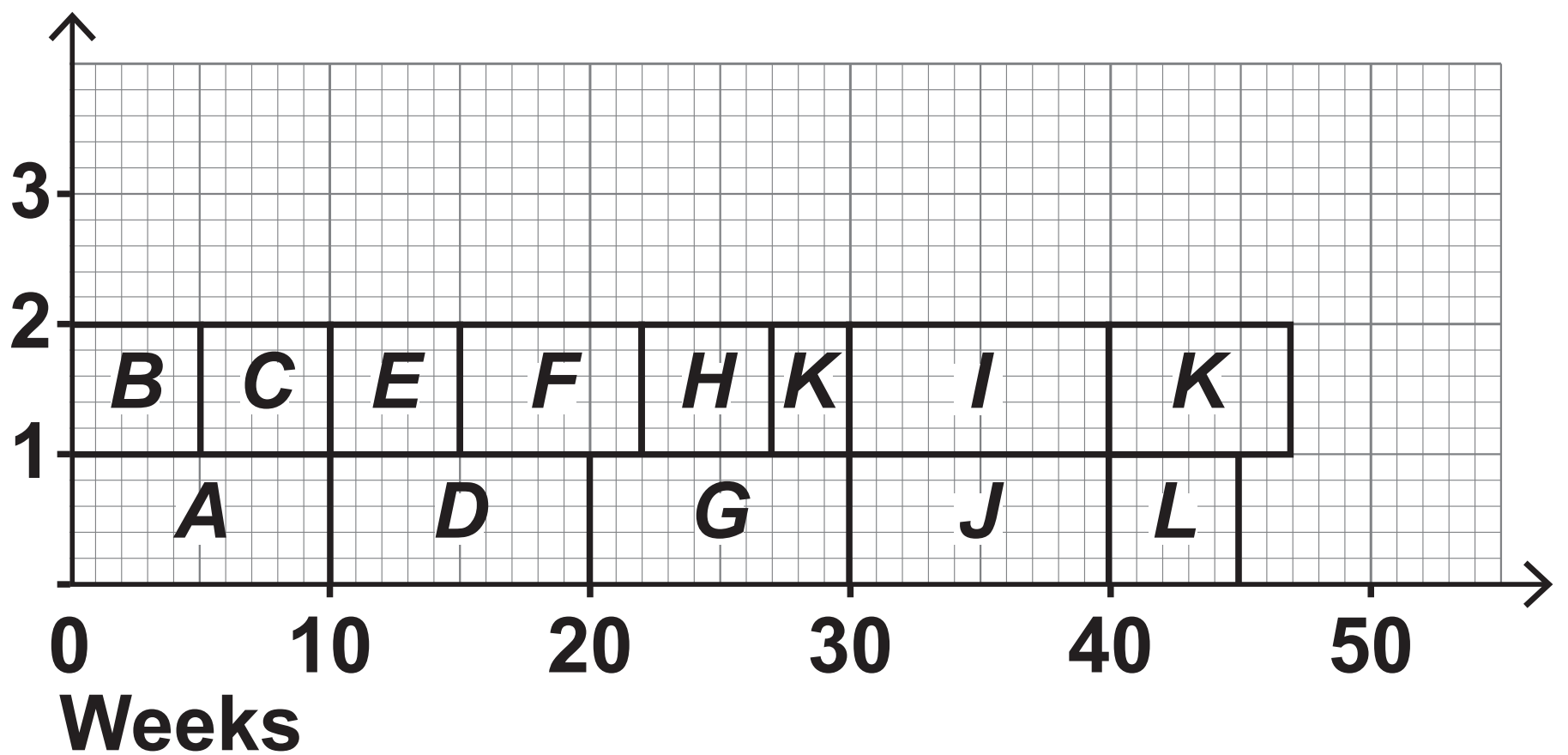




Number of  
workers



Number of  
workers



[Turn over]

4 Ben and Jadzia play a zero-sum game.

The game is represented by the following pay-off matrix for Ben.

		Jadzia		
Ben	STRATEGY	X	Y	Z
	A	−3	2	3
	B	6	0	−4
	C	7	−1	1
	D	6	−2	1

- 4 (a) State, with a reason, which strategy Ben should never play.  
[1 mark]**

---

---

---

---

---

**[Turn over]**



**4(b) Determine whether or not the game has a stable solution.**

**Fully justify your answer.  
[3 marks]**

---

---

---

---

---

---

---

---

---

---

---

---

---

---

**[Turn over]**



**4 (c) Ben knows that Jadzia will always play her play-safe strategy.**

**Explain how Ben can maximise his expected pay-off. [2 marks]**

---

---

---

---

---

---

---

---

---

**BLANK PAGE**

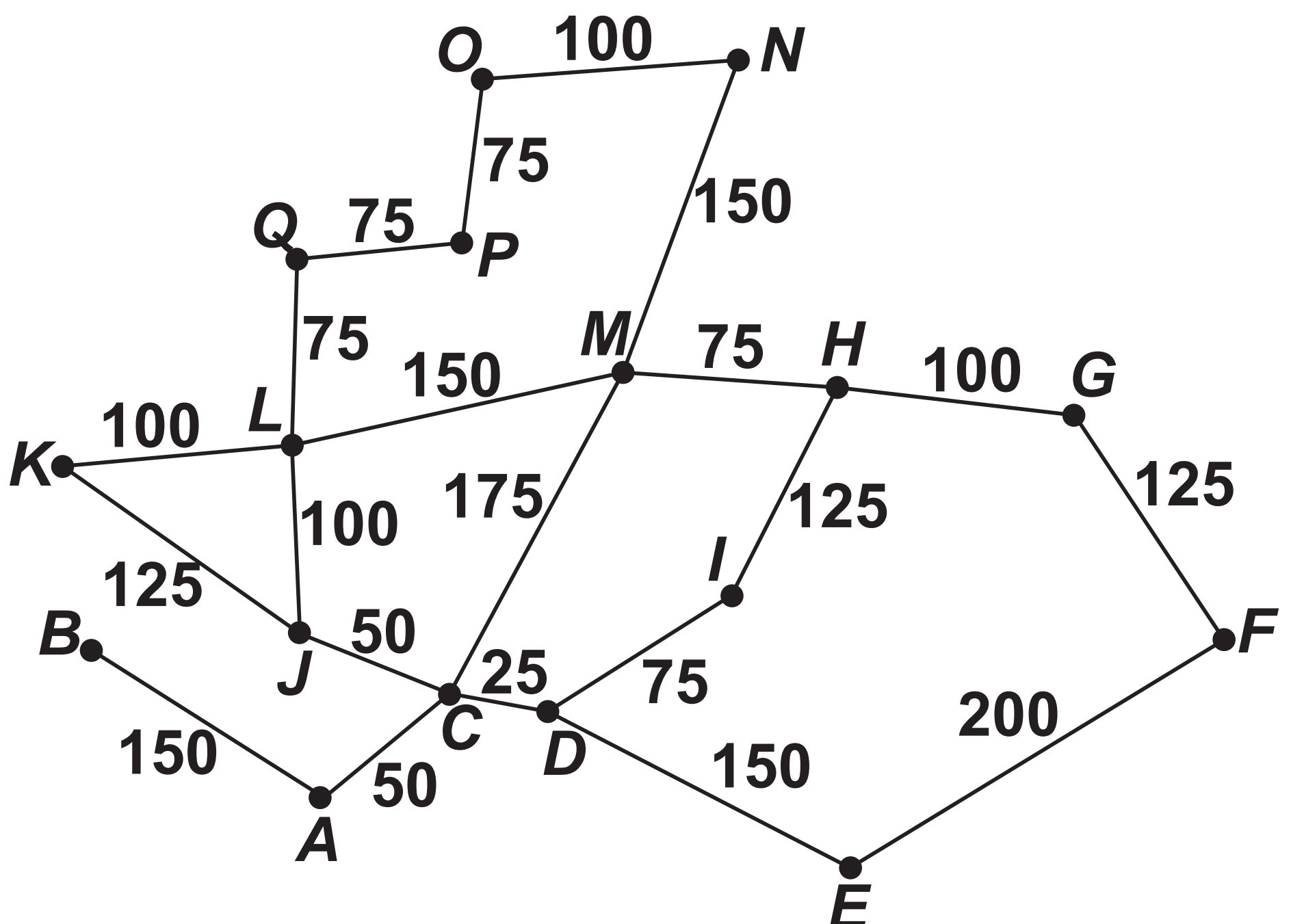
**[Turn over]**



- 5 A council wants to convert all of the street lighting in a village to use LED lighting.

The network below shows each street in the village. Each node represents a junction and the weight of each arc represents the length, in metres, of the street.

The street lights are only positioned on one side of each street in the village.





**The total length of all of the streets in the village is 2250 metres.**

**In order to determine the total number of street lights in the village, a council worker is required to walk along every street in the village at least once, starting and finishing at the same junction.**

**The shortest possible distance the council worker can walk in order to determine the total number of street lights in the village is  $x$  metres.**

**[Turn over]**



**5 (a)**

## Find the value of $x$

**Fully justify your answer.  
[4 marks]**

[illegible]

---

---

---

---

---

**[Turn over]**



**5(b) A new council regulation requires that the mean distance along a street between adjacent LED street lights in a village be less than 25 metres.**

**The council worker counted 91 different street lights on their journey around the village.**

**Determine whether or not the village will meet the new council regulation. [2 marks]**

---

---

---

---

---

---

---

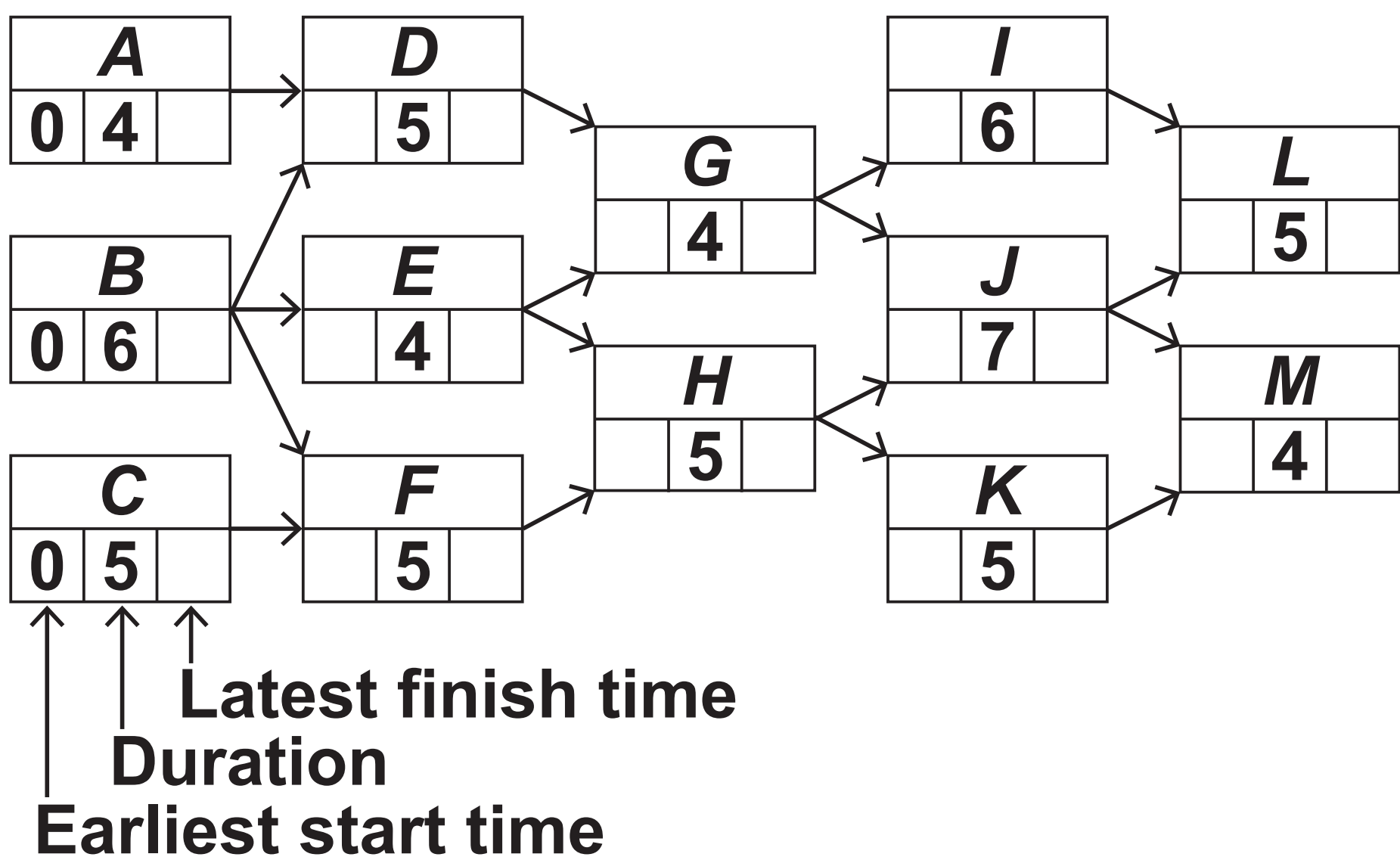
---

---

**[Turn over]**



- 6 Bill Durrh Ltd undertake a construction project.**
- The activity network for the project is shown below. The duration of each activity is given in weeks.**



- 6 (a) (i) Find the earliest start time and the latest finish time for each activity and show these values on the activity network above. [3 marks]**

**6(a) (ii) Identify all of the critical activities.  
[1 mark]**

---

---

---

---

---

**[Turn over]**



**6(b) The manager of Bill Durrh Ltd recruits some additional temporary workers in order to reduce the duration of one activity by 2 weeks.**

**The manager wants to reduce the minimum completion time of the project by the largest amount.**

**State, with a reason, which activity the manager should choose. [2 marks]**

---

---

---

---

---

---

---



---

---

**[Turn over]**



**7** The group  $G$  has binary operation  $*$  and order  $p$ , where  $p$  is a prime number.

**7 (a)** Determine the number of distinct subgroups of  $G$

**Fully justify your answer.  
[2 marks]**

---

---

---

---

---

---

---

---

---

---

**7(b)  $G$  contains an element  $g$  which has period  $p$**

**7(b) (i) State the general name given to elements such as  $g$  [1 mark]**

---

---

---

**7(b) (ii) State the name of a group that is isomorphic to  $G$  [1 mark]**

---

---

---

**[Turn over]**



**7 (c)**       **$G$  contains an element  $g^r$ ,  
where  $r < p$**

**Find, in terms of  $g$ ,  $r$  and  $p$ , the  
inverse of  $g^r$     [2 marks]**

---

---

---

---

---

---

---

---

---

- 7(d) In the case when  $p = 5$  and the binary operation  $*$  represents addition modulo 5,  $G$  contains the elements 0, 1, 2, 3 and 4
- 7(d) (i) Explain why  $G$  is closed.  
[1 mark]

---

---

---

---

---

[Turn over]

7(d) (ii) Complete the Cayley table  
for  $(G, *)$  [1 mark]

*					

**BLANK PAGE**

**[Turn over]**



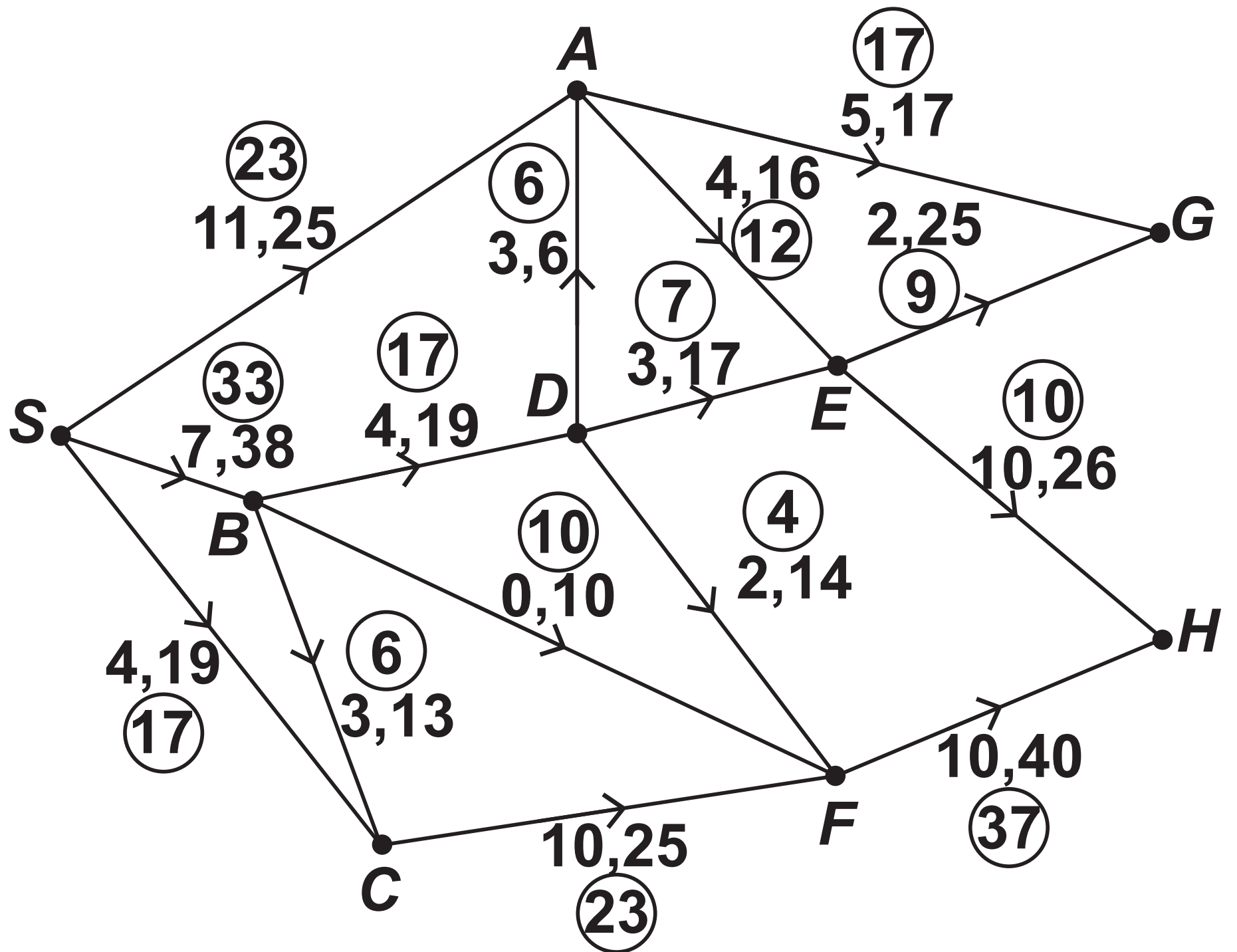
**8** **FIGURE 1** opposite shows a network of gas pipes.

**The numbers on each arc represent the lower and upper capacity for each pipe in  $\text{m}^3 \text{s}^{-1}$**

**The numbers in the circles represent an initial feasible flow of  $73 \text{ m}^3 \text{s}^{-1}$  through the network.**



FIGURE 1



- 8 (a) On FIGURE 1 above, add a supersink  $T$  to the network.  
[2 marks]

[Turn over]



8(b)      Using flow augmentation, find the maximum flow through the network.

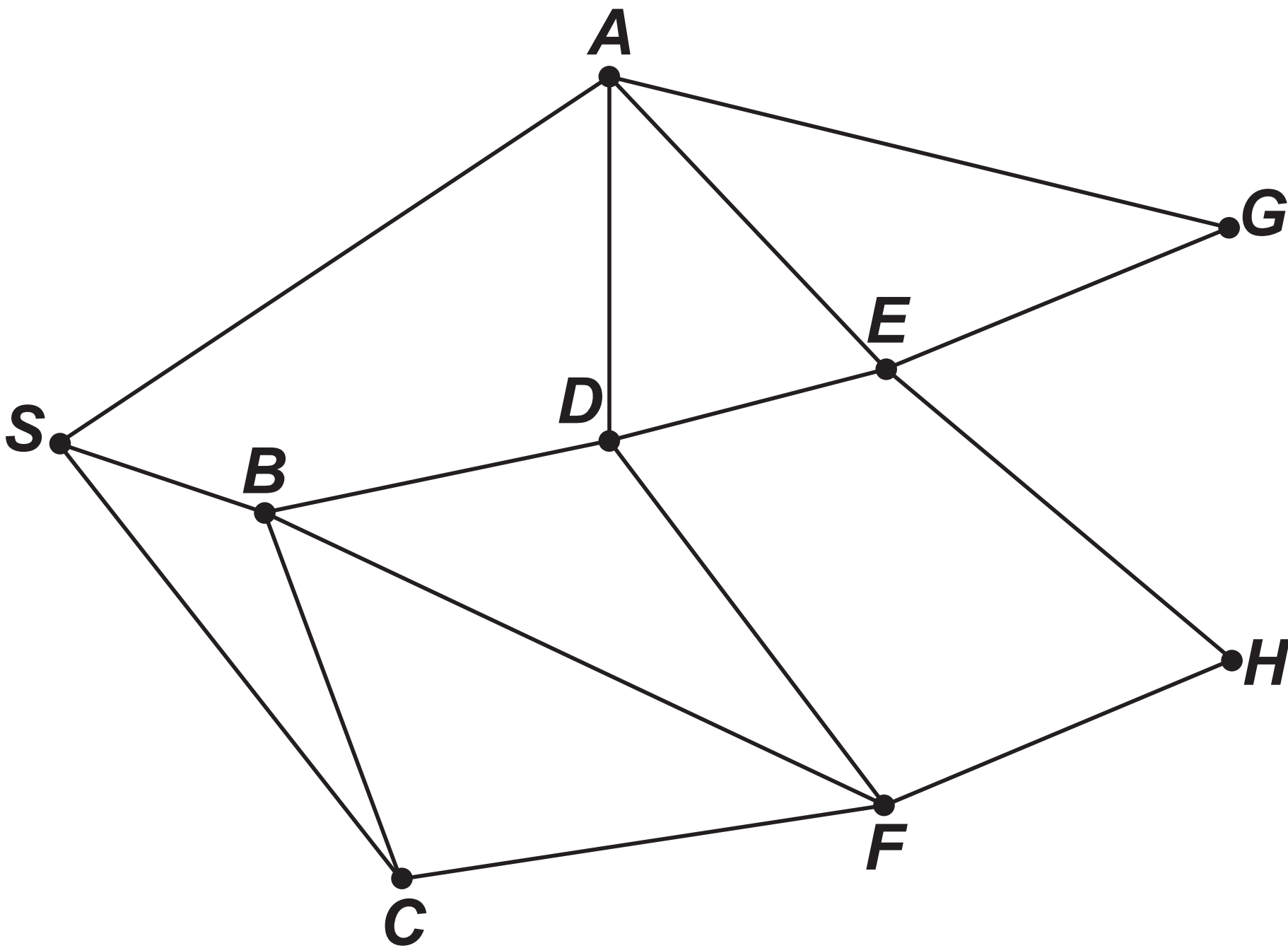
You must indicate any flow augmenting paths clearly in the table below.

You may use FIGURE 2, on the opposite page, in your solution.  
[4 marks]

AUGMENTING PATH	FLOW

Maximum flow \_\_\_\_\_

FIGURE 2



[Turn over]



**8 (c)      Prove that the flow found in  
part (b) is the maximum flow  
through the network.    [2 marks]**

---

---

---

---

---

---

- 8(d) A trainee engineer claims that increasing the upper capacity of the pipe *AG* will increase the maximum flow through the network, as the flow through this pipe cannot currently be increased.**

**Comment on the validity of the trainee's claim. [2 marks]**

---

---

---

---

---

---

**[Turn over]**



**9**      The binary operation  $\oplus$  acts on the positive integers  $x$  and  $y$  such that

$$x \oplus y = x + y + 8$$

$$(\text{mod } k^2 - 16k + 74)$$

where  $k$  is a positive integer.

**9 (a) (i) Show that  $\oplus$  is commutative.  
[1 mark]**

---

---

---

---

---

---

---

---

---

**[Turn over]**



**9(a) (ii) Determine whether or not  $\oplus$  is associative.**

**Fully justify your answer.  
[2 marks]**

---

---

---

---

---

---

---

---

---

---

---

---



---

---

---

[Turn over]



**9 (b)**

**Find the values of  $k$  for which 3 is an identity element for the set of positive integers under  $\oplus$**   
**[3 marks]**

This image shows a blank sheet of white paper with horizontal ruling lines. The lines are evenly spaced and run across the width of the page. There are no margins, text, or other markings on the paper.

---

---

---

---

---

---

---

---

---

---

---

---

[Turn over]



**10 Kira and Julian play a zero-sum game that does not have a stable solution.**

**Kira has three strategies to choose from:  $K_1$ ,  $K_2$  and  $K_3$**

**To determine her optimal mixed strategy, Kira begins by defining the following variables:**

**$v$  = value of the game for Kira**

**$p_1$  = probability of Kira playing strategy  $K_1$**

**$p_2$  = probability of Kira playing strategy  $K_2$**

**$p_3$  = probability of Kira playing strategy  $K_3$**

Kira then formulates the following linear programming problem.

Maximise  $v$

subject to  $7p_1 + p_2 + 8p_3 \geq v$

$$3p_1 + 7p_2 + 2p_3 \geq v$$

$$9p_1 + 2p_2 + 4p_3 \geq v$$

and

$$p_1 + p_2 + p_3 \leq 1$$

$$p_1, p_2, p_3 \geq 0$$

[Turn over]



**10 (a) (i) Explain why the condition  $p_1 + p_2 + p_3 \leq 1$  is necessary in Kira's linear programming problem. [1 mark]**

---

---

---

---

---

**10 (a) (ii) Explain why the condition  $p_1, p_2, p_3 \geq 0$  is necessary in Kira's linear programming problem. [1 mark]**

---

---

---

---

---

**[Turn over]**



10(b)      Julian has three strategies to choose from:  $J_1$ ,  $J_2$  and  $J_3$

Complete the following pay-off matrix which represents the game for Kira.    [3 marks]

Julian				
Kira	STRATEGY	$J_1$	$J_2$	$J_3$
	$K_1$	7		
	$K_2$			
	$K_3$			

END   OF   QUESTIONS



**BLANK PAGE**



**Additional page, if required. Write the question numbers in the left-hand margin.**

[illegible]

**Additional page, if required. Write the question numbers in the left-hand margin.**

[illegible]

**Additional page, if required. Write the question numbers in the left-hand margin.**

[illegible]

**Additional page, if required. Write the question numbers in the left-hand margin.**

[illegible]

BLANK PAGE

For Examiner's Use	
Question	Mark
1	
2	
3	
4	
5	
6	
7	
8	
9	
10	
TOTAL	

Copyright information

For confidentiality purposes, all acknowledgements of third-party copyright material are published in a separate booklet. This booklet is published after each live examination series and is available for free download from [www.aqa.org.uk](http://www.aqa.org.uk).

Permission to reproduce all copyright material has been applied for. In some cases, efforts to contact copyright-holders may have been unsuccessful and AQA will be happy to rectify any omissions of acknowledgements. If you have any queries please contact the Copyright Team.

Copyright © 2022 AQA and its licensors. All rights reserved.

GB/AEF/Jun22/7367/3D/E4

