



**Surname** \_\_\_\_\_

**Other Names** \_\_\_\_\_

**Centre Number** \_\_\_\_\_

**Candidate Number** \_\_\_\_\_

**Candidate Signature** \_\_\_\_\_

**I declare this is my own work.**

**GCSE**

**CITIZENSHIP STUDIES**

**Paper 1**

**8100/1**

**Time allowed: 1 hour 45 minutes**

**For this paper you will need no other materials.**

**At the top of the page, write your surname and other names, your centre number, your candidate number and add your signature.**

**[Turn over]**



J U N 2 2 8 1 0 0 1 0 1

**BLANK PAGE**



## INSTRUCTIONS

- Use black ink or black ball-point pen.
- Answer ALL questions.
- You must answer the questions in the spaces provided. Do NOT write on blank pages.
- If you need extra space for your answer(s), use the lined pages at the end of this book. Write the question number against your answer(s).
- Do all rough work in this book. Cross through any work you do not want to be marked.

## INFORMATION

- The marks for questions are shown in brackets.
- The maximum mark for this paper is 80.

**DO NOT TURN OVER UNTIL TOLD TO DO SO**




**SECTION A****ACTIVE CITIZENSHIP**

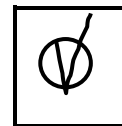
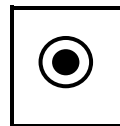
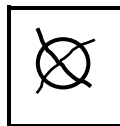
Answer **ALL** questions in this section.

For each question completely fill in the circle alongside the appropriate answer.

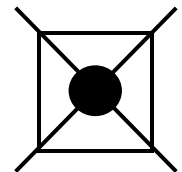
**CORRECT METHOD**



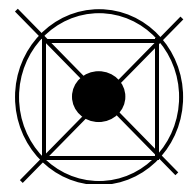
**WRONG METHODS**



If you want to change your answer you must cross out your original answer as shown.



If you wish to return to an answer previously crossed out, ring the answer you now wish to select as shown.



01

**INVESTIGATING THE ACTION OF OTHERS**

01.1

**Which of the following does a trade union represent?**

**Shade in the ONE correct answer. [1 mark]**

**A Customers**

**B Employees**

**C Employers**

**D Volunteers**

01.2

**What is an 'e-petition'? [1 mark]**

---

---

---

**[Turn over]**



01.3

Identify TWO differences between special constables and regular police officers. [2 marks]

1

---

---

---

2

---

---

---

01.4

Using an example, explain what a tribunal is. [2 marks]

---

---

---

---

---

---



0	1	.	5
---	---	---	---

**Explain ONE reason why a person would stand for election. [2 marks]**

---

---

---

---

---

---

---

**[Turn over]**



**01.6****SOURCE A****THE REAL LIVING WAGE**

**Founded by Citizens UK in 2001, the Living Wage is calculated according to the cost of living in the UK:**

**The Living Wage is £9.50 per hour.**

**The London Living Wage is £10.85 per hour.**

**This is different to the government's National Living Wage (minimum wage) which is £8.72 per hour.**

**Citizens of Greater Manchester, together with Manchester food banks, have published an open letter campaigning for Manchester United and Manchester City football clubs to help tackle poverty in their city by becoming Living Wage Employers.**

**Dear Ferran Soriano and Ed Woodward,**

**We're writing to ask you to do the right thing on behalf of the lowest paid staff at your clubs.**

**Both clubs are loved by so many in the city, and many have been inspired by the vital work your clubs have done... But the reality is that many of your own staff, including caterers and cleaners, are themselves struggling to put food on the table because they don't earn the real Living Wage.**





**Everton FC and Liverpool FC were the first two Premier League clubs to accredit and have since been followed by West Ham, Chelsea and Crystal Palace.**

**Today we urge you to join them, do the right thing by your staff and supporters, and become Living Wage Employers without delay.**

**Yours Sincerely,**

**[signed by Greater Manchester citizens, food banks, various places of worship and community groups]**

**Examine the actions UK citizens could take to persuade their local football club to become a Living Wage Employer.**

**In your response you should refer to SOURCE A and examples from your own knowledge. [8 marks]**

---

---

---

---

---

---

---

---

**[Turn over]**







---

---

---

---

---

---

---

---

---

---

---

---

---

---

---

---

---

---

---

---

---

---

---

---

---

<hr/>
16



0 2

**YOUR ACTIVE CITIZENSHIP INVESTIGATION**

**State what your investigation is about.**

---

---

---

0 2 . 1

**Explain ONE reason why you would consider changing the topic of your investigation. [2 marks]**

---

---

---

---

---

---

---

**[Turn over]**



0 2 . 2

**Discuss which part of the investigation process you found most difficult and why. [4 marks]**

---

---

---

---

---

---

---

---

---

---

---

---

---

---

---

---

---

---

---

---

---

---

---

---

---

---

---

---

---

---

---

---

---

**[Turn over]**



0 2 . 3

**Evaluate the usefulness of the secondary research you used for your investigation. [6 marks]**

---

---

---

---

---

---

---

---

---

---

---

---

---

---

---

---

---

---

---

---

---

---

---







02.4

Analyse the ways in which your citizenship action was useful to you and others.

Your answer should refer to:

- how your action enabled you to use and develop your citizenship skills
- ways in which your action was useful to others
- whether there were any limitations which affected its usefulness.

[12 marks]

---

---

---

---

---

---

---

---

---

---

---

---

---

---

---

---

---

---

---

---

---

---

---



---

---

---

---

---

---

---

---

---

---

---

---

---

---

---

---

---

---

---

---

---

---

---

---

---

---

---

---

---

---






**SECTION B****POLITICS AND PARTICIPATION**

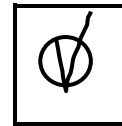

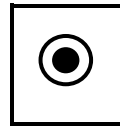
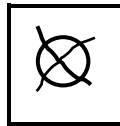
Answer ALL questions.

For each question completely fill in the circle alongside the appropriate answer.

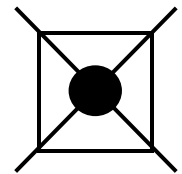
**CORRECT METHOD**



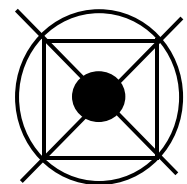
**WRONG METHODS**



If you want to change your answer you must cross out your original answer as shown.



If you wish to return to an answer previously crossed out, ring the answer you now wish to select as shown.



**03.1**

**Which of these is a form of direct democracy?**

**Shade in the ONE correct answer. [1 mark]**

**A Appointments**

**B Elections**

**C Opinion polls**

**D Referendums**

**03.2**

**Identify TWO values which underpin democracy.  
[2 marks]**

**1**

---

**2**

---

**[Turn over]**



03.3

**SOURCE B**

**THE MONARCHY**

The country of Oman is different from the UK because it has an absolute monarchy.

This means:

- Oman is ruled by one person, the Sultan, who holds absolute power
- the Sultan is both the head of state and the head of government
- the Sultan can make and pass laws.

Referring to SOURCE B, describe two ways in which the UK's monarchy is different to Oman's monarchy.

[4 marks]

1

---

---

---

---

---

---

---

---





---

---

---

---

---

2

---

---

---

---

---

---

---

---

---

---

---

---

---

---

---

---

---

---

---

---

---

---

---

---

---

[Turn over]

7



**04.1**

**Which of the following is elected?**

**Shade in the ONE correct answer. [1 mark]**

**A Chief Constables**

**B High Court Judges**

**C Justices of the Peace**

**D Police and Crime Commissioners**



04.2

Identify **ONE** advantage and **ONE** disadvantage of the single transferable vote system. [2 marks]

**Advantage** \_\_\_\_\_

\_\_\_\_\_

\_\_\_\_\_

**Disadvantage** \_\_\_\_\_

\_\_\_\_\_

\_\_\_\_\_

[Turn over]



04.3

**SOURCE C**

**YOUNG VOTER TURNOUT**

**Paul is 21 years old and did not vote at the last General Election.**

**His reasons are:**

- **“politicians do not listen to young people”**
- **“I can’t trust them or relate to them”**
- **“political parties don’t really do what they say anyway”**
- **“I can’t discuss politics with my friends because I don’t know enough about it”.**

**Referring to SOURCE C, discuss ways that could improve voter turnout amongst young people.  
[4 marks]**

---

---

---

---

---

---

---

---

---

---

---

---

---

---

---

---

---

---

---

---

---

---

---

---

---

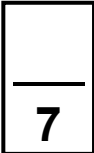
---

---

---

---

[Turn over]



**05.1**

**Identify TWO sources of local authority income.**

**Shade in the TWO correct answers. [2 marks]**

**A Central Government Grants**

**B Council Tax**

**C Excise Duty**

**D National Insurance contributions**

**E Stamp Duty**

**F Value Added Tax**



**05.2**

**Identify TWO proportional voting systems.**

**Shade in the TWO correct answers. [2 marks]**

**A Alternative Vote**

**B Ballot**

**C First Past the Post**

**D Party List**

**E Referendum**

**F Single Transferable Vote**

**[Turn over]**



05.3

**SOURCE D****NATIONAL HEALTH SERVICE (NHS)**

UK citizens can use most NHS services without having to pay for them when they need them. The NHS is funded mainly from general taxation and National Insurance contributions with a smaller amount from patient charges, eg from dental treatment and prescriptions. It is one of the main areas of government spending. However, there is a lot of financial pressure on the NHS. Some of this pressure is due to:

- increasing costs for treatments
- an ageing population
- increasing health problems
- staffing problems.

Referring to SOURCE D, discuss how the UK government could ensure the NHS remains free for citizens. [4 marks]

---

---

---

---

---

---





---

---

---

---

---

---

---

---

---

---

---

---

---

---

---

---

---

---

---

---

---

---

---

---

---

---

---

---

---

---

**[Turn over]**

<hr/>
<b>8</b>



06.1

**Define the term 'legislature'. [1 mark]**

---

---

---

06.2

**Examine the ways in which parliament holds the government to account in the UK. [8 marks]**

---

---

---

---

---

---

---

---

---

---

---

---

---

---

---

---

---

---

---

---

---

---

---

---

---

---

---

---

---

---

---

---

---

---

---

---

---

---

---

**[Turn over]**



---

---

---

---

---

---

---

---

---

---

9



07.1

Which ONE of the following is a devolved body?

Shade in the ONE correct answer. [1 mark]

A Norfolk County Council

B Scottish Parliament

C The Cabinet

D UK Supreme Court

[Turn over]



07.2

**‘The changing relations between the nations of the UK are leading to the loss of British identity.’**

**Considering a range of views, to what extent do you agree with this statement?**

**In your answer you should consider:**

- **the national identity of citizens living in different parts of the UK**
- **how political relations are changing between nations of the UK.**

**[8 marks]**

---

---

---

---

---

---

---

---

---

---

---



---

---

---

---

---

---

---

---

---

---

---

---

---

---

---

---

---

---

---

---

---

---

---

END OF QUESTIONS

<b>9</b>





**Additional page, if required.**

**Write the question numbers in the left-hand margin.**


**Additional page, if required.**

**Write the question numbers in the left-hand margin.**


**Additional page, if required.**

**Write the question numbers in the left-hand margin.**




**BLANK PAGE**

For Examiner's Use	
Question	Mark
1	
2	
3	
4	
5	
6	
7	
<b>TOTAL</b>	

**Copyright information**

For confidentiality purposes, all acknowledgements of third-party copyright material are published in a separate booklet. This booklet is published after each live examination series and is available for free download from [www.aqa.org.uk](http://www.aqa.org.uk)

Permission to reproduce all copyright material has been applied for. In some cases, efforts to contact copyright-holders may have been unsuccessful and AQA will be happy to rectify any omissions of acknowledgements. If you have any queries please contact the Copyright Team.

Copyright © 2022 AQA and its licensors. All rights reserved.

**IB/M/NC/Jun22/8100/1/E1**