

A



Surname _____

Forename(s) _____

Centre Number _____

Candidate Number _____

Candidate Signature _____

I declare this is my own work.

A-level

ECONOMICS

Paper 3 Economic Principles and Issues

7136/3

Monday 5 June 2023

Morning

Time allowed: 2 hours

[Turn over]



J U N 2 3 7 1 3 6 3 0 1

At the front of this book, write your surname and forename(s), your centre number, your candidate number and add your signature.

MATERIALS

For this paper you must have:

- **the Insert**
- **a calculator.**

INSTRUCTIONS

- **Answer ALL questions.**
- **Use black ink or black ball-point pen. Pencil should only be used for drawing.**
- **You will need to refer to the Insert provided to answer SECTION B.**
- **You must answer the questions in the spaces provided. Do not write on blank pages.**



- **If you need extra space for your answer(s), use the lined pages at the end of this book. Write the question number against your answer(s).**
- **Do all rough work in this answer book. Cross through any work that you do not want to be marked.**

INFORMATION

- **The maximum mark for this paper is 80.**
- **The marks for questions are shown in brackets.**
- **No deductions will be made for wrong answers.**

DO NOT TURN OVER UNTIL TOLD TO DO SO



SECTION A

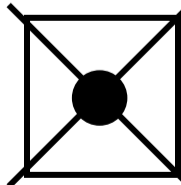
Answer ALL questions in this section.

Only ONE answer per question is allowed.

For each question completely fill in the circle alongside the appropriate answer.

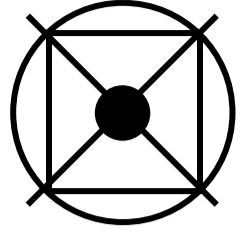
CORRECT METHOD 

WRONG METHODS    

If you want to change your answer you must cross out your original answer as shown. 



If you wish to return to an answer previously crossed out, ring the answer you now wish to select as shown.



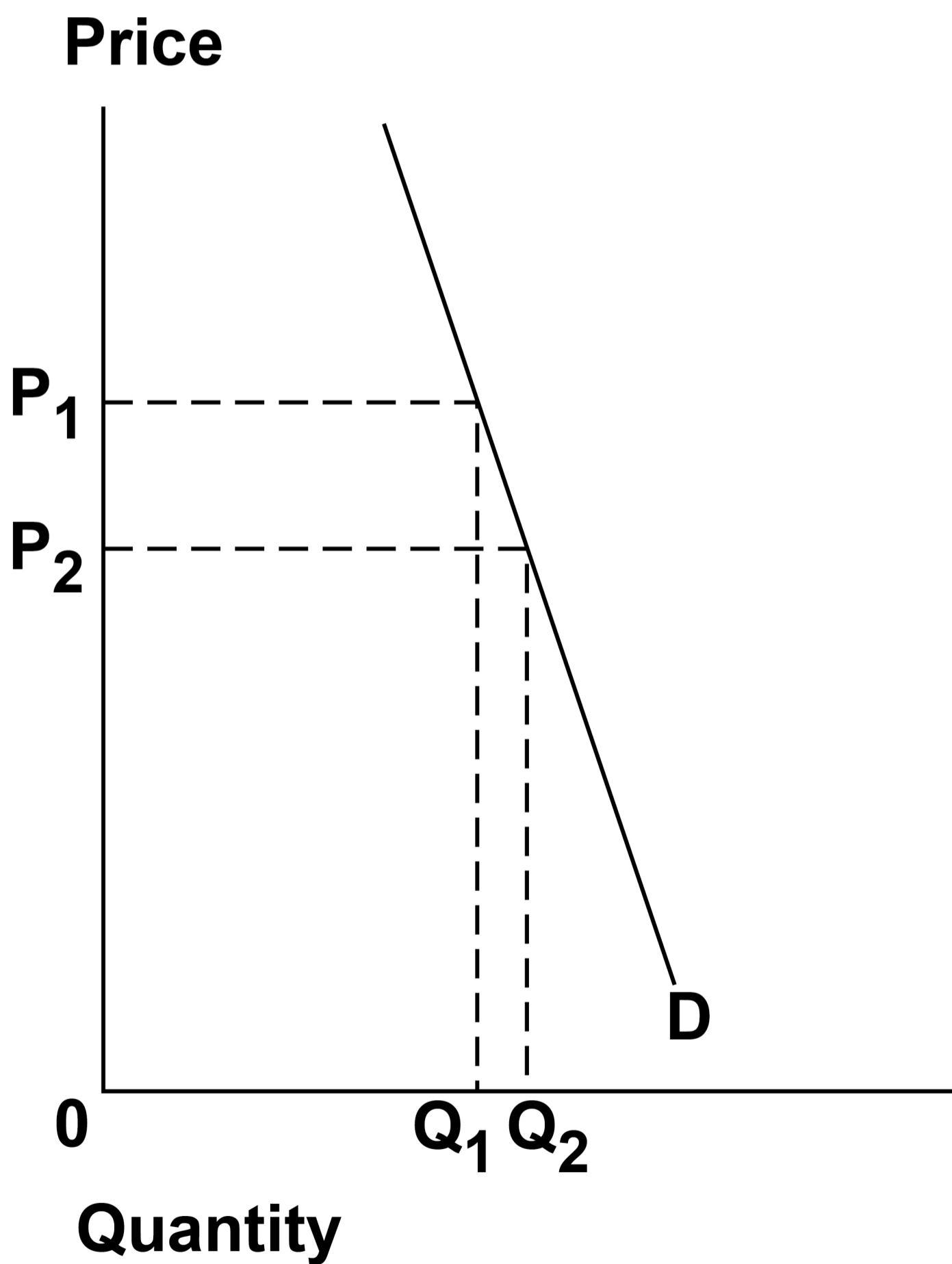
[Turn over]



0	1
---	---

FIGURE 1 shows the demand for lemons.

FIGURE 1



The fall in price and increase in the quantity demanded of lemons could have been caused by

- A a fall in the price of a substitute for lemons, oranges.**
- B a rise in the price of lemonade.**
- C a reduction in the price of a complement for lemons, fish.**
- D favourable weather leading to a record harvest.**

[1 mark]

[Turn over]



0	2
---	---

**The environment is a scarce resource.
A consequence of this is that**

- A all natural resources have a market price.**
- B all natural resources will eventually be used up.**
- C the environment has an opportunity cost.**
- D the environment is a pure public good.**

[1 mark]



BLANK PAGE

[Turn over]



0	3
---	---

TABLE 1 shows the price of a packet of peanuts and the number of packets of cashew nuts sold in a shop in one month. The price of a packet of cashew nuts is unchanged.

TABLE 1

Price of a packet of peanuts	Number of packets of cashew nuts purchased per month
£0.80	20 000
£0.84	32 500



When the price of a packet of peanuts rises from £0.80 to £0.84, the cross elasticity of demand for cashew nuts with respect to the price of peanuts is

A -12.5

B -0.08

C +0.08

D +12.5

[1 mark]

[Turn over]



0	4
---	---

The change in nominal national income per head is an unsatisfactory indicator of the change in the living standards of a country's citizens over a period of time.

The main reason is that nominal national income per head does not take into account

- A consumer expenditure at market prices.**
- B the output produced by different sectors of the economy.**
- C the rate of inflation.**
- D the size of the population.**

[1 mark]



BLANK PAGE

[Turn over]

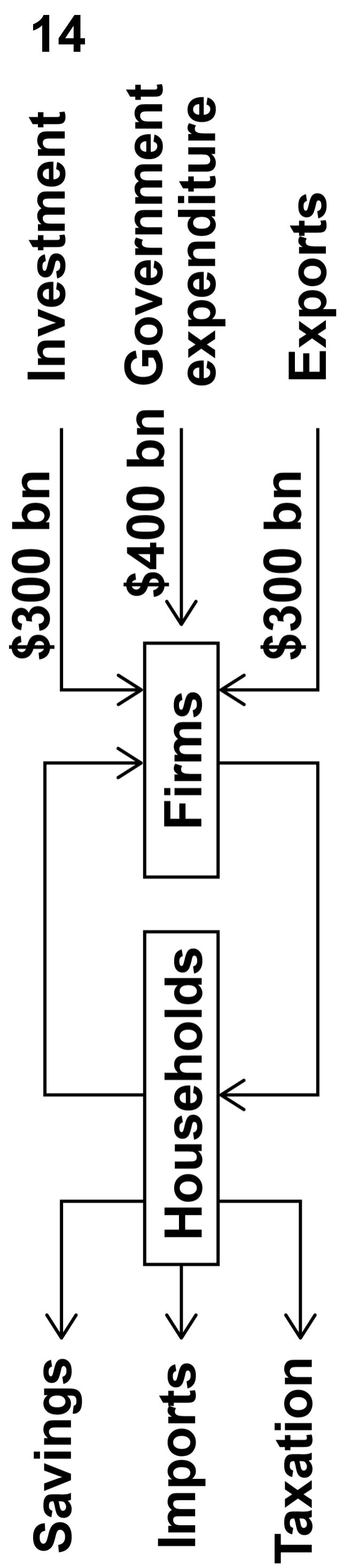




0 5

FIGURE 2 shows the injections into and withdrawals from the circular flow of income of an economy which is in macroeconomic equilibrium.

FIGURE 2





1 5

In the economy, net exports are –\$50bn. Which one of the combinations, A, B, C OR D, shows the levels of savings, taxation and imports?

A

B

C

D

	Savings (\$bn)	Taxation (\$bn)	Imports (\$bn)
A	300	350	350
B	350	400	250
C	350	250	350
D	450	300	250

15

[1 mark]

[Turn over]

0	6
---	---

A central bank has raised interest rates as part of monetary policy.

Which one of the following policy objectives is this most likely to assist the government in achieving?

- A A more equitable distribution of income**
- B Bringing down the rate of inflation**
- C Increasing the rate of economic growth**
- D Minimising the rate of unemployment**

[1 mark]



0	7
---	---

Following flooding, described by the Environment Agency as a ‘once in a century event’, there is a sharp increase in the number of residents of a large town who buy additional flood insurance.

Which one of these combinations of biases in decision making are the residents most likely to have experienced?

- A Anchoring and framing bias**
- B Availability bias and social norms**
- C Rules of thumb and anchoring**
- D Social norms and rules of thumb**

[1 mark]

[Turn over]



BLANK PAGE



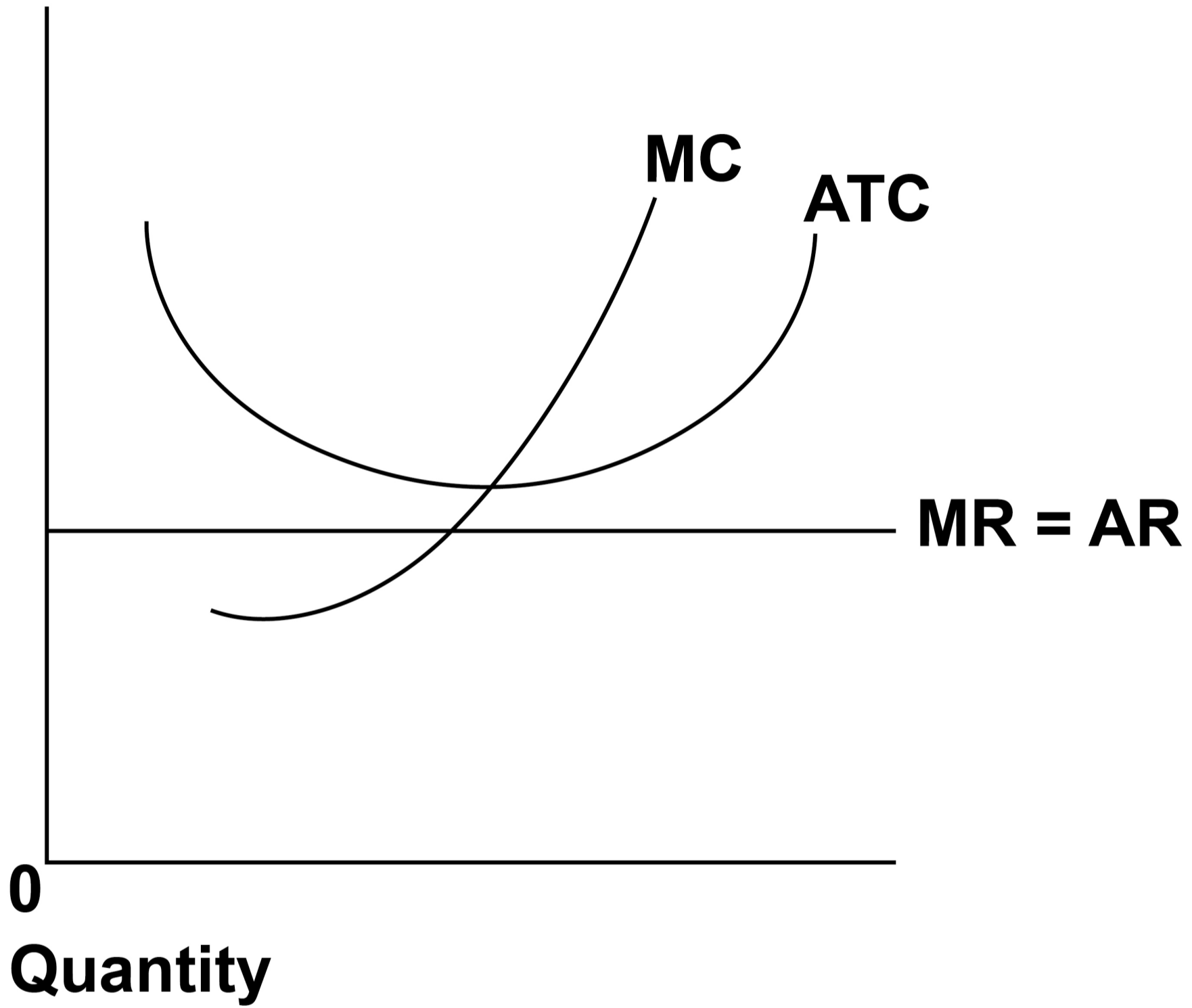
0	8
---	---

FIGURE 3, on page 20, shows the marginal cost (MC) and average total cost (ATC) curves for a firm in the short run in a perfectly competitive market.

It also shows the firm's marginal revenue (MR) and average revenue (AR) curves.

[Turn over]



FIGURE 3**Cost /
revenue**

What changes can be expected as the market moves into the long run?

- A New firms will enter the market, increasing supply**
- B Some firms will leave the market and the price will rise**
- C The firm will reduce its output to reduce its average total cost**
- D The firm will reduce its price to increase its market share**

[1 mark]

[Turn over]



0	9
---	---

In 2020, the market leader sold around three times as many vacuum cleaners in the UK as its closest rival. The market leader's dominance was built on technical innovation, protected by legal patents.

However, rivals have developed their own designs and are now challenging the market leader.

What feature of competitive markets does this illustrate?

- A Collusive oligopoly**
- B Creative destruction**
- C Hit and run competition**
- D Static efficiency**

[1 mark]



1	0
---	---

A £2 billion rise in government spending has led to an increase of £5 billion in national income.

All other things being equal, what is the value of the marginal propensity to consume?

A 0.4

B 0.6

C 2.5

D 3.0

[1 mark]

[Turn over]



11

An economy operating at its long-run productive capacity at the start of 2020 has a trend rate of growth of 6% per year. Real GDP increases by 2% in 2021 and 10% in 2022.

Which one of the following accurately describes the position of the economy at the end of each year?

		2021	2022
<input type="radio"/>	A	Negative output gap	Negative output gap
<input type="radio"/>	B	Negative output gap	No output gap
<input type="radio"/>	C	Positive output gap	No output gap
<input type="radio"/>	D	Positive output gap	Positive output gap

[1 mark]



1	2
---	---

The quantity theory of money can be explained using Irving Fisher's equation of exchange, $MV=PQ$. Monetarist economists believe that the theory helps to explain inflation because some parts of the equation are normally stable.

Which parts of the equation do monetarist economists normally consider to be stable?

A M and P

B M and V

C P and Q

D V and Q

[1 mark]

[Turn over]



1	3
---	---

TABLE 2 shows the relationship between the number of workers employed by a firm and the total output of a product. The amount of other factors of production employed remains the same.

TABLE 2

NUMBER OF WORKERS	TOTAL OUTPUT
1	8
2	28
3	54
4	82
5	103
6	103
7	99



For this firm, diminishing marginal returns to labour occur when the

- A 4th worker is employed.**
- B 5th worker is employed.**
- C 6th worker is employed.**
- D 7th worker is employed.**

[1 mark]

[Turn over]



1	4
---	---

A firm faces a downward sloping demand curve. The firm discovers that any increase or decrease from its current level of output leads to a fall in total revenue. This means that at its current output marginal revenue is

- A equal to average revenue.**
- B negative.**
- C positive.**
- D zero.**

[1 mark]



1	5
---	---

Which one of the following is the most likely result of a divorce of ownership from control in an organisation?

- A Profits are maximised**
- B Shareholders make all organisational decisions**
- C The adoption of satisficing behaviour**
- D The free-rider problem**

[1 mark]

[Turn over]



1	6
---	---

FIGURE 4, on page 32, shows a short-run Phillips curve (SRPC) and a long-run Phillips curve (LRPC).

Government intervention moves the economy from position A to position B and then the economy moves from position B to position C.

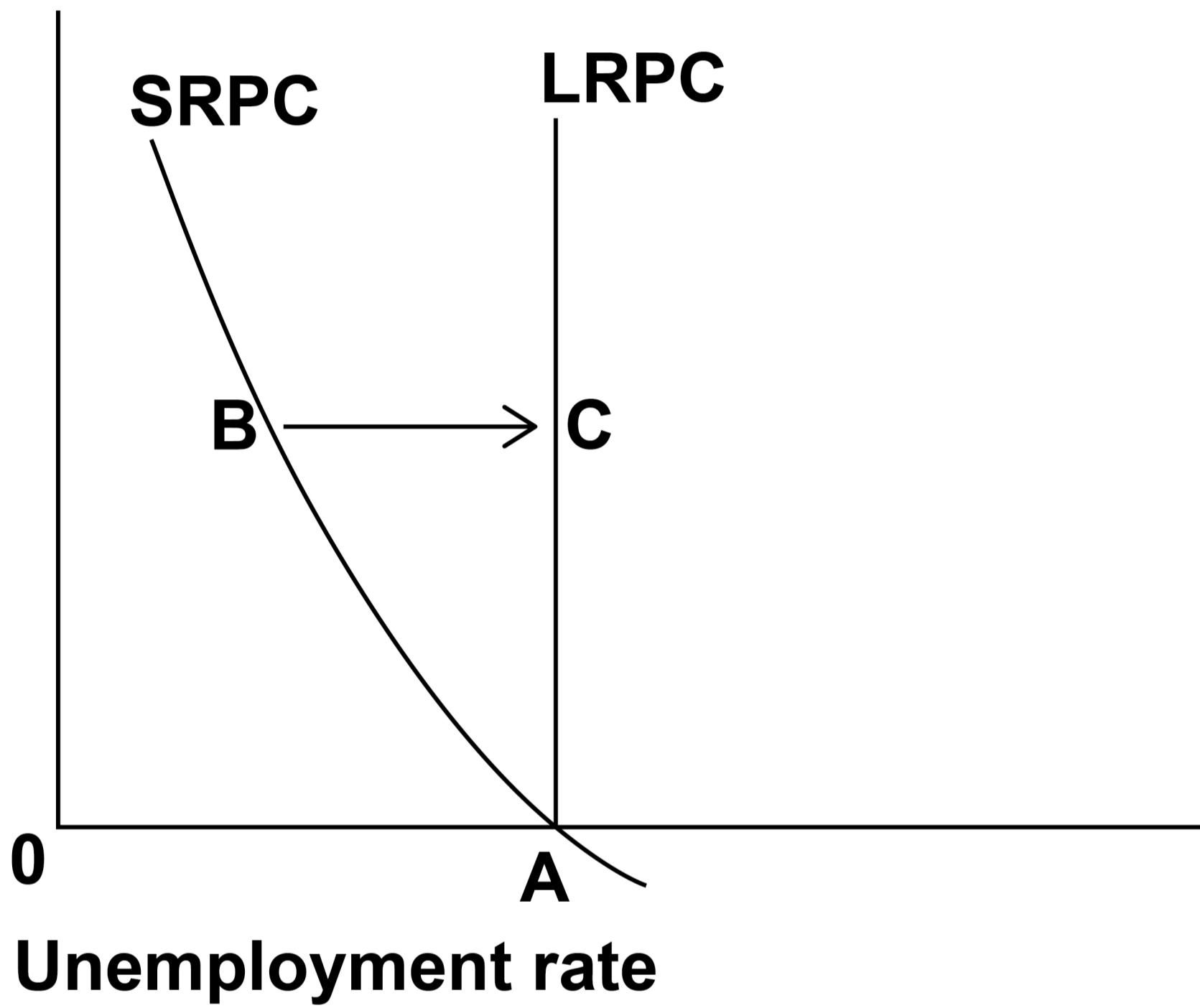


BLANK PAGE

[Turn over]



FIGURE 4

Inflation
rate

Which one of the following is most likely to explain the movement from position B to position C?

- A Demand for exports has risen as a result of the intervention**
- B Economic agents have higher inflation expectations due to the intervention**
- C The government cut taxes to reduce unemployment**
- D The intervention has increased the natural rate of unemployment**

[1 mark]

[Turn over]



1	7
---	---

Which one of the following is a role of the UK's Office for Budget Responsibility?

- A Deciding how much public funding is given to each government department**
- B Enabling the government to run a budget deficit by issuing government bonds**
- C Evaluating the government's performance against its own fiscal targets**
- D Making recommendations to the government on how to reduce its budget deficit**

[1 mark]



1	8
---	---

Which one of the following is a policy that the Bank of England is most likely to undertake if it wants to increase the money supply?

- A Increase its purchases of government securities**
- B Increase market interest rates by increasing Bank Rate**
- C Increase the capital ratio required of commercial banks**
- D Increase the liquidity ratio required of commercial banks**

[1 mark]

[Turn over]



1	9
---	---

Carrots and potatoes are grown using the same factors of production. FIGURE X, on page 37, shows the demand (D_C) and supply (S_C) curves for carrots. FIGURE Y, on page 38, shows the demand (D_P) and supply (S_P) curves for potatoes. A change in people's preferences shifts the demand for carrots from D_{C1} to D_{C2} . As a result, the supply of potatoes shifts from S_{P1} to S_{P2} .



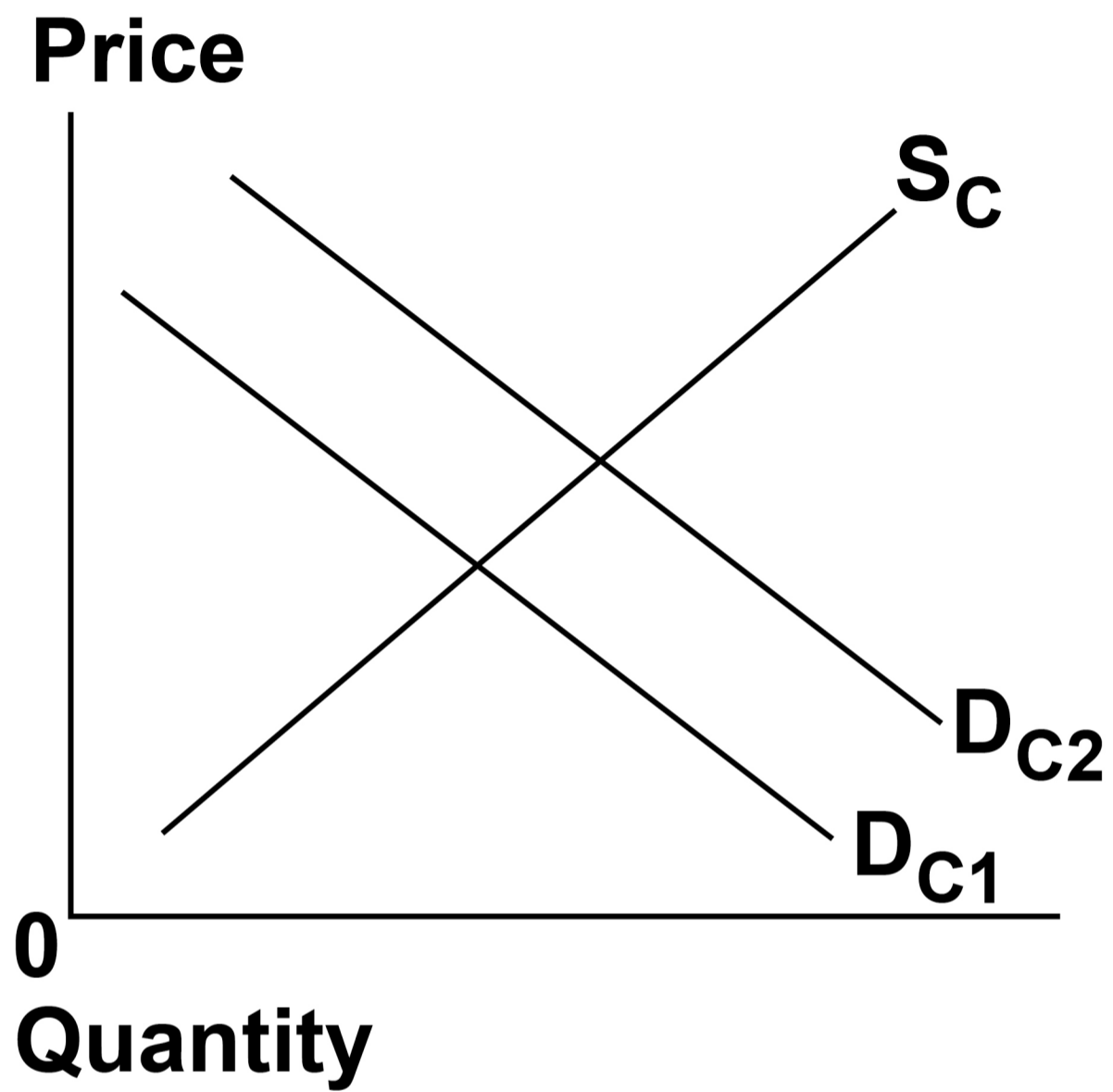
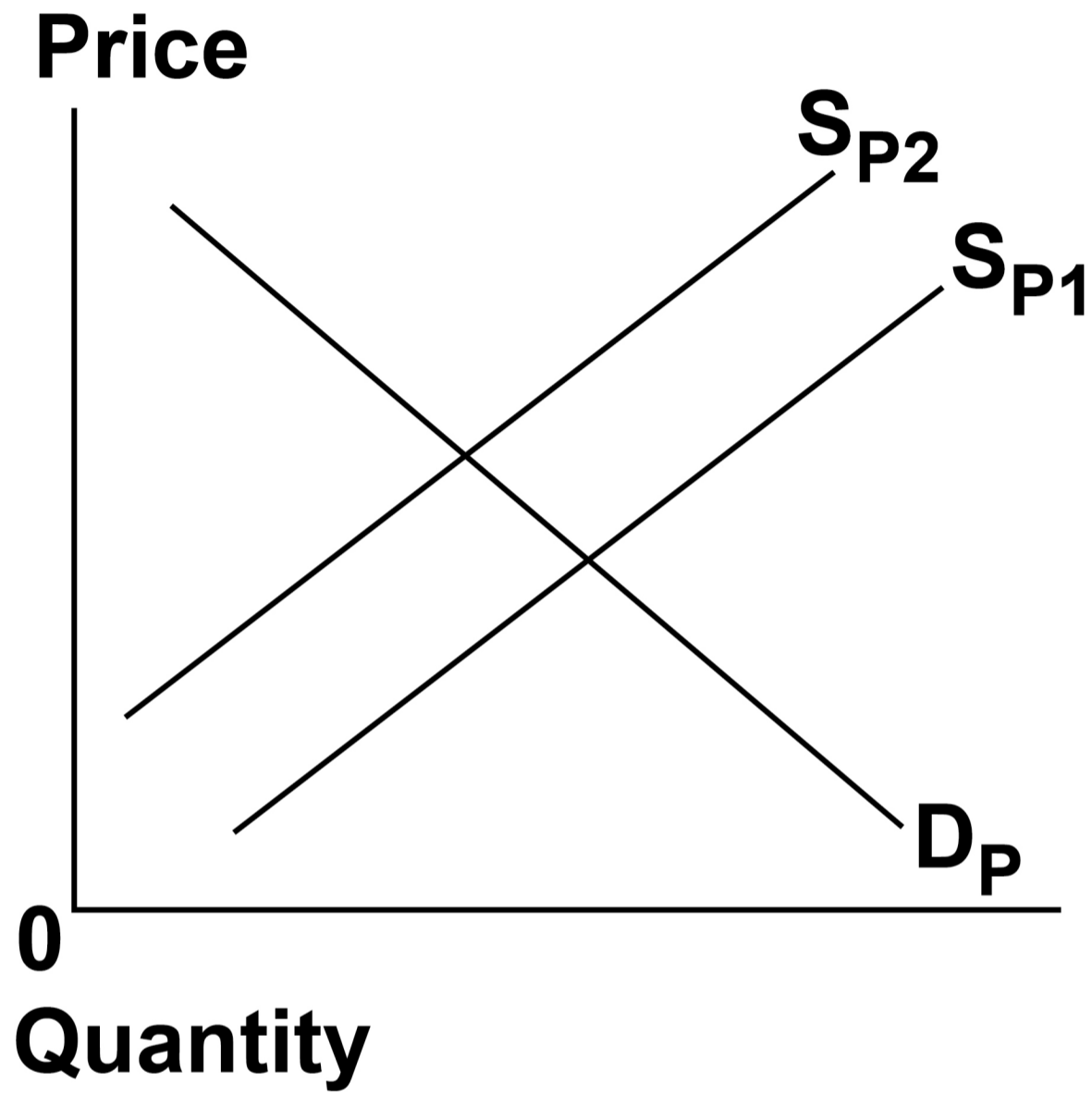
FIGURE X**Market for carrots****[Turn over]**

FIGURE Y**Market for potatoes**

Which one of the following statements correctly explains the changes shown in FIGURES X AND Y?

- A The demand curve for carrots shifts due to the rationing function of prices**
- B The price of carrots increases because carrots and potatoes are in derived demand**
- C The price of potatoes increases because potatoes and carrots are in joint supply**
- D The supply curve for potatoes shifts due to the incentive function of prices**

[1 mark]

[Turn over]



2	0
---	---

FIGURE 5, on the opposite page, shows the marginal private and social benefit (MPB and MSB) curves and the marginal private and social cost (MPC and MSC) curves for a product.

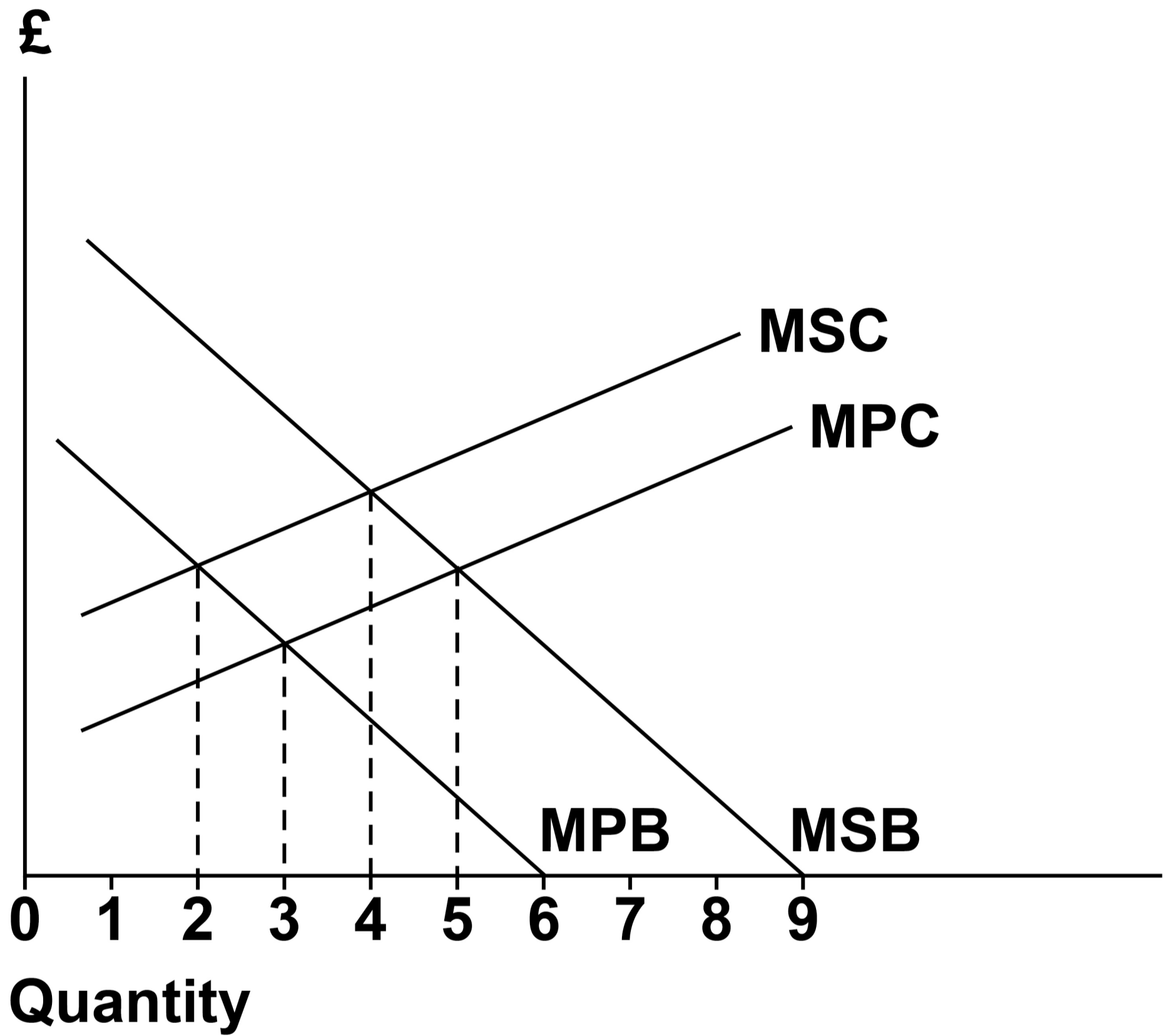
The socially optimal level of output for this product is

- A 2 units**
- B 3 units**
- C 4 units**
- D 5 units**

[1 mark]



FIGURE 5



[Turn over]



2	1
---	---

Which one of the following would be classified as a debit item in the secondary income section of the current account of the UK balance of payments?

- A Dividends paid to overseas owners of shares in UK companies**
- B Emergency aid provided to another country following a natural disaster**
- C Investment in building a factory abroad by a UK firm**
- D Premiums paid by UK based organisations to foreign insurance companies**

[1 mark]



BLANK PAGE

[Turn over]



2	2
---	---

TABLE 3 below shows the amount of coffee or tea that two countries can produce with a given amount of resources.

TABLE 3

	COFFEE (TONNES)	TEA (TONNES)
COUNTRY X	80 000	100 000
COUNTRY Y	50 000	75 000

Which one of the following statements, on the opposite page, is supported by the data in TABLE 3?



- A Country X has a comparative advantage in the production of both coffee and tea**
- B Country X has a comparative advantage in the production of coffee and has an absolute advantage in the production of tea**
- C The opportunity cost of producing both coffee and tea is higher in Country X than in Country Y**
- D The opportunity cost of producing tea in Country X is lower than the opportunity cost of producing tea in Country Y**

[1 mark]

[Turn over]



2	3
---	---

TABLE 4 shows the value of the pound sterling in euros and Canadian dollars at the beginning of 2021 and 2022.

TABLE 4

	2021	2022
Value of £1 in euros	1.11	1.19
Value of £1 in Canadian dollars	1.76	1.71

According to the data in TABLE 4, between the beginning of 2021 and the beginning of 2022, the Canadian dollar

- A strengthened against the pound sterling and strengthened against the euro.**
- B strengthened against the pound sterling and weakened against the euro.**
- C weakened against the pound sterling and strengthened against the euro.**
- D weakened against the pound sterling and weakened against the euro.**

[1 mark]

[Turn over]



2	4
---	---

Regulatory capture describes a situation in which

- A firms suffer a fall in supernormal profit due to the actions of regulators.**
- B government regulations reduce the impact of monopoly power.**
- C government removes regulations that have been acting as a barrier to entry.**
- D industry regulators grow too close to the firms they are regulating.**

[1 mark]



BLANK PAGE

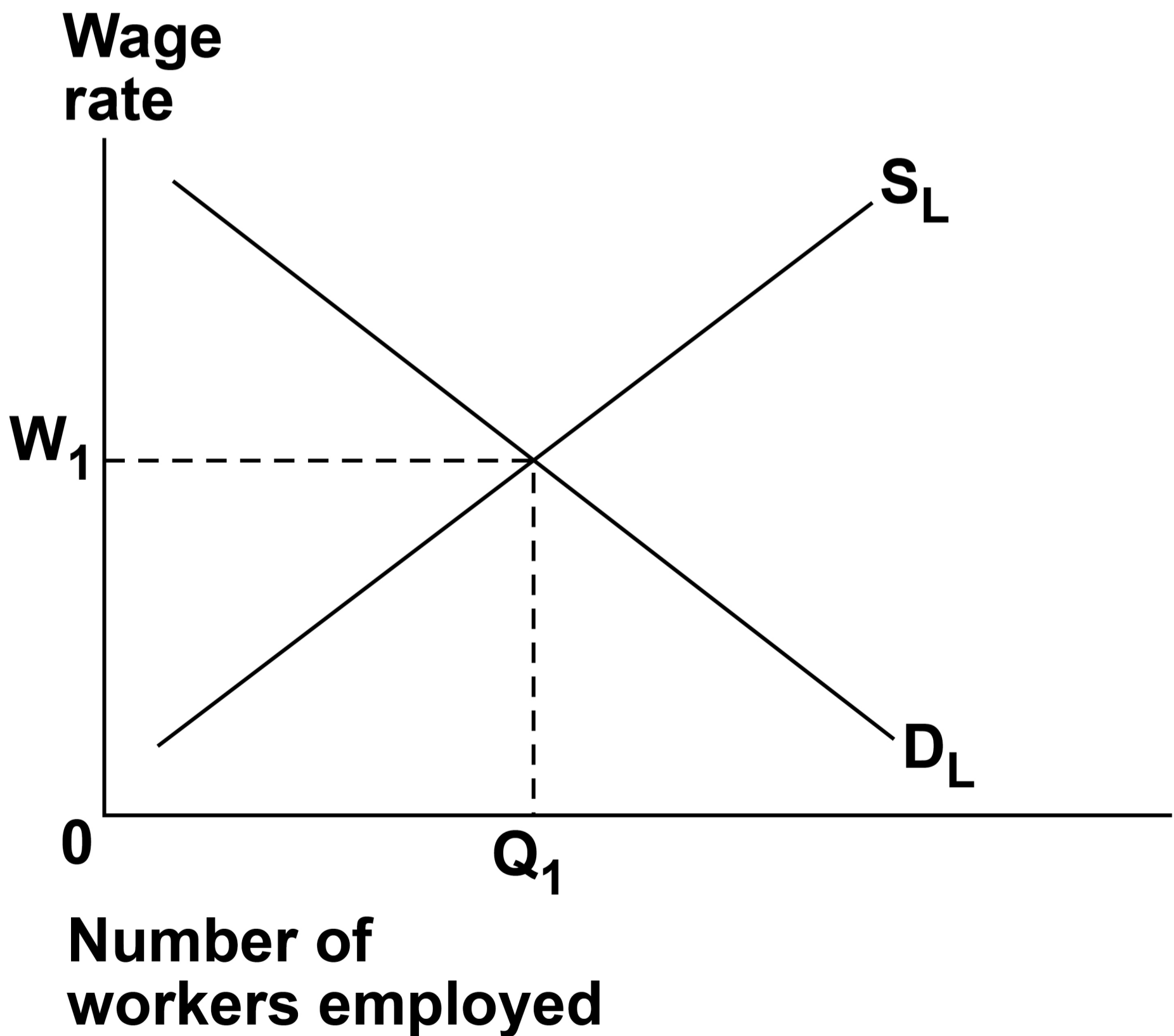
[Turn over]



2	5
---	---

FIGURE 6 shows the supply of labour (S_L) and demand for labour (D_L) in a perfectly competitive labour market.

FIGURE 6



All other things being equal, which one of the following combinations would mean that wages in this labour market are likely to increase from W_1 ?

A A fall in the demand for the final product and a rise in the number of workers training to enter this labour market

B A fall in wages in a labour market with similar skill requirements and a fall in the price of a substitute for the output produced

[Turn over]



- C** An increase in the minimum qualifications required for workers in the industry and a fall in the price of a complement for the output produced
- D** An increase in the unemployment rate across the economy and firms substituting capital for labour in the production process

[1 mark]



2	6
---	---

Which one of the following is most likely to affect the elasticity of demand for labour in a particular occupation?

- A The proportion of employers' total costs which are made up by wages**
- B The quantity demanded of the final output that the workers produce**
- C The size of the pool of skilled labour available in the local area**
- D The time taken to achieve the qualifications needed for the role**

[1 mark]

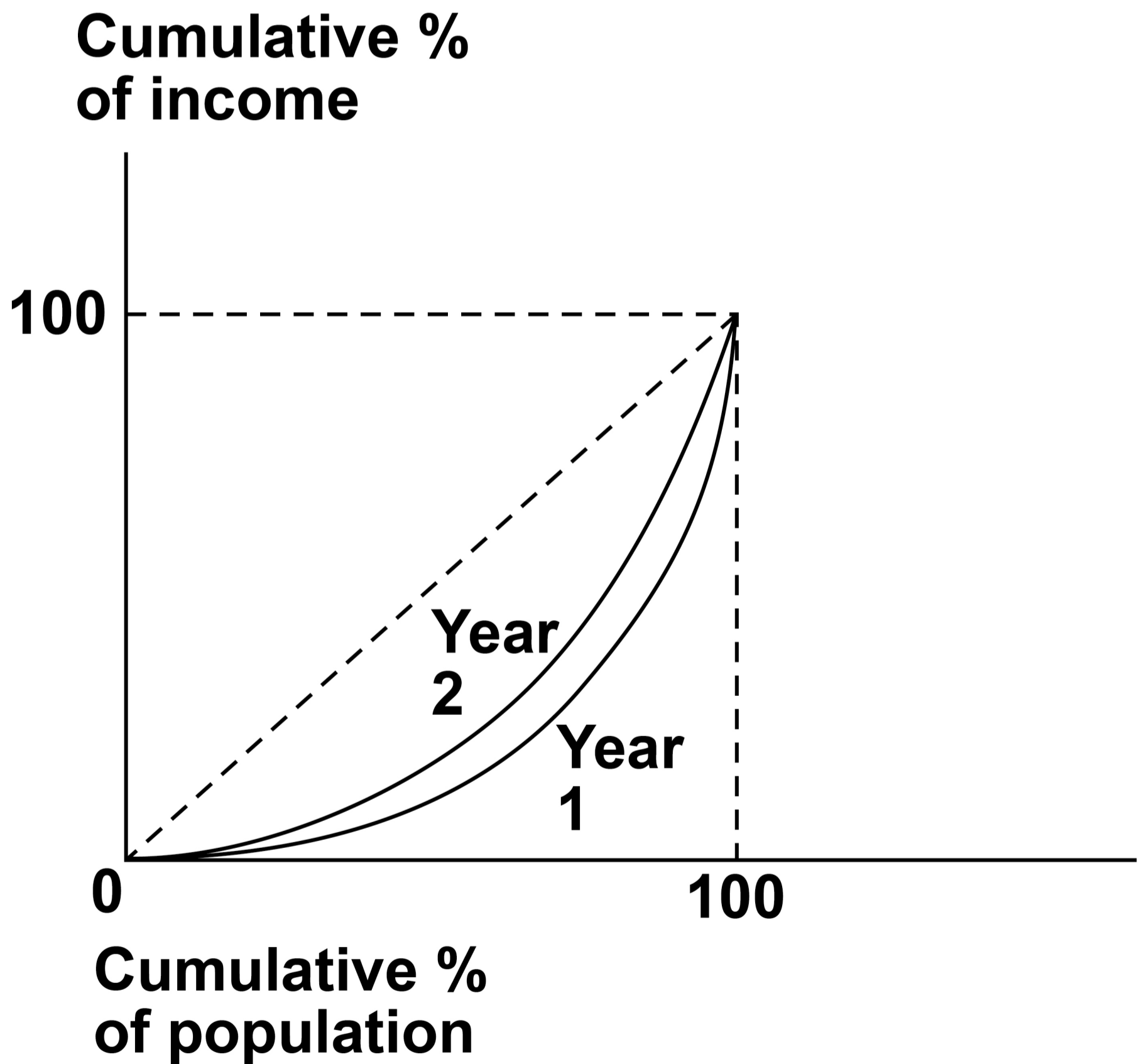
[Turn over]



27

FIGURE 7 shows the income distribution of a country in Year 1 and Year 2.

FIGURE 7



From FIGURE 7, it can be concluded that income distribution has become

- A less equal and the Gini coefficient has decreased.**
- B less equal and the Gini coefficient has increased.**
- C more equal and the Gini coefficient has decreased.**
- D more equal and the Gini coefficient has increased.**

[1 mark]

[Turn over]



2	8
---	---

FIGURE 8, on page 58, shows the aggregate demand curve (AD) and the long-run aggregate supply curves (LRAS) for an economy.

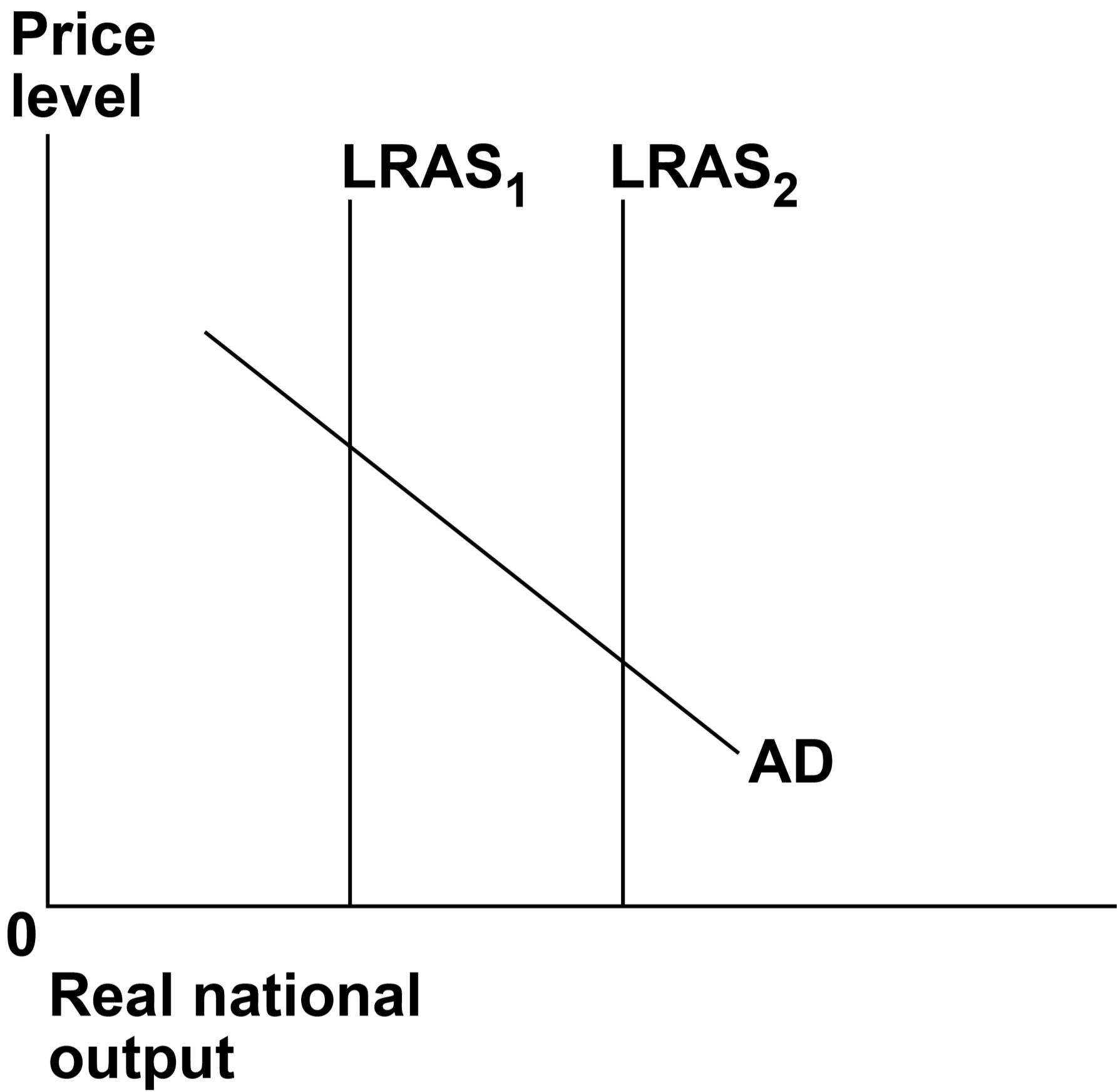
A redistribution of government spending from spending on welfare towards the funding of research and development shifts the long-run aggregate supply curve from $LRAS_1$ to $LRAS_2$.

BLANK PAGE

[Turn over]



FIGURE 8



Which one of the following is the most likely effect of this policy?

- A A decrease in the number of people who are economically active**
- B An improvement in the balance of payments on current account**
- C An increase in the size of the government's budget deficit**
- D The creation of a positive output gap**

[1 mark]

[Turn over]



29

Which one of the following is an example of moral hazard resulting from the regulation of a financial system?

- A Asymmetric information may lead bank customers to take out loans they cannot repay**
- B Banks may engage in more risky lending if they believe the central bank will support them in a crisis**
- C Banks may experience lower profits if the central bank imposes high capital requirements**
- D Regulations imposed by the central bank may make it harder for low-income groups to get loans**

[1 mark]



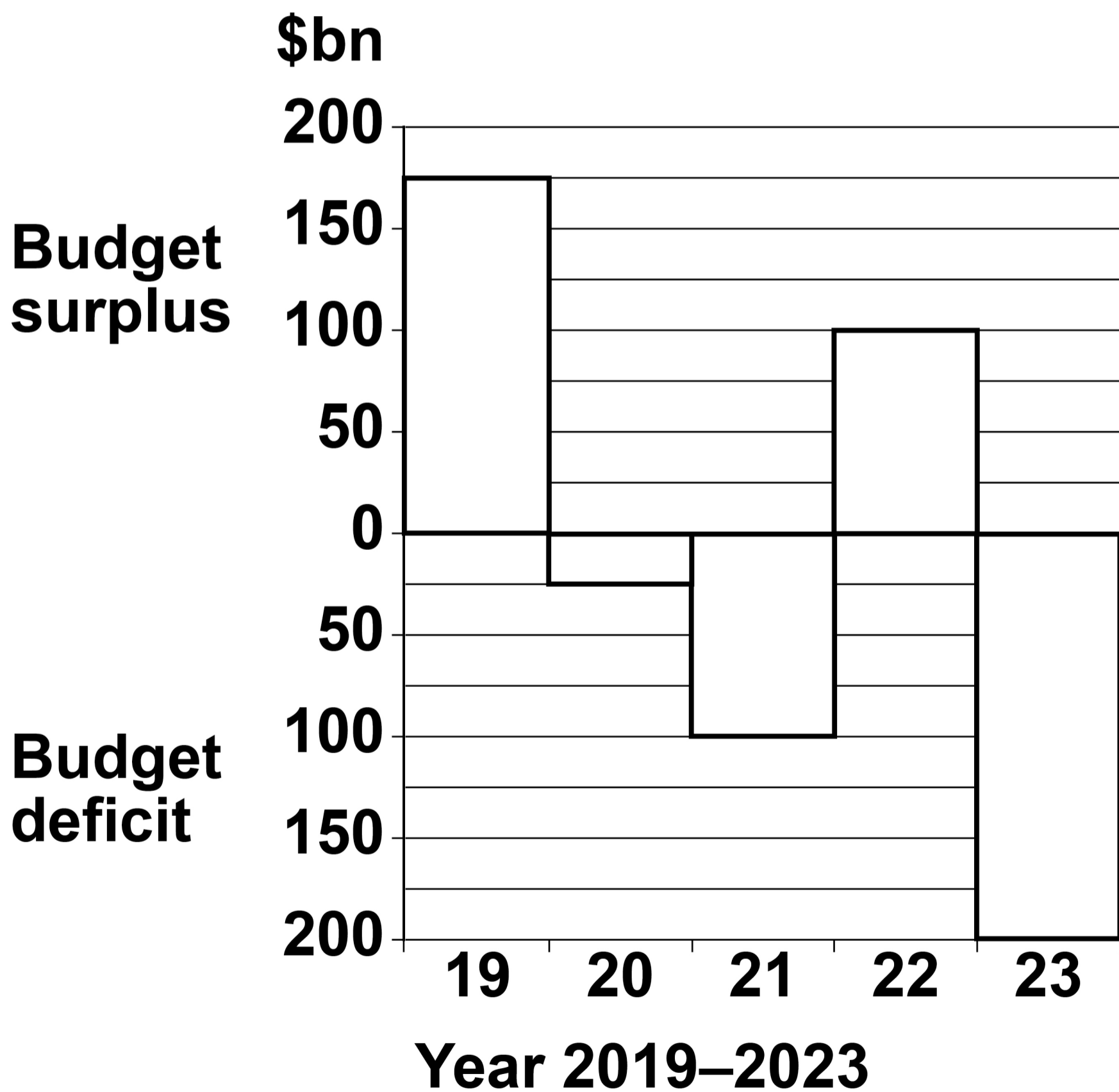
BLANK PAGE

[Turn over]



30

FIGURE 9 shows the government budget balance for an economy from 2019 to 2023.

FIGURE 9

All other things being equal, between 2019 and 2023, the national debt of this economy increased by

- A \$50bn**
- B \$200bn**
- C \$275bn**
- D \$325bn**

[1 mark]

<hr/>
30

[Turn over]



SECTION B

Answer ALL questions in this section.

**REFER TO THE INSERT FOR
EXTRACTS A, B, C and D.**

Total for this Investigation: 50 marks

THE ECONOMIC PERFORMANCE OF SRI LANKA

INVESTIGATION

SCENARIO

You are an economist working for an organisation that monitors the performance of the economies of countries in Southern Asia.



You have been asked to review the economic performance of Sri Lanka.

As part of this investigation, you are to provide answers to three questions.

REFERRING TO THE INSERT, study EXTRACTS A, B and C, then use these and your knowledge of economics to help you answer Questions 31 and 32. There is also a news report, EXTRACT D, which is to be used with the other extracts to help answer Question 33.

[Turn over]



Lined writing area consisting of 20 horizontal lines.

[Turn over]





[Turn over]





[Turn over]





Lined area for writing, consisting of multiple horizontal lines across the page.

[Turn over]



3 | **2**

Explain possible reasons for fluctuations in the world market price of tea.
[15 marks]

[Turn over]





[Turn over]



[Turn over]



[Turn over]



[Turn over]



3	3
---	---

After considering EXTRACT D, and the original evidence in EXTRACTS A, B and C, would you recommend that the government of Sri Lanka cut its spending to reduce its debt?

Justify your recommendation.

[25 marks]



[Turn over]





[Turn over]



[Turn over]



[Turn over]



9 5



[Turn over]






[Turn over]



END OF QUESTIONS


<hr/>
50



Additional page, if required.


Write the question numbers in the left-hand margin.

A vertical line on the left side of the page is followed by 15 horizontal lines, creating a margin area for writing question numbers.



Additional page, if required.

Write the question numbers in the left-hand margin.



Additional page, if required.

Write the question numbers in the left-hand margin.

Lined area for writing, consisting of 18 horizontal lines. A vertical margin line is present on the left side of the page.

BLANK PAGE

For Examiner's Use	
Section	Mark
A	
B	
TOTAL	

Copyright information

For confidentiality purposes, all acknowledgements of third-party copyright material are published in a separate booklet. This booklet is published after each live examination series and is available for free download from www.aqa.org.uk.

Permission to reproduce all copyright material has been applied for. In some cases, efforts to contact copyright-holders may have been unsuccessful and AQA will be happy to rectify any omissions of acknowledgements. If you have any queries please contact the Copyright Team.

Copyright © 2023 AQA and its licensors. All rights reserved.

WP/M/DL/Jun23/7136/3/E3

