



Surname _____

Forename(s) _____

Centre Number _____

Candidate Number _____

Candidate Signature _____

I declare this is my own work.

A-level

LAW

Paper 3A Contract

7162/3A

Monday 12 June 2023

Morning

Time allowed: 2 hours

At the top of the page, write your surname and forename(s), your centre number, your candidate number and add your signature.

[Turn over]



MATERIALS

For this paper you will need no other materials.

INSTRUCTIONS

- **Use black ink or black ball-point pen.**
- **Answer ALL questions. You must answer the questions in the spaces provided. Do NOT write on blank pages.**
- **If you need extra space for your answer(s), use the lined pages at the end of this book. Write the question number against your answer(s).**
- **Do all rough work in this book. Cross through any work you do not want to be marked.**



- **Questions should be answered in continuous prose. Give reasoned answers. Where appropriate, make reference to cases, statutes and examples.**

INFORMATION

- **The marks for questions are shown in brackets.**
- **The maximum mark for this paper is 100.**

DO NOT TURN OVER UNTIL TOLD TO DO SO




Answer ALL questions in the spaces provided.

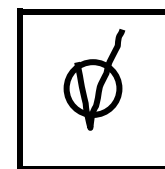
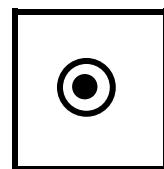

Only ONE answer per question is allowed.

For each question completely fill in the circle alongside the appropriate answer.

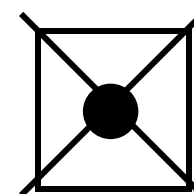
CORRECT METHOD




WRONG METHODS



If you want to change your answer you must cross out your original answer as shown.



If you wish to return to an answer previously crossed out, ring the answer you now wish to select as shown.



BLANK PAGE

[Turn over]



0	1
---	---

Select the FALSE statement about the effect of the Consumer Rights Act 2015 (CRA) on a contract for services.
[1 mark]

☐


A The CRA creates a right to a price reduction in some circumstances if the service does not comply with the requirements of the contract.

☐

B The CRA creates a right to a repeat performance in some circumstances if the service does not comply with the requirements of the contract.

☐

C The CRA imposes a term requiring performance of the service with absolute care and skill.



D The CRA imposes a term requiring performance of the service within a reasonable time.

[Turn over]



0	2
---	---

Select the TRUE statement about a term which attempts to exclude or limit liability for breach of the ‘satisfactory quality’ requirement in a consumer contract for supply of goods (Consumer Rights Act 2015 s9). [1 mark]

☐

A Liability can be excluded if the term is validly incorporated into the contract.

☐

B Liability can be excluded or limited if the term is reasonable.

☐

C Liability can be limited but not excluded.

☐

D Liability cannot be excluded or limited.

0	3
---	---

Which of the following BEST describes what happens in an action for breach of contract? [1 mark]

☐

A The claimant prosecutes the defendant.

☐

B The claimant sues the defendant.

☐

C The Crown prosecutes the defendant.

☐

D The Crown sues the defendant.

[Turn over]



0	4
---	---

Which of the following BEST describes where the rules of contract law can be found? [1 mark]

☐

A Entirely in common law.

☐

B Entirely in statute law.

☐

C In neither common law nor statute law.

☐

D Partly in common law and partly in statute law.



0	5
---	---

In the context of a statutory instrument (a form of delegated legislation), what does the term ‘ultra vires’ mean?
[1 mark]

- ☐ **A The statutory instrument cannot be challenged in court.**
- ☐ **B The statutory instrument can only be enacted by Parliament.**
- ☐ **C The statutory instrument has gone beyond the powers granted by Parliament to make laws.**
- ☐ **D The statutory instrument only applies outside the United Kingdom.**

[Turn over]

<hr/> 5



0	6
---	---

Explain TWO ways in which the law tries to achieve judicial independence.
[5 marks]

This image shows a blank sheet of white paper with horizontal ruling lines. The lines are evenly spaced and run across the width of the page. There are no margins, text, or other markings on the paper.

[Turn over]

5



0	7
---	---

Asif had a contract with Belle. Seven days before performance was due, Asif informed Belle that he did not intend to perform his obligations under the contract. Belle did not accept Asif's refusal to perform and continued to prepare for performance of her own obligations. This included spending £500 necessary to carry out those obligations. Asif never did perform his obligations under the contract. Subsequently, Belle sued for damages for breach of contract, including the £500 that she had spent.



Taking into account the rules on anticipatory breach of contract, suggest why a court will probably include the £500 in an award of damages to Belle.

[5 marks]

[illegible]

[Turn over]





BLANK PAGE

[Turn over]



0	8
---	---

Cora placed an advertisement in a local newspaper, which stated, ‘For sale: racing bike, £800; gym weights, £400.’ In response, Del sent a text message to Cora: ‘What would you say to £1000 for the bike and the weights?’ Cora replied, ‘I will think about it but prefer to sell separately.’

Three days later, when he had not heard from Cora, Del bought a racing bike from someone else. The day after, Del was surprised to get a message from Cora which read, “I accept your offer of £1000 for both the bike and the weights. Ring me to arrange collection.” Del told Cora that he was no longer interested in the bike or the weights.



Referring to the rules on agreement in formation of contract, advise Cora of any rights and remedies that she may have against Del. [10 marks]

This image shows a blank sheet of white paper with horizontal ruling lines. The lines are evenly spaced and run across the width of the page. There are no margins, text, or other markings on the paper.

[Turn over]



This image shows a blank sheet of white paper with horizontal ruling lines. The lines are evenly spaced and run across the width of the page. There are no margins, text, or other markings on the paper.

This image shows a blank sheet of white paper with horizontal ruling lines. The lines are evenly spaced and run across the width of the page. There are no margins, text, or other markings on the paper.

[Turn over]



[illegible]

[Turn over]

10



In Question 09 you are required to provide an extended answer which shows a clear, logical and sustained line of reasoning leading to a valid conclusion.

0	9
----------	----------

Examine the extent to which legal rules and moral rules are related. Discuss the extent to which rules in contract law reflect rules of morality. [15 marks]

This image shows a blank sheet of white paper with horizontal ruling lines. The lines are evenly spaced and run across the width of the page. There are no margins, text, or other markings on the paper.

[Turn over]



This image shows a blank sheet of white paper with horizontal ruling lines. The lines are evenly spaced and run across the width of the page. There are no margins, text, or other markings on the paper.

This image shows a blank sheet of white paper with horizontal ruling lines. The lines are evenly spaced and run across the width of the page. There are no margins, text, or other markings on the paper.

[Turn over]



This image shows a blank sheet of white paper with horizontal ruling lines. The lines are evenly spaced and run across the width of the page. There are no margins, text, or other markings on the paper.

[Turn over]

15



In Question 10 you are required to provide an extended answer which shows a clear, logical and sustained line of reasoning leading to a valid conclusion.

1	0
----------	----------

Ezra was given an expensive shirt as a present but he did not like the colour, so he decided to sell it. Fred asked Ezra if the material was cotton because he did not like shirts that creased excessively. Ezra knew that the shirt packet stated, ‘Made from 100% natural fibres’. He believed that this meant cotton. So Ezra confidently assured Fred that the shirt was made from cotton. Fred bought the shirt for £80. Fred then discovered that it was made from a blend of cotton and linen which could crease badly whilst

being worn. Fred wanted to return the shirt to Ezra and get his money back.

Greta had recently bought land to extend the grounds of her house. She arranged for Fred, a landscape gardener, to design and create a new large garden on the land for a fee of £20 000. Greta paid £5000 immediately, the remainder to be paid on completion. Fred spent £7000 on materials and had partly completed the work when heavy rain, forecast for some months, resulted in serious flooding. The flooding damaged Greta's house so severely that it would have to be demolished. However, the garden area of land was largely unaffected.

[Turn over]



Consider Fred's rights and remedies against Ezra in connection with the shirt. Having regard to the flooding and the expected demolition of Greta's house, consider the rights and remedies of Fred and Greta in connection with the contract for the design and creation of the garden. [30 marks]

This image shows a blank sheet of white paper with horizontal ruling lines. The lines are evenly spaced and run across the width of the page. There are no margins, text, or other markings on the paper.

This image shows a blank sheet of white paper with horizontal ruling lines. The lines are evenly spaced and run across the width of the page. There are no margins, text, or other markings on the paper.

[illegible]

[Turn over]



This image shows a blank sheet of white paper with horizontal ruling lines. The lines are evenly spaced and run across the width of the page. There are no margins, text, or other markings on the paper.

40

This image shows a blank sheet of white paper with horizontal ruling lines. The lines are evenly spaced and run across the width of the page. There are no margins, text, or other markings on the paper.

This image shows a blank sheet of white paper with horizontal ruling lines. The lines are evenly spaced and run across the width of the page. There are no margins, text, or other markings on the paper.

[Turn over]



42

[illegible]

This image shows a blank sheet of white paper with horizontal ruling lines. The lines are evenly spaced and run across the width of the page. There are no margins, text, or other markings on the paper.

[Turn over]



30



BLANK PAGE

[Turn over]



In Question 11 you are required to provide an extended answer which shows a clear, logical and sustained line of reasoning leading to a valid conclusion.

1	1
---	---

Karol was a professional gardener. He agreed to carry out a significant amount of work in the garden of Lewis, a neighbour with whom Karol often had a drink. In return, Lewis promised to give Karol a £10 gift voucher. Karol failed to do the agreed garden work.

Two months ago, Lewis's sister, Mandy, had given him a new garden barbecue as a birthday present. Mandy had bought the barbecue from NiceCook Ltd, a well-known cooking equipment shop. Mandy asked NiceCook Ltd to send the



barbecue directly to Lewis and to include a note wishing Lewis many happy barbecues. When Lewis first used the barbecue, he was disappointed to note that the paint on the lid was noticeably scratched. In addition, much of the food Lewis prepared was undercooked because the barbecue was unable to reach the correct temperature.

[Turn over]



Consider the rights and remedies of Lewis against Karol in relation to the work AND consider the rights and remedies of Lewis against NiceCook Ltd in relation to the barbecue.

In respect of a consumer contract for the supply of goods, assess whether the Consumer Rights Act 2015 is successful in balancing the interests of traders and consumers. [30 marks]

[illegible]

[Turn over]



50

This image shows a blank sheet of white paper with horizontal ruling lines. The lines are evenly spaced and run across the width of the page. There are no margins, text, or other markings on the paper.

This image shows a blank sheet of white paper with horizontal ruling lines. The lines are evenly spaced and run across the width of the page. There are no margins, text, or other markings on the paper.

This image shows a blank sheet of white paper with horizontal ruling lines. The lines are evenly spaced and run across the width of the page. There are no margins, text, or other markings on the paper.

This image shows a blank sheet of white paper with horizontal ruling lines. The lines are evenly spaced and run across the width of the page. There are no margins, text, or other markings on the paper.

This image shows a blank sheet of white paper with horizontal ruling lines. The lines are evenly spaced and run across the width of the page. There are no margins, text, or other markings on the paper.

Handwriting practice lines consisting of 18 horizontal lines.





This image shows a blank sheet of white paper with horizontal ruling lines. The lines are evenly spaced and run across the width of the page. There are no margins, text, or other markings on the paper.

END OF QUESTIONS

30



Additional page, if required.

Write the question numbers in the left-hand margin.

[illegible]

Additional page, if required.
Write the question numbers in the left-hand margin.

BLANK PAGE

For Examiner's Use	
Question	Mark
1–5	
6	
7	
8	
9	
10	
11	
TOTAL	

Copyright information

For confidentiality purposes, all acknowledgements of third-party copyright material are published in a separate booklet. This booklet is published after each live examination series and is available for free download from www.aqa.org.uk.

Permission to reproduce all copyright material has been applied for. In some cases, efforts to contact copyright-holders may have been unsuccessful and AQA will be happy to rectify any omissions of acknowledgements. If you have any queries please contact the Copyright Team.

Copyright © 2023 AQA and its licensors. All rights reserved.

WP/M/MW/Jun23/7162/3A/E3

