



**Surname** \_\_\_\_\_

**Forename(s)** \_\_\_\_\_

**Centre Number** \_\_\_\_\_

**Candidate Number** \_\_\_\_\_

**Candidate Signature** \_\_\_\_\_

**I declare this is my own work.**

**A-level  
PSYCHOLOGY**

**Paper 1 Introductory topics in  
psychology**

**7182/1**

**Friday 19 May 2023**

**Morning**

**Time allowed: 2 hours**

**At the top of the page, write your  
surname and forename(s), your centre  
number, your candidate number and add  
your signature.**

**[Turn over]**



**MATERIALS**

**For this paper you may use:**

- **a calculator.**

**INSTRUCTIONS**

- **Use black ink or black ball-point pen.**
- **Answer ALL questions.**
- **You must answer the questions in the spaces provided. Do NOT write on blank pages.**
- **If you need extra space for your answer(s), use the lined pages at the end of this book. Write the question number against your answer(s).**
- **Do all rough work in this book. Cross through any work you do not want to be marked.**



## **INFORMATION**

- **The marks for questions are shown in brackets.**
- **The maximum mark for this paper is 96.**
- **Questions should be answered in continuous prose. You will be assessed on your ability to:**
  - **use good English**
  - **organise information clearly**
  - **use specialist vocabulary where appropriate.**

**DO NOT TURN OVER UNTIL TOLD TO DO SO**



## SECTION A


### SOCIAL INFLUENCE

**Answer ALL questions in this section.**


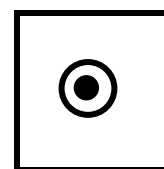

**Only TWO answers for each question is allowed.**

**For each question completely fill in the circles alongside the appropriate answers.**

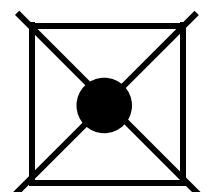
**CORRECT METHOD**



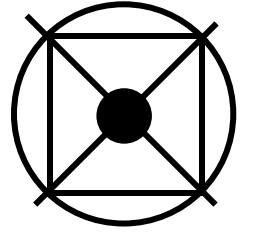
**WRONG METHODS**



**If you want to change your answer you must cross out your original answer as shown.**



**If you wish to return to an answer previously crossed out, ring the answer you now wish to select as shown.**



**[Turn over]**



0	1
---	---

**Which TWO of the following best describe Zimbardo's prison study?**

**Shade TWO boxes only. [2 marks]**

- ☐ **A Controlled observation**
- ☐ **B Covert observation**
- ☐ **C Laboratory experiment**
- ☐ **D Natural experiment**
- ☐ **E Participant observation**

**BLANK PAGE**

**[Turn over]**



**Students Natasha and Tanya are buying food in the supermarket on their way home from school. As they are paying, they notice their psychology teacher, Mr Boat, at the far end of the queue. They both smile and wave.**

**Mr Boat shouts, “Hey, you two! I think you owe me homework. Wait there so we can have a quick chat.”**

**Natasha and Tanya finish paying, glance at each other giggling and hurry out of the supermarket.**





0	2
---	---

**Using your knowledge of obedience research, explain possible reasons why the students failed to obey their teacher.  
[6 marks]**

---

---

---

---

---

---

---

---

---

---


---

---

**[Turn over]**



10

This image shows a blank sheet of white paper with horizontal ruling lines. The lines are evenly spaced and run across the width of the page. There are no margins, text, or other markings on the paper.

---

---

---

---

---

**[Turn over]**



0	3
---	---

**Discuss research into minority influence.  
[16 marks]**

**You may use this space to plan your  
answer.**

---

---

---

---

---





14

This image shows a blank sheet of white paper with horizontal ruling lines. The lines are evenly spaced and run across the width of the page. There are no margins, text, or other markings on the paper.



This image shows a blank sheet of white paper with horizontal ruling lines. The lines are evenly spaced and run across the width of the page. There are no margins, text, or other markings on the paper.



This image shows a blank sheet of white paper with horizontal ruling lines. The lines are evenly spaced and run across the width of the page. There are no margins, text, or other markings on the paper.

**[Turn over]**



This image shows a blank sheet of white paper with horizontal ruling lines. The lines are evenly spaced and run across the width of the page. There are no margins, text, or other markings on the paper.

This image shows a blank sheet of white paper with horizontal ruling lines. The lines are evenly spaced and run across the width of the page. There are no margins, text, or other markings on the paper.

**[Turn over]**



This image shows a blank sheet of white paper with horizontal ruling lines. The lines are evenly spaced and run across the width of the page. There are no margins, text, or other markings on the paper.

24



## **SECTION B**

### **MEMORY**

**Answer ALL questions in this section.**

**Two groups of participants took part in a memory experiment. The researcher read 20 words to the participants.**

- **Participants in GROUP A had to write down the words immediately after they had heard them.**
- **Participants in GROUP B had to write down the words after they had read a book for one minute.**

**The researcher noticed that:**

- **participants in GROUP A generally recalled words from the beginning and the end of the list**



- participants in **GROUP B** generally recalled words from the beginning of the list only.

0	4
---	---

**Outline what is meant by standardisation AND suggest ONE way standardisation could have been used in this experiment. [2 marks]**

---

---

---

---

---

---

---

**[Turn over]**



**BLANK PAGE**





0	5
---	---

**Outline what is meant by randomisation  
AND suggest ONE way randomisation  
could have been used in this experiment.  
[2 marks]**

---

---

---

---

---

---

---

**[Turn over]**



0	6
---	---

**Explain the results of this experiment with reference to the multi-store model of memory. [4 marks]**

This image shows a blank sheet of white paper with horizontal ruling lines. The lines are evenly spaced and run across the width of the page. There are no margins, text, or other markings on the paper.

[illegible]

**[Turn over]**



0	7
---	---

**Discuss research into the effects of anxiety on the accuracy of eyewitness testimony. [16 marks]**

**You may use this space to plan your answer.**

---

---

---

---



This image shows a blank sheet of white paper with horizontal ruling lines. The lines are evenly spaced and run across the width of the page. There are no margins, text, or other markings on the paper.

**[Turn over]**



**30**

This image shows a blank sheet of white paper with horizontal ruling lines. The lines are evenly spaced and run across the width of the page. There are no margins, text, or other markings on the paper.

3 0

This image shows a blank sheet of white paper with horizontal ruling lines. The lines are evenly spaced and run across the width of the page. There are no margins, text, or other markings on the paper.

**[Turn over]**



[illegible]





This image shows a blank sheet of white paper with horizontal ruling lines. The lines are evenly spaced and run across the width of the page. There are no margins, text, or other markings on the paper.



This image shows a blank sheet of white paper with horizontal ruling lines. The lines are evenly spaced and run across the width of the page. There are no margins, text, or other markings on the paper.



24



**BLANK PAGE**

**[Turn over]**



**SECTION C****ATTACHMENT**

**Answer ALL questions in this section.**

<b>0</b>	<b>8</b>
----------	----------

**Outline the learning theory of attachment. [4 marks]**

---

---

---

---

---

---

---

---

---

---





This image shows a blank sheet of white paper with horizontal ruling lines. The lines are evenly spaced and run across the width of the page. There are no margins, text, or other markings on the paper.

**[Turn over]**



0	9
---	---

**Outline Van Ijzendoorn's investigation of cultural variations in attachment.  
[4 marks]**

This image shows a blank sheet of white paper with horizontal ruling lines. The lines are evenly spaced and run across the width of the page. There are no margins, text, or other markings on the paper.

This image shows a blank sheet of white paper with horizontal ruling lines. The lines are evenly spaced and run across the width of the page. There are no margins, text, or other markings on the paper.

**[Turn over]**



**Ryan is a 14-year-old boy who spent the first five years of his life in care.**

**Ryan has a difficult relationship with his adoptive parents and has few friends. His recent school report described him as achieving below average in most subjects. Ryan has also recently been in trouble with the police for antisocial behaviour.**

<b>1</b>	<b>0</b>
----------	----------

**Discuss Bowlby's theory of maternal deprivation. Refer to Ryan in your answer. [16 marks]**

**You may use this space to plan your answer.**



---

---

---

---

---

---

---

---

---


[Turn over]



This image shows a blank sheet of white paper with horizontal ruling lines. The lines are evenly spaced and run across the width of the page. There are no margins, text, or other markings on the paper.

This image shows a blank sheet of white paper with horizontal ruling lines. The lines are evenly spaced and run across the width of the page. There are no margins, text, or other markings on the paper.

**[Turn over]**



This image shows a blank sheet of white paper with horizontal ruling lines. The lines are evenly spaced and run across the width of the page. There are no margins, text, or other markings on the paper.



[illegible]

**[Turn over]**



[illegible]

[illegible]

**[Turn over]**



This image shows a blank sheet of white paper with horizontal ruling lines. The lines are evenly spaced and run across the width of the page. There are no margins, text, or other markings on the paper.

This image shows a blank sheet of white paper with horizontal ruling lines. The lines are evenly spaced and run across the width of the page. There are no margins, text, or other markings on the paper.

**[Turn over]**



24



**BLANK PAGE**

**[Turn over]**



**SECTION D****PSYCHOPATHOLOGY**

**Answer ALL questions in this section.**

**Dave wants to achieve what he thinks of as the perfect body and will often visit the gym up to three times a day. He finds it difficult to concentrate in the office as he is constantly thinking about his next workout. Even though his friends tell him he looks great, Dave worries his body shape is inferior compared to the other men at the gym.**





1	1
---	---

**Briefly outline the deviation from ideal mental health definition of abnormality. Refer to Dave in your answer. [4 marks]**

This image shows a blank sheet of white paper with horizontal ruling lines. The lines are evenly spaced and run across the width of the page. There are no margins, text, or other markings on the paper.

**[Turn over]**



[illegible]

1	2
---	---

**Another way of defining abnormality is failure to function adequately.**

**Evaluate the failure to function adequately definition of abnormality.  
[5 marks]**

---

---

---

---

---

---

---

---

---

---

---

---

**[Turn over]**



# 60

This image shows a blank sheet of white paper with horizontal ruling lines. The lines are evenly spaced and run across the width of the page. There are no margins, text, or other markings on the paper.

1	3
---	---

**Patients with depression were asked to keep a daily diary of their experiences as part of their therapy. Two researchers analysed the same extracts from the diaries using content analysis.**

**What is content analysis? [1 mark]**

---

---

---

**[Turn over]**



1	4
---	---

**Explain ONE way in which the researchers could have used content analysis to analyse diary extracts in this investigation. [2 marks]**

---

---

---

---

---

---

---

**The two researchers' analyses of the diary extracts were found to be quite different.**



1	5
---	---

**Explain how the reliability of this content analysis could be improved. [4 marks]**

This image shows a blank sheet of white paper with horizontal ruling lines. The lines are evenly spaced and run across the width of the page. There are no margins, text, or other markings on the paper.

**[Turn over]**



**One of the diaries included the following extract:**

**‘Managed to drag myself out of the house yesterday but wished I hadn’t. Went to the shop but dropped my change at the till. Everybody knew I was useless. Why can I not do anything right? No one else I know does such stupid things.’**

<b>1</b>	<b>6</b>
----------	----------

**Ellis proposed an ABC model of depression. Outline and evaluate the ABC model of depression. Refer to this diary extract in your answer. [8 marks]**

---

---

---





This image shows a blank sheet of white paper with horizontal ruling lines. The lines are evenly spaced and run across the width of the page. There are no margins, text, or other markings on the paper.



[illegible]



70

This image shows a blank sheet of white paper with horizontal ruling lines. The lines are evenly spaced and run across the width of the page. There are no margins, text, or other markings on the paper.



This image shows a blank sheet of white paper with horizontal ruling lines. The lines are evenly spaced and run across the width of the page. There are no margins, text, or other markings on the paper.

# END OF QUESTIONS

24





**Additional page, if required.**

**Write the question numbers in the left-hand margin.**

This image shows a blank sheet of white paper with horizontal ruling lines. A single vertical line runs down the left side, creating a margin. There are 20 horizontal lines in total, evenly spaced across the page. The lines are thin and black.

**Additional page, if required.**

**Write the question numbers in the left-hand margin.**

[illegible]

**Additional page, if required.**

**Write the question numbers in the left-hand margin.**

This image shows a blank sheet of white paper with horizontal ruling lines. A single vertical line runs down the left side, creating a margin. There are 20 horizontal lines in total, evenly spaced across the page. The lines are black and have a consistent thickness. The overall appearance is that of a standard notebook or a template for writing.

BLANK PAGE

For Examiner's Use	
Section	Mark
A	
B	
C	
D	
TOTAL	

Copyright information

For confidentiality purposes, all acknowledgements of third-party copyright material are published in a separate booklet. This booklet is published after each live examination series and is available for free download from [www.aqa.org.uk](http://www.aqa.org.uk).

Permission to reproduce all copyright material has been applied for. In some cases, efforts to contact copyright-holders may have been unsuccessful and AQA will be happy to rectify any omissions of acknowledgements. If you have any queries please contact the Copyright Team.

Copyright © 2023 AQA and its licensors. All rights reserved.

WP/M/MK/Jun23/7182/1/E3

