



**Surname** \_\_\_\_\_

**Forename(s)** \_\_\_\_\_

**Centre Number** \_\_\_\_\_

**Candidate Number** \_\_\_\_\_

**Candidate Signature** \_\_\_\_\_

**I declare this is my own work.**

**GCSE**

**RELIGIOUS STUDIES  
(SHORT COURSE)**

**Section 5: Themes**

**8061/5**

**Tuesday 23 May 2023**

**Afternoon**

**Time allowed: 1 hour 45 minutes**

**[Turn over]**



**BLANK PAGE**



**At the front of this book, write your surname and forename(s), your centre number, your candidate number and add your signature.**

## **MATERIALS**

**For this paper you must ensure you also have:**

- **the Question Paper/Answer Book for BOTH the RELIGION SECTIONS you are entered for (Buddhism, Christianity, Islam OR Judaism). You will have 1 hour 45 minutes to complete ALL THREE Question Paper/Answer Books.**

**[Turn over]**



## INSTRUCTIONS

- **Use black ink or black ball-point pen.**
- **Fill in the front of this book AND your other two books.**
- **Answer BOTH questions in this section.**
- **If you need extra space for your answer(s), use the lined pages at the end of this book. Write the question number against your answer(s).**
- **Do all rough work in this book. Cross through any work you do not want to be marked.**
- **You must answer the questions in the spaces provided. Do NOT write on blank pages.**



## **INFORMATION**

- **The maximum mark for this section is 48.**
- **The marks for questions are shown in brackets.**

## **ADVICE**

**You are advised to spend 50 minutes on THIS SECTION and 50 minutes on the RELIGION SECTIONS.**

**DO NOT TURN OVER UNTIL TOLD TO DO SO**



0	1
---	---

## **THEME A: RELATIONSHIPS AND FAMILIES**

0	1	.	1
---	---	---	---

**Which ONE of the following means an unmarried couple living together?**  
**[1 mark]**

**Put a tick (✓) in the box next to the correct answer.**

☐

**A Procreation**

☐

**B Cohabitation**

☐

**C Divorce**

☐

**D Polygamy**

1
---



01.2

Give TWO reasons why many religious believers accept remarriage. [2 marks]

1 \_\_\_\_\_  
 \_\_\_\_\_  
 \_\_\_\_\_

2 \_\_\_\_\_  
 \_\_\_\_\_  
 \_\_\_\_\_

[Turn over]

2

**0 1 . 3**

# Explain TWO contrasting religious beliefs about gender equality.

**In your answer you must refer to one or more religious traditions. [4 marks]**

[illegible]



---

---

---

---

**[Turn over]**

<hr/>
<b>4</b>



**0 1 . 4**

# Explain TWO religious beliefs about the role of children within the family.

**Refer to sacred writings or another source of religious belief and teaching in your answer. [5 marks]**

This image shows a blank sheet of white paper with horizontal ruling lines. The lines are evenly spaced and run across the width of the page. There are no margins, text, or other markings on the paper.

---

---

---

---

---

---

---

---

---

---

[Turn over]

5



0	1	.	5
---	---	---	---

**‘Married couples should not use contraception.’**

**Evaluate this statement.**

**In your answer you:**

- **should give reasoned arguments in support of this statement**
- **should give reasoned arguments to support a different point of view**
- **should refer to religious arguments**
- **may refer to non-religious arguments**
- **should reach a justified conclusion.**

**[12 marks]**

---

---

---





14

[illegible]

1 4



This image shows a blank sheet of white paper with horizontal ruling lines. The lines are evenly spaced and run across the width of the page. There are no margins, text, or other markings on the paper.



[illegible]

**[Turn over]**



This image shows a blank sheet of white paper with horizontal ruling lines. The lines are evenly spaced and run across the width of the page. There are no margins, text, or other markings on the paper.



20

This image shows a blank sheet of white paper with horizontal ruling lines. The lines are evenly spaced and run across the width of the page. There are no margins, text, or other markings on the paper.

12



20

**BLANK PAGE**

**[Turn over]**



0	2
---	---

## THEME B: RELIGION, PEACE AND CONFLICT

0	2	.	1
---	---	---	---

**Which ONE of the following best expresses the idea of accepting someone's apology for what they have done wrong? [1 mark]**

**Put a tick (✓) in the box next to the correct answer.**

☐

**A Forgiveness**

☐

**B Justice**

☐

**C Protest**

☐

**D Punishment**



1
---

0	2	.	2
---	---	---	---

**Give TWO reasons why a conflict may be said to be a 'holy war'. [2 marks]**

**1** \_\_\_\_\_

\_\_\_\_\_

\_\_\_\_\_

**2** \_\_\_\_\_

\_\_\_\_\_

\_\_\_\_\_

**[Turn over]**

<hr/>
<b>2</b>



0	2	.	3
---	---	---	---

# Explain TWO similar religious beliefs about a country using weapons of mass destruction.

**In your answer you must refer to one or more religious traditions. [4 marks]**

[illegible]



---

---

---

---

[Turn over]

4



0	2	.	4
---	---	---	---

**Explain TWO reasons why some religious believers choose to work for an organisation that helps victims of war.**

**Refer to sacred writings or another source of religious belief and teaching in your answer. [5 marks]**

---

---

---

---

---

---

---

---

---

---

---

---

---

---

---

---

---

---

---

---

---

[Turn over]

5



0	2	.	5
---	---	---	---

**‘All religious believers should be pacifists and never fight.’**

**Evaluate this statement.**

**In your answer you:**

- **should give reasoned arguments in support of this statement**
- **should give reasoned arguments to support a different point of view**
- **should refer to religious arguments**
- **may refer to non-religious arguments**
- **should reach a justified conclusion.**

**[12 marks]**

---

---

---

This image shows a blank sheet of white paper with horizontal ruling lines. The lines are evenly spaced and run across the width of the page. There are no margins, text, or other markings on the paper.


**[Turn over]**




30

This image shows a blank sheet of white paper with horizontal ruling lines. The lines are evenly spaced and run across the width of the page. There are no margins, text, or other markings on the paper.

3 0



[illegible]





This image shows a blank sheet of white paper with horizontal ruling lines. The lines are evenly spaced and run across the width of the page. There are no margins, text, or other markings on the paper.



This image shows a blank sheet of white paper with horizontal ruling lines. The lines are evenly spaced and run across the width of the page. There are no margins, text, or other markings on the paper.

# END OF QUESTIONS

12



**Additional page, if required.**

**Write the question numbers in the left-hand margin.**

This image shows a blank sheet of white paper with horizontal ruling lines. A single vertical line runs down the left side, creating a narrow margin. There are 20 horizontal lines in total, evenly spaced across the page. The lines are thin and black.

**Additional page, if required.**

**Write the question numbers in the left-hand margin.**

This image shows a blank sheet of white paper with horizontal black ruling lines. A single vertical black line runs down the left side, creating a margin. There are 20 horizontal lines in total, evenly spaced across the page. The lines extend from the right edge of the paper towards the left margin line.

**Additional page, if required.**

**Write the question numbers in the left-hand margin.**

This image shows a blank sheet of white paper with horizontal ruling lines. A single vertical line runs down the left side, creating a margin. There are 20 horizontal lines in total, evenly spaced across the page. The lines are thin and black.

BLANK PAGE

For Examiner's Use	
Question	Mark
01.1	
01.2	
01.3	
01.4	
01.5	
02.1	
02.2	
02.3	
02.4	
02.5	
TOTAL	

Copyright information

For confidentiality purposes, all acknowledgements of third-party copyright material are published in a separate booklet. This booklet is published after each live examination series and is available for free download from [www.aqa.org.uk](http://www.aqa.org.uk).


Permission to reproduce all copyright material has been applied for. In some cases, efforts to contact copyright-holders may have been unsuccessful and AQA will be happy to rectify any omissions of acknowledgements. If you have any queries please contact the Copyright Team.

Copyright © 2023 AQA and its licensors. All rights reserved.

WP/M/MK/Jun23/8061/5/E3



4 0



2 3 6 G 8 0 6 1 / 5