



Surname _____

Forename(s) _____

Centre Number _____

Candidate Number _____

Candidate Signature _____

I declare this is my own work.

GCSE

RELIGIOUS STUDIES B

Paper 2X Perspectives on faith (Islam)

8063/2X

Tuesday 23 May 2023 Afternoon

Time allowed: 1 hour 45 minutes

[Turn over]



BLANK PAGE



At the front of this book, write your surname and forename(s), your centre number, your candidate number and add your signature.

MATERIALS

You must ensure you also have the Question Paper/Answer Book for the themes OR textual studies option you are entered for.

INSTRUCTIONS

- Use black ink or black ball-point pen.**
- Fill in the front of this book and the front of the Question Paper/Answer Book for the themes OR textual studies option.**

[Turn over]



- **Answer ALL questions.**
- **If you need extra space for your answer(s), use the lined pages at the end of this book. Write the question number against your answer(s).**
- **Do all rough work in this book. Cross through any work you do not want to be marked.**
- **You must answer the questions in the spaces provided. Do NOT write on blank pages.**

INFORMATION

- **The maximum mark for this paper is 54.**
- **The marks for the questions are shown in brackets.**



- **Spelling, Punctuation and Grammar (SPaG) will be assessed in Question 01.5 in the Beliefs section and Question 02.5 in the Practices section.**

ADVICE

You will have 1 hour 45 minutes to complete BOTH Question Paper/Answer Books. You are advised to spend 50 minutes on this paper and 50 minutes on your themes OR textual studies option.

DO NOT TURN OVER UNTIL TOLD TO DO SO



0	1
---	---

ISLAM: BELIEFS

0	1	.	1
---	---	---	---

Which ONE of the following words refers to the all-powerful nature of God?
[1 mark]

Put a tick (✓) in the box next to the correct answer.

☐

A Beneficence

☐

B Fairness

☐

C Mercy

☐

D Omnipotence

<hr/>
1



0	1	.	2
---	---	---	---

**Give TWO ways in which Ibrahim
(Abraham) is important for Muslims.
[2 marks]**

1 _____

2 _____

<hr/>
2

[Turn over]



0	1	.	3
---	---	---	---

Explain TWO contrasting beliefs about Jesus (Isa) held by Islam and the main religious tradition of Great Britain.

**You should name the main religious tradition of Great Britain in your answer.
[4 marks]**



This image shows a blank sheet of white paper with horizontal ruling lines. The lines are evenly spaced and run across the width of the page. There are no margins, text, or other markings on the paper.

[Turn over]

4



01.4

Explain TWO Muslim beliefs about life after death.

Refer to scripture or another source of Muslim belief and teaching in your answer. [5 marks]

[illegible]

This image shows a blank sheet of white paper with horizontal ruling lines. The lines are evenly spaced and run across the width of the page. There are no margins, text, or other markings on the paper.

[Turn over]



0	1	.	5
---	---	---	---

‘For Muslims, the most important thing in Muhammad’s life was his teaching about the oneness of God (Tawhid).’

Evaluate this statement.

In your answer you should:

- **give reasoned arguments to support this statement**
- **give reasoned arguments to support a different point of view**
- **refer to Muslim teaching**
- **reach a justified conclusion.**

[12 marks]

[SPaG 3 marks]





14

This image shows a blank sheet of white paper with horizontal ruling lines. The lines are evenly spaced and run across the width of the page. There are no margins, text, or other markings on the paper.

1 4



This image shows a blank sheet of white paper with horizontal ruling lines. The lines are evenly spaced and run across the width of the page. There are no margins, text, or other markings on the paper.

This image shows a blank sheet of white paper with horizontal ruling lines. The lines are evenly spaced and run across the width of the page. There are no margins, text, or other markings on the paper.

[Turn over]



[illegible]

This image shows a blank sheet of white paper with horizontal ruling lines. The lines are evenly spaced and run across the width of the page. There are no margins, text, or other markings on the paper.


[Turn over]



[illegible]

This image shows a blank sheet of white paper with horizontal ruling lines. The lines are evenly spaced and run across the width of the page. There are no margins, text, or other markings on the paper.

[Turn over]



22

15



BLANK PAGE

[Turn over]



0	2
---	---

ISLAM: PRACTICES

0	2	.	1
---	---	---	---

Which ONE of the following is NOT one of the Ten Obligatory Acts of Shi'a Islam? [1 mark]

Put a tick (✓) in the box next to the correct answer.

☐

A Jihad

☐

B Khums

☐

C Shahadah

☐

D Zakah

<hr/>
1



02.2

Name TWO Muslim festivals. [2 marks]

1 _____

2 _____

2

[Turn over]



0 2 . 3

Explain TWO ways in which going on hajj might influence the lives of Muslims.

[4 marks]

This image shows a blank sheet of white paper with horizontal ruling lines. The lines are evenly spaced and run across the width of the page. There are no margins, text, or other markings on the paper.

[illegible]

[Turn over]


4



0 2 . 4

Explain TWO Muslim beliefs about GREATER jihad.

Refer to scripture or another source of Muslim belief and teaching in your answer. [5 marks]

[illegible]

5



02.5

‘The rak’ahs (ritual prayer movements) help Muslims to focus on God.’

Evaluate this statement.

In your answer you should:

- **give reasoned arguments to support this statement**
- **give reasoned arguments to support a different point of view**
- **refer to Muslim teaching**
- **reach a justified conclusion.**

[12 marks]

[SPaG 3 marks]



This image shows a blank sheet of white paper with horizontal ruling lines. The lines are evenly spaced and run across the width of the page. There are no margins, text, or other markings on the paper.

[Turn over]




[illegible]

This image shows a blank sheet of white paper with horizontal ruling lines. The lines are evenly spaced and run across the width of the page. There are no margins, text, or other markings on the paper.

This image shows a blank sheet of white paper with horizontal ruling lines. The lines are evenly spaced and run across the width of the page. There are no margins, text, or other markings on the paper.

[Turn over]



This image shows a blank sheet of white paper with horizontal ruling lines. The lines are evenly spaced and run across the width of the page. There are no margins, text, or other markings on the paper.




15



Additional page, if required.

Write the question numbers in the left-hand margin.

This image shows a blank sheet of white paper with horizontal ruling lines. A single vertical line runs down the left side, creating a margin. There are 20 horizontal lines in total, evenly spaced across the page. The lines are thin and black.

Additional page, if required.

Write the question numbers in the left-hand margin.

[illegible]

Additional page, if required.

Write the question numbers in the left-hand margin.

[illegible]

BLANK PAGE

For Examiner's Use	
Question	Mark
1.1	
1.2	
1.3	
1.4	
1.5	
2.1	
2.2	
2.3	
2.4	
2.5	
TOTAL	

Copyright information

For confidentiality purposes, all acknowledgements of third-party copyright material are published in a separate booklet. This booklet is published after each live examination series and is available for free download from www.aqa.org.uk.

Permission to reproduce all copyright material has been applied for. In some cases, efforts to contact copyright-holders may have been unsuccessful and AQA will be happy to rectify any omissions of acknowledgements. If you have any queries please contact the Copyright Team.

Copyright © 2023 AQA and its licensors. All rights reserved.

WP/M/MK/Jun23/8063/2X/E3

